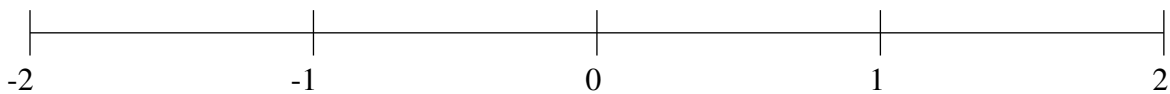


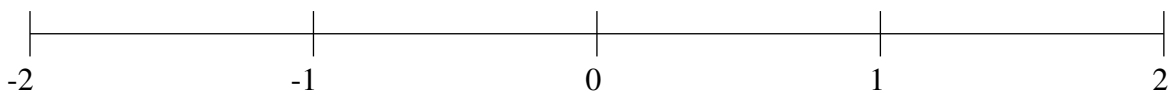
Classification de Fractions (C)

À l'aide des droites numériques, classifiez chaque série de fractions ci-dessous en ordre croissant.

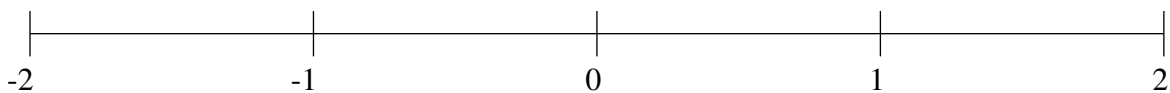
$$1\frac{89}{100}, -\frac{1}{5}, 1\frac{15}{29}, -1\frac{21}{25}, -\frac{23}{27}$$



$$-1\frac{6}{13}, -\frac{1}{3}, 1\frac{9}{11}, \frac{7}{16}, 1\frac{3}{7}$$



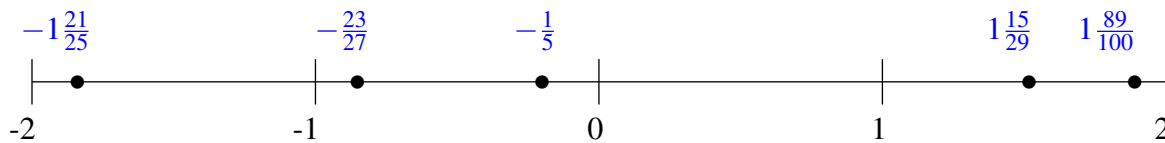
$$-1\frac{1}{2}, -\frac{11}{82}, -\frac{13}{20}, \frac{5}{8}, 1\frac{6}{7}$$



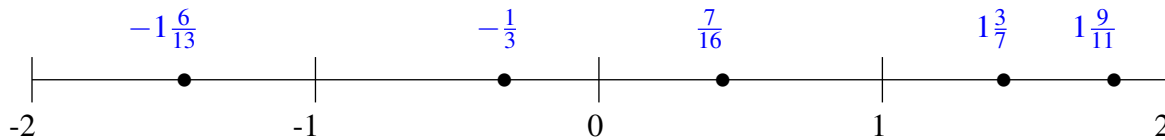
Classification de Fractions (C) Solutions

À l'aide des droites numériques, classifiez chaque série de fractions ci-dessous en ordre croissant.

$$1\frac{89}{100}, -\frac{1}{5}, 1\frac{15}{29}, -1\frac{21}{25}, -\frac{23}{27}$$



$$-1\frac{6}{13}, -\frac{1}{3}, 1\frac{9}{11}, \frac{7}{16}, 1\frac{3}{7}$$



$$-1\frac{1}{2}, -\frac{11}{82}, -\frac{13}{20}, \frac{5}{8}, 1\frac{6}{7}$$

