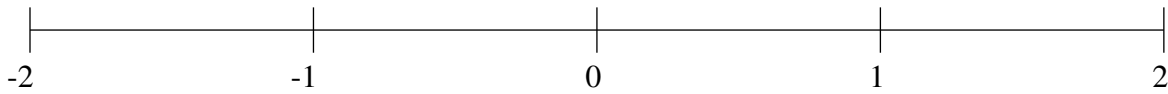


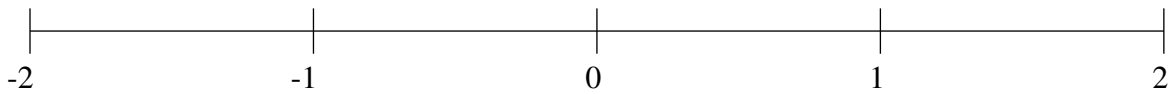
Classification de Fractions (J)

À l'aide des droites numériques, classifiez chaque série de fractions ci-dessous en ordre croissant.

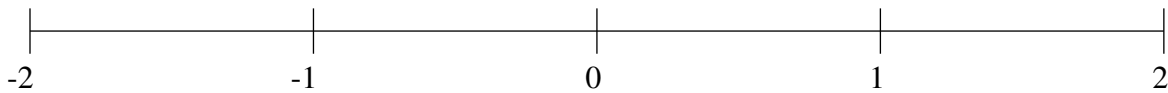
$$-\frac{1}{4}, \frac{1}{2}, -1\frac{1}{4}, \frac{3}{5}, -\frac{3}{5}$$



$$\frac{4}{25}, -\frac{1}{5}, \frac{1}{2}, \frac{4}{5}, -1\frac{4}{5}$$



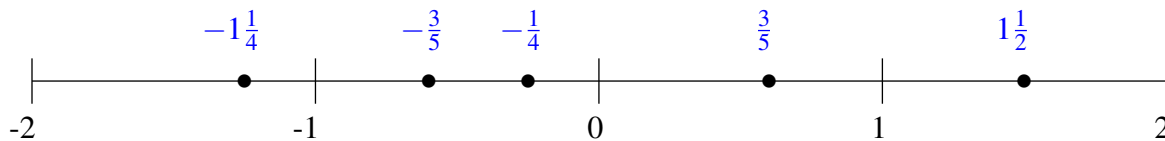
$$-\frac{3}{5}, -1\frac{2}{5}, \frac{8}{25}, 1\frac{3}{4}, \frac{17}{20}$$



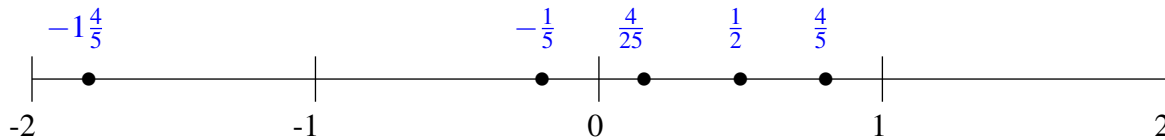
Classification de Fractions (J) Solutions

À l'aide des droites numériques, classifiez chaque série de fractions ci-dessous en ordre croissant.

$$-\frac{1}{4}, 1\frac{1}{2}, -1\frac{1}{4}, \frac{3}{5}, -\frac{3}{5}$$



$$\frac{4}{25}, -\frac{1}{5}, \frac{1}{2}, \frac{4}{5}, -1\frac{4}{5}$$



$$-\frac{3}{5}, -1\frac{2}{5}, \frac{8}{25}, 1\frac{3}{4}, \frac{17}{20}$$

