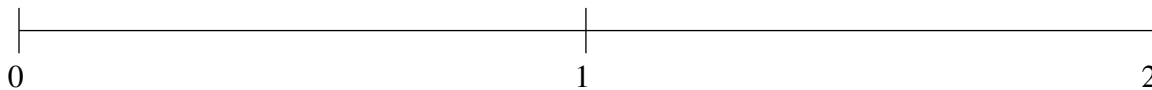


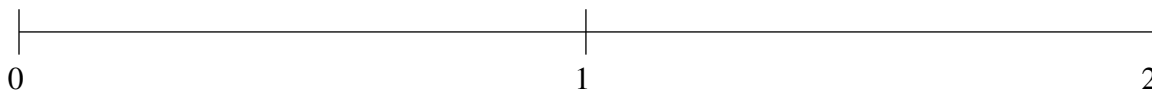
Classification de Fractions (H)

À l'aide des droites numériques, classifiez chaque série de fractions ci-dessous en ordre croissant.

$$1\frac{2}{11}, \frac{2}{3}, 1\frac{1}{2}, 1\frac{6}{7}, \frac{1}{3}$$



$$1\frac{13}{16}, \frac{6}{13}, \frac{3}{71}, 1\frac{1}{12}, \frac{7}{9}$$



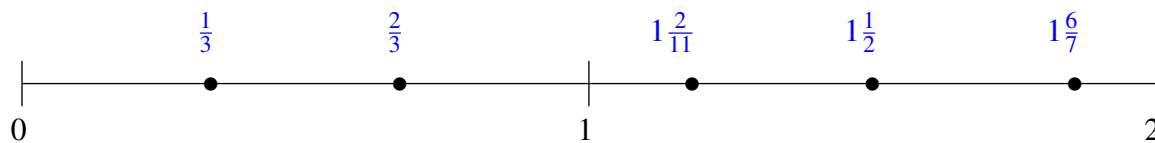
$$\frac{9}{10}, 1\frac{1}{2}, \frac{7}{13}, \frac{3}{13}, 1\frac{1}{5}$$



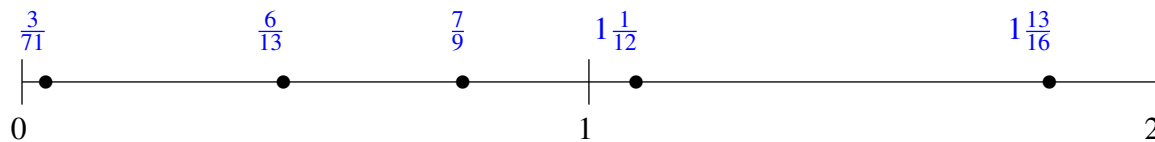
Classification de Fractions (H) Solutions

À l'aide des droites numériques, classifiez chaque série de fractions ci-dessous en ordre croissant.

$$1\frac{2}{11}, \frac{2}{3}, 1\frac{1}{2}, 1\frac{6}{7}, \frac{1}{3}$$



$$1\frac{13}{16}, \frac{6}{13}, \frac{3}{71}, 1\frac{1}{12}, \frac{7}{9}$$



$$\frac{9}{10}, 1\frac{1}{2}, \frac{7}{13}, \frac{3}{13}, 1\frac{1}{5}$$

