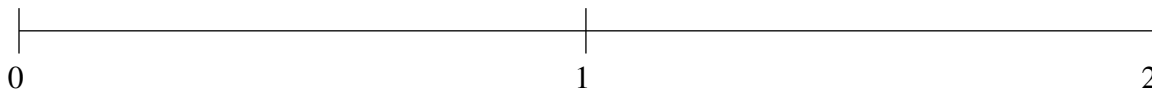


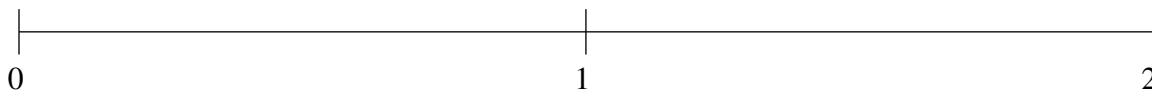
Classification de Fractions (D)

À l'aide des droites numériques, classifiez chaque série de fractions ci-dessous en ordre croissant.

$$1\frac{25}{38}, \frac{4}{5}, \frac{9}{32}, 1\frac{3}{19}, 1\frac{23}{24}$$



$$\frac{4}{7}, \frac{76}{83}, 1\frac{2}{3}, \frac{1}{11}, 1\frac{1}{4}$$



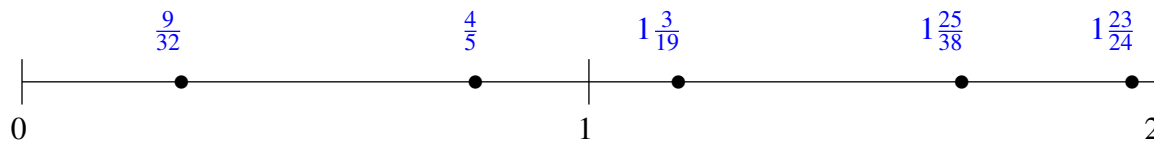
$$1\frac{34}{59}, 1\frac{1}{5}, \frac{1}{2}, \frac{1}{42}, 1\frac{11}{12}$$



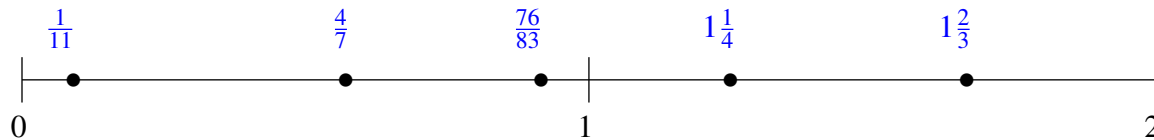
Classification de Fractions (D) Solutions

À l'aide des droites numériques, classifiez chaque série de fractions ci-dessous en ordre croissant.

$$1\frac{25}{38}, \frac{4}{5}, \frac{9}{32}, 1\frac{3}{19}, 1\frac{23}{24}$$



$$\frac{4}{7}, \frac{76}{83}, 1\frac{2}{3}, \frac{1}{11}, 1\frac{1}{4}$$



$$1\frac{34}{59}, 1\frac{1}{5}, \frac{1}{2}, \frac{1}{42}, 1\frac{11}{12}$$

