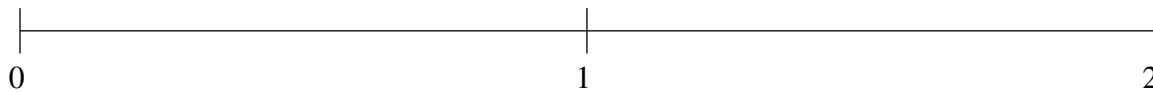


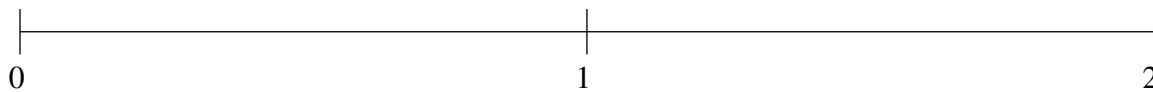
Classification de Fractions (C)

À l'aide des droites numériques, classifiez chaque série de fractions ci-dessous en ordre croissant.

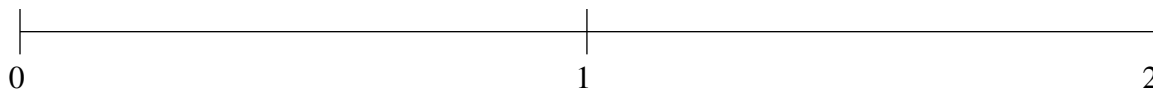
$$\frac{1}{42}, \frac{1}{3}, 1\frac{15}{19}, \frac{2}{3}, \frac{1}{3}$$



$$1\frac{6}{37}, \frac{1}{5}, 1\frac{29}{33}, \frac{15}{23}, 1\frac{1}{2}$$



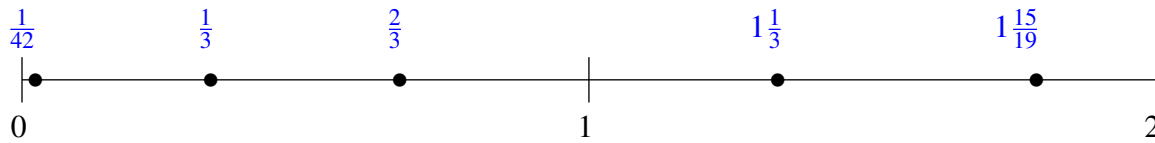
$$\frac{31}{33}, 1\frac{10}{11}, \frac{6}{41}, \frac{9}{16}, 1\frac{11}{20}$$



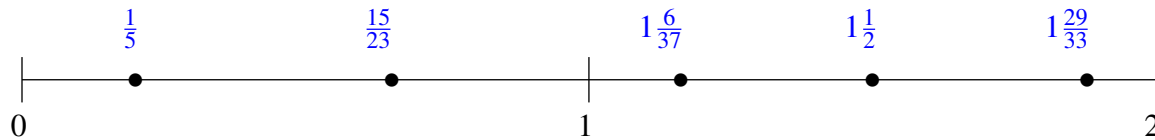
Classification de Fractions (C) Solutions

À l'aide des droites numériques, classifiez chaque série de fractions ci-dessous en ordre croissant.

$$\frac{1}{42}, 1\frac{1}{3}, 1\frac{15}{19}, \frac{2}{3}, \frac{1}{3}$$



$$1\frac{6}{37}, \frac{1}{5}, 1\frac{29}{33}, \frac{15}{23}, 1\frac{1}{2}$$



$$\frac{31}{33}, 1\frac{10}{11}, \frac{6}{41}, \frac{9}{16}, 1\frac{11}{20}$$

