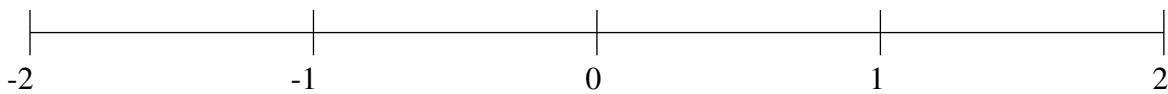


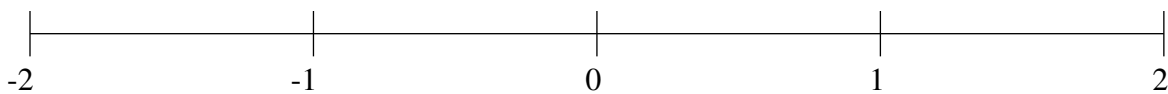
Classification de Fractions (H)

À l'aide des droites numériques, classifiez chaque série de fractions ci-dessous en ordre croissant.

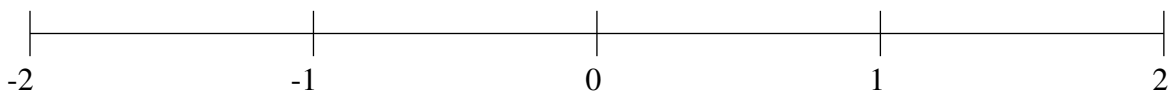
$$\frac{11}{15}, 1\frac{13}{40}, -\frac{1}{6}, -\frac{6}{11}, -1\frac{2}{3}$$



$$\frac{5}{16}, -\frac{8}{13}, -1\frac{13}{20}, 1\frac{5}{41}, 1\frac{2}{3}$$



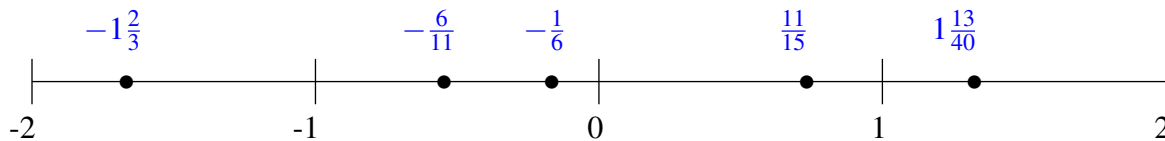
$$1\frac{3}{4}, -\frac{14}{19}, -1\frac{1}{6}, -\frac{1}{24}, \frac{9}{11}$$



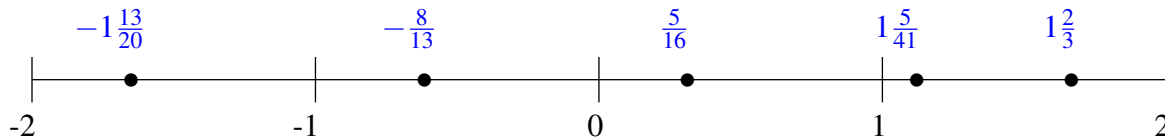
Classification de Fractions (H) Solutions

À l'aide des droites numériques, classifiez chaque série de fractions ci-dessous en ordre croissant.

$$\frac{11}{15}, 1\frac{13}{40}, -\frac{1}{6}, -\frac{6}{11}, -1\frac{2}{3}$$



$$\frac{5}{16}, -\frac{8}{13}, -1\frac{13}{20}, 1\frac{5}{41}, 1\frac{2}{3}$$



$$1\frac{3}{4}, -\frac{14}{19}, -1\frac{1}{6}, -\frac{1}{24}, \frac{9}{11}$$

