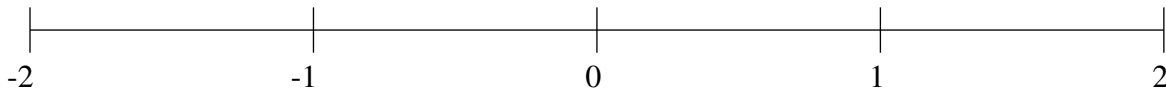


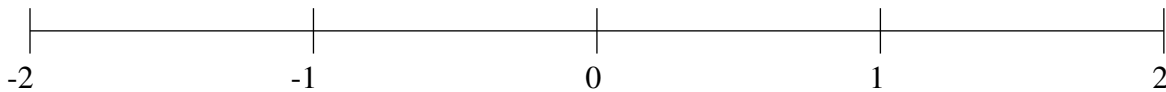
Classification de Fractions (E)

À l'aide des droites numériques, classifiez chaque série de fractions ci-dessous en ordre croissant.

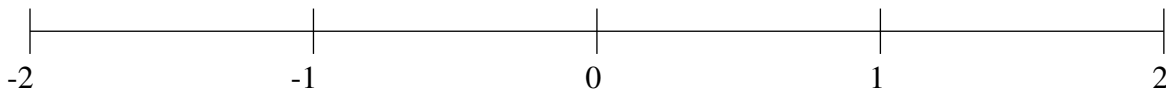
$$1\frac{1}{4}, \frac{17}{56}, \frac{3}{4}, 1\frac{2}{3}, -\frac{31}{42}$$



$$\frac{1}{5}, -1\frac{1}{32}, -1\frac{2}{3}, 1\frac{1}{4}, \frac{43}{56}$$



$$-\frac{9}{10}, -\frac{1}{4}, -1\frac{5}{13}, \frac{2}{3}, 1\frac{2}{3}$$



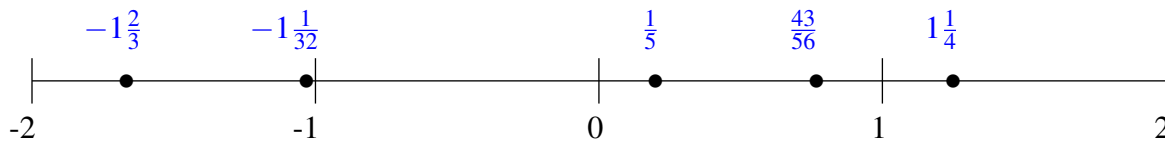
Classification de Fractions (E) Solutions

À l'aide des droites numériques, classifiez chaque série de fractions ci-dessous en ordre croissant.

$$1\frac{1}{4}, \frac{17}{56}, \frac{3}{4}, 1\frac{2}{3}, -\frac{31}{42}$$



$$\frac{1}{5}, -1\frac{1}{32}, -1\frac{2}{3}, 1\frac{1}{4}, \frac{43}{56}$$



$$-\frac{9}{10}, -\frac{1}{4}, -1\frac{5}{13}, \frac{2}{3}, 1\frac{2}{3}$$

