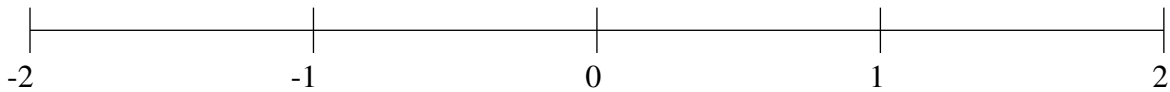


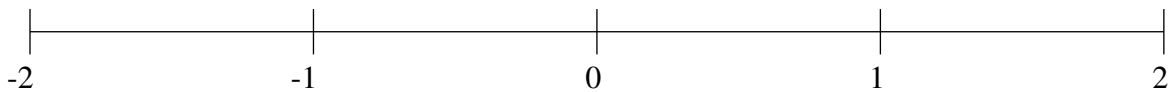
## Classification de Fractions (D)

À l'aide des droites numériques, classifiez chaque série de fractions ci-dessous en ordre croissant.

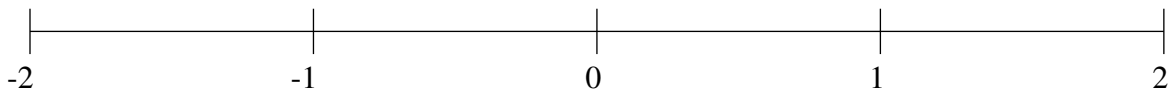
$$1\frac{7}{12}, -1\frac{8}{19}, \frac{2}{3}, -\frac{3}{4}, \frac{2}{15}$$



$$-1\frac{5}{19}, 1\frac{1}{4}, -\frac{1}{3}, \frac{1}{2}, -1\frac{9}{13}$$



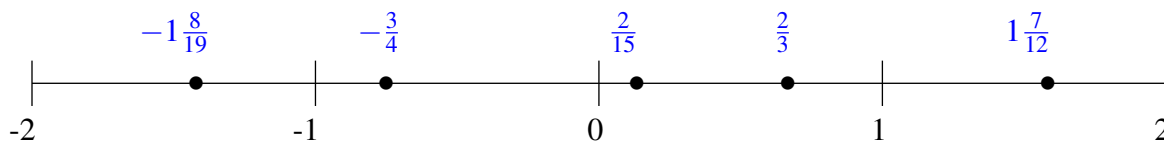
$$1\frac{2}{3}, 1\frac{1}{11}, \frac{4}{11}, -1\frac{3}{5}, \frac{1}{40}$$



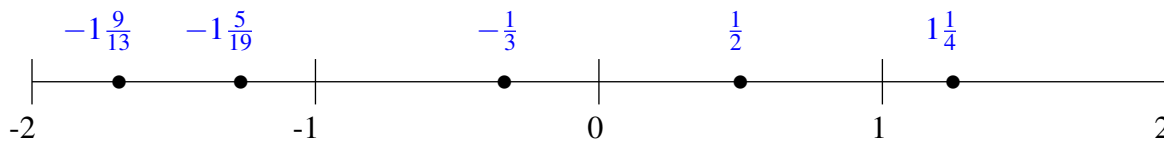
## Classification de Fractions (D) Solutions

À l'aide des droites numériques, classifiez chaque série de fractions ci-dessous en ordre croissant.

$$1\frac{7}{12}, -1\frac{8}{19}, \frac{2}{3}, -\frac{3}{4}, \frac{2}{15}$$



$$-1\frac{5}{19}, 1\frac{1}{4}, -\frac{1}{3}, \frac{1}{2}, -1\frac{9}{13}$$



$$1\frac{2}{3}, 1\frac{1}{11}, \frac{4}{11}, -1\frac{3}{5}, \frac{1}{40}$$

