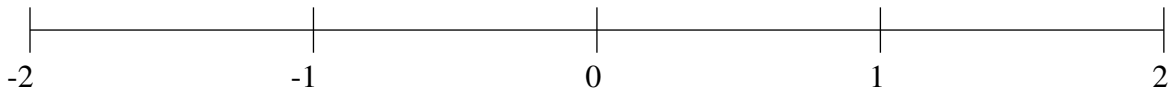


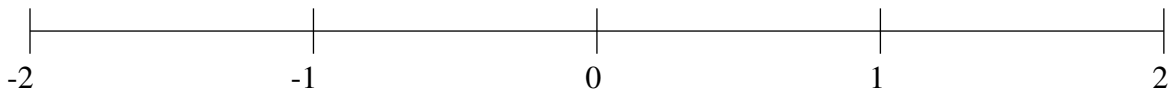
## Classification de Fractions (G)

À l'aide des droites numériques, classifiez chaque série de fractions ci-dessous en ordre croissant.

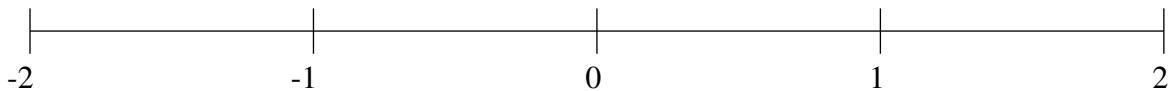
$$1\frac{4}{5}, -\frac{14}{15}, -\frac{1}{2}, -1\frac{2}{3}, -1\frac{1}{3}$$



$$-1\frac{1}{6}, \frac{1}{3}, -1\frac{9}{10}, 1\frac{2}{5}, -\frac{2}{3}$$



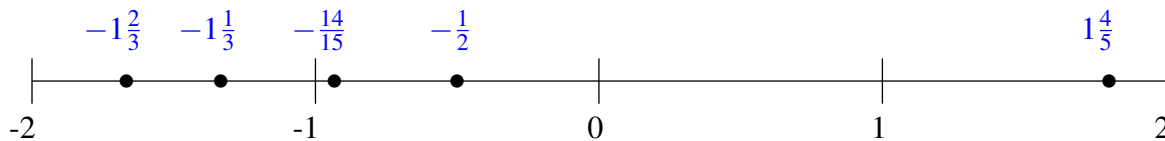
$$\frac{1}{6}, \frac{3}{5}, 1\frac{2}{3}, -\frac{2}{3}, 1\frac{1}{4}$$



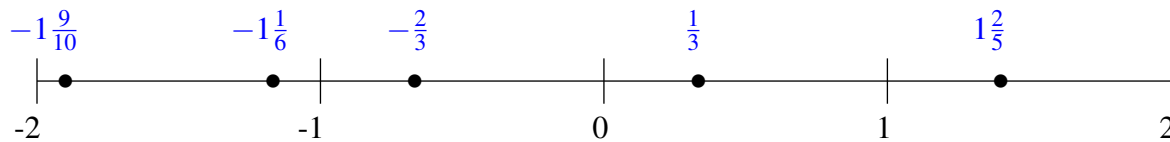
## Classification de Fractions (G) Solutions

À l'aide des droites numériques, classifiez chaque série de fractions ci-dessous en ordre croissant.

$$1\frac{4}{5}, -\frac{14}{15}, -\frac{1}{2}, -1\frac{2}{3}, -1\frac{1}{3}$$



$$-1\frac{1}{6}, \frac{1}{3}, -1\frac{9}{10}, 1\frac{2}{5}, -\frac{2}{3}$$



$$\frac{1}{6}, \frac{3}{5}, 1\frac{2}{3}, -\frac{2}{3}, 1\frac{1}{4}$$

