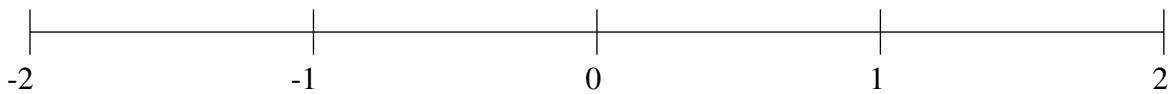


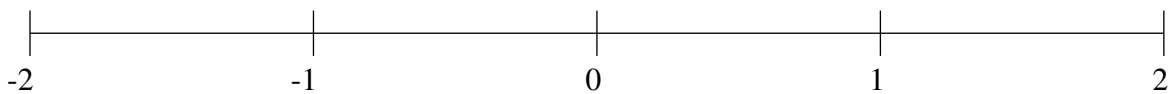
Classification de Fractions (E)

À l'aide des droites numériques, classifiez chaque série de fractions ci-dessous en ordre croissant.

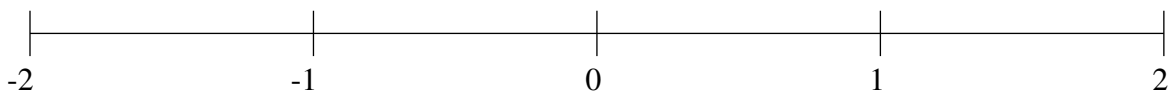
$$1\frac{1}{4}, \frac{3}{4}, -1\frac{1}{2}, 1\frac{3}{5}, -\frac{1}{4}$$



$$-\frac{5}{6}, -1\frac{1}{3}, 1\frac{1}{60}, 1\frac{1}{3}, \frac{1}{10}$$



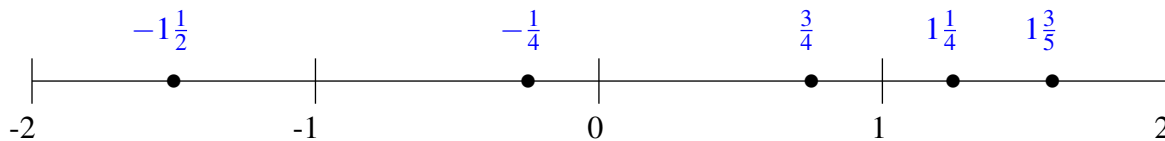
$$-\frac{5}{6}, -1\frac{1}{5}, 1\frac{2}{3}, 1\frac{1}{4}, \frac{1}{5}$$



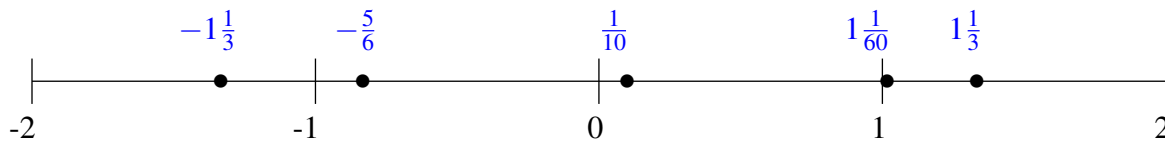
Classification de Fractions (E) Solutions

À l'aide des droites numériques, classifiez chaque série de fractions ci-dessous en ordre croissant.

$$1\frac{1}{4}, \frac{3}{4}, -1\frac{1}{2}, 1\frac{3}{5}, -\frac{1}{4}$$



$$-\frac{5}{6}, -1\frac{1}{3}, 1\frac{1}{60}, 1\frac{1}{3}, \frac{1}{10}$$



$$-\frac{5}{6}, -1\frac{1}{5}, 1\frac{2}{3}, 1\frac{1}{4}, \frac{1}{5}$$

