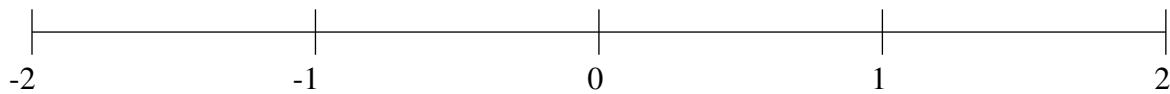


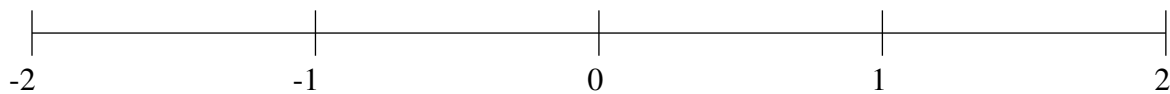
Classification de Fractions (D)

À l'aide des droites numériques, classifiez chaque série de fractions ci-dessous en ordre croissant.

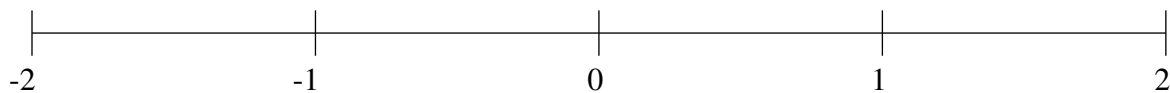
$$-1\frac{13}{20}, 1\frac{1}{2}, 1\frac{11}{12}, \frac{1}{12}, \frac{3}{5}$$



$$\frac{2}{3}, 1\frac{1}{3}, \frac{1}{3}, 1\frac{2}{3}, 1\frac{29}{30}$$



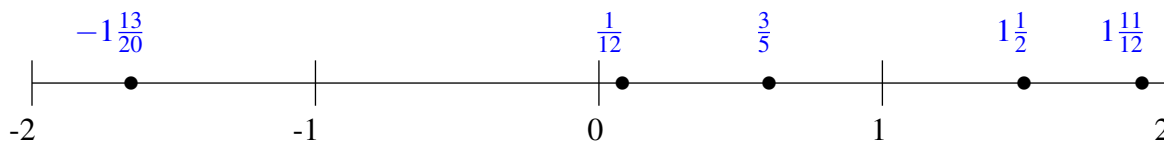
$$1\frac{3}{4}, -\frac{1}{2}, -1\frac{1}{4}, 1\frac{1}{10}, -\frac{1}{5}$$



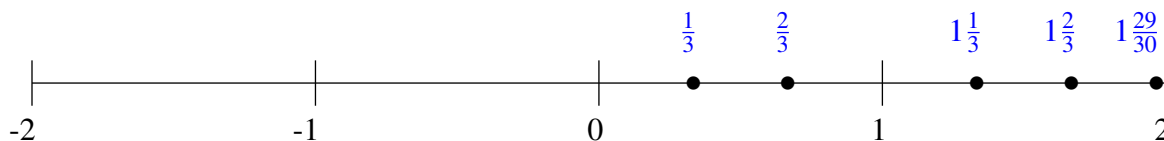
Classification de Fractions (D) Solutions

À l'aide des droites numériques, classifiez chaque série de fractions ci-dessous en ordre croissant.

$$-1\frac{13}{20}, 1\frac{1}{2}, 1\frac{11}{12}, \frac{1}{12}, \frac{3}{5}$$



$$\frac{2}{3}, 1\frac{1}{3}, \frac{1}{3}, 1\frac{2}{3}, 1\frac{29}{30}$$



$$1\frac{3}{4}, -\frac{1}{2}, -1\frac{1}{4}, 1\frac{1}{10}, -\frac{1}{5}$$

