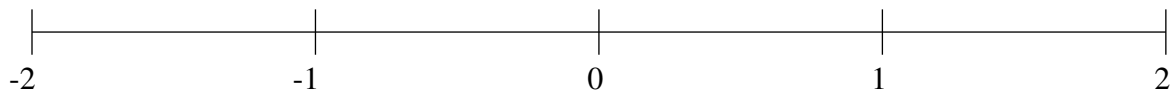


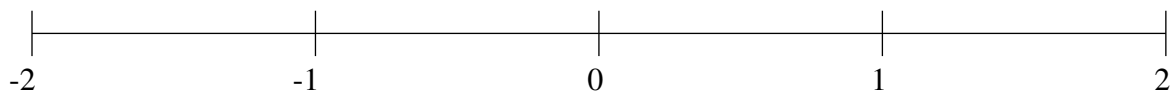
## Classification de Fractions (B)

À l'aide des droites numériques, classifiez chaque série de fractions ci-dessous en ordre croissant.

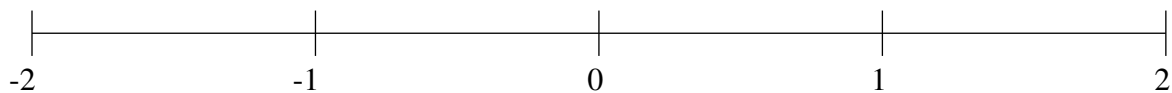
$$-\frac{4}{5}, \frac{2}{15}, 1\frac{1}{3}, -\frac{1}{2}, \frac{3}{4}$$



$$-\frac{1}{10}, 1\frac{5}{6}, -1\frac{1}{6}, -\frac{5}{6}, 1\frac{8}{15}$$



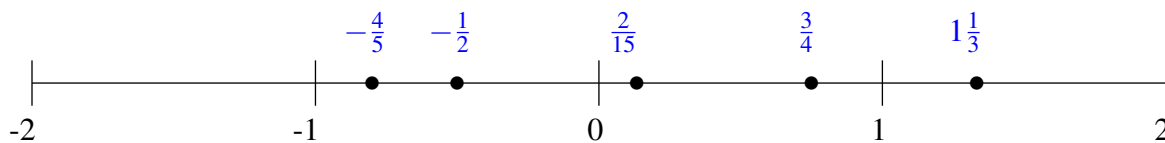
$$1\frac{1}{6}, -1\frac{1}{2}, \frac{3}{5}, -\frac{1}{2}, 1\frac{3}{4}$$



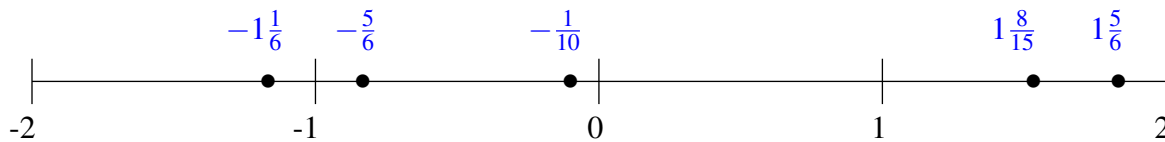
## Classification de Fractions (B) Solutions

À l'aide des droites numériques, classifiez chaque série de fractions ci-dessous en ordre croissant.

$$-\frac{4}{5}, \frac{2}{15}, 1\frac{1}{3}, -\frac{1}{2}, \frac{3}{4}$$



$$-\frac{1}{10}, 1\frac{5}{6}, -1\frac{1}{6}, -\frac{5}{6}, 1\frac{8}{15}$$



$$1\frac{1}{6}, -1\frac{1}{2}, \frac{3}{5}, -\frac{1}{2}, 1\frac{3}{4}$$

