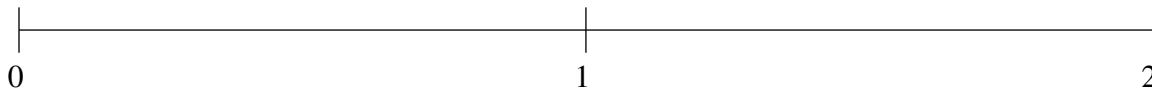


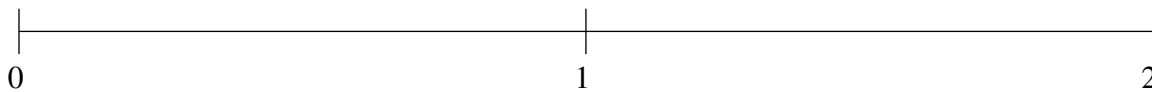
Classification de Fractions (J)

À l'aide des droites numériques, classifiez chaque série de fractions ci-dessous en ordre croissant.

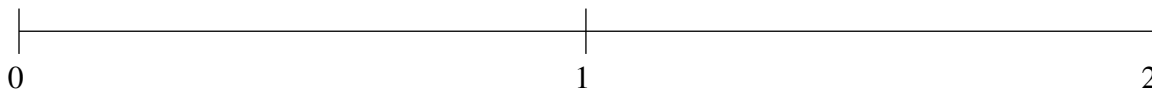
$$1\frac{11}{12}, \frac{1}{2}, \frac{1}{10}, \frac{4}{5}, 1\frac{1}{10}$$



$$1\frac{5}{6}, \frac{1}{2}, 1\frac{1}{2}, 1\frac{1}{5}, \frac{1}{5}$$



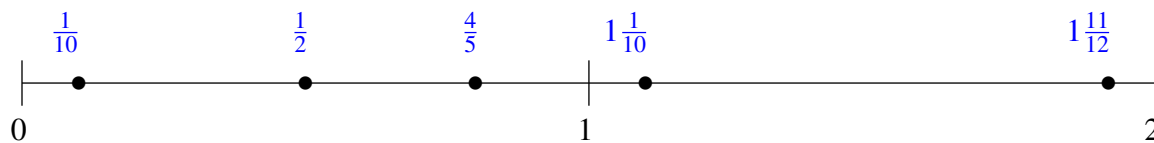
$$1\frac{4}{5}, 1\frac{1}{15}, \frac{1}{4}, \frac{7}{12}, 1\frac{2}{5}$$



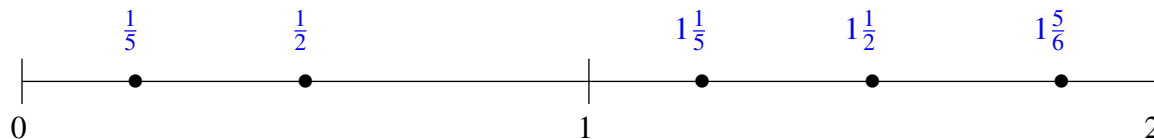
Classification de Fractions (J) Solutions

À l'aide des droites numériques, classifiez chaque série de fractions ci-dessous en ordre croissant.

$$1\frac{11}{12}, \frac{1}{2}, \frac{1}{10}, \frac{4}{5}, 1\frac{1}{10}$$



$$1\frac{5}{6}, \frac{1}{2}, 1\frac{1}{2}, 1\frac{1}{5}, \frac{1}{5}$$



$$1\frac{4}{5}, 1\frac{1}{15}, \frac{1}{4}, \frac{7}{12}, 1\frac{2}{5}$$

