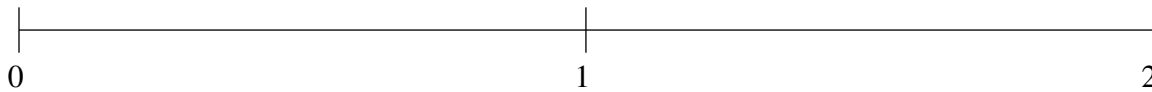


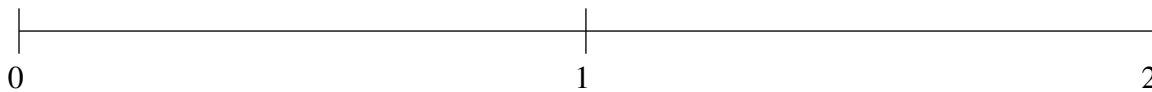
Classification de Fractions (I)

À l'aide des droites numériques, classifiez chaque série de fractions ci-dessous en ordre croissant.

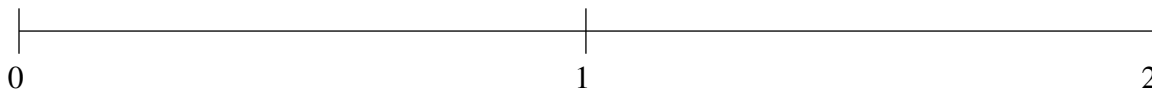
$$1\frac{49}{60}, 1\frac{1}{2}, \frac{2}{3}, 1\frac{1}{5}, \frac{1}{3}$$



$$\frac{2}{3}, 1\frac{3}{5}, \frac{1}{3}, 1\frac{11}{12}, 1\frac{1}{4}$$



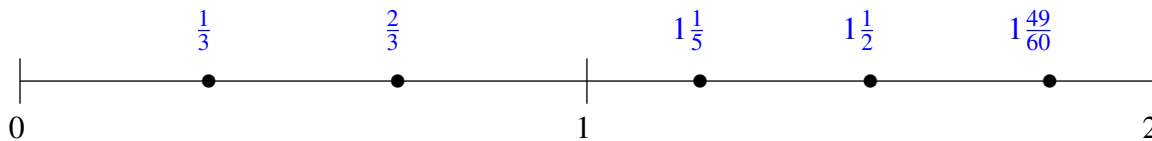
$$\frac{3}{4}, 1\frac{4}{5}, \frac{1}{4}, 1\frac{1}{2}, 1\frac{1}{5}$$



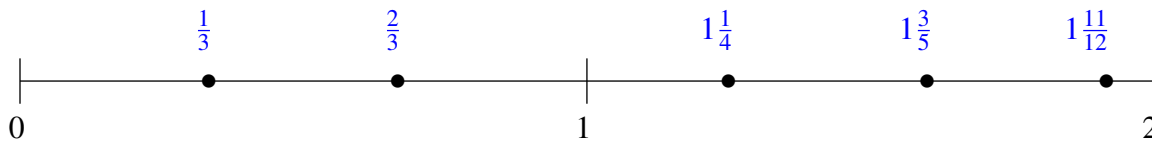
Classification de Fractions (I) Solutions

À l'aide des droites numériques, classifiez chaque série de fractions ci-dessous en ordre croissant.

$$1\frac{49}{60}, 1\frac{1}{2}, \frac{2}{3}, 1\frac{1}{5}, \frac{1}{3}$$



$$\frac{2}{3}, 1\frac{3}{5}, \frac{1}{3}, 1\frac{11}{12}, 1\frac{1}{4}$$



$$\frac{3}{4}, 1\frac{4}{5}, \frac{1}{4}, 1\frac{1}{2}, 1\frac{1}{5}$$

