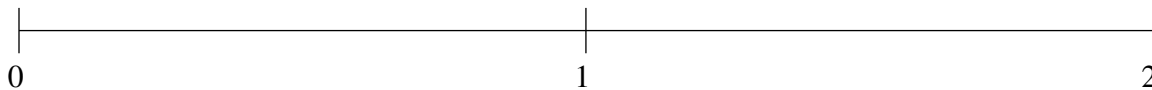


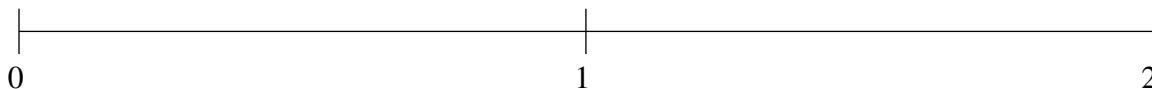
Classification de Fractions (G)

À l'aide des droites numériques, classifiez chaque série de fractions ci-dessous en ordre croissant.

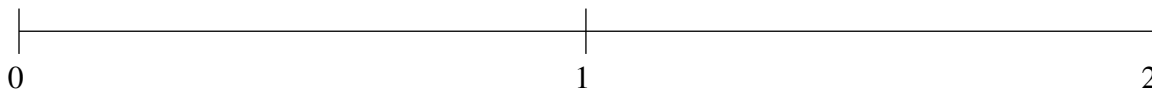
$$1\frac{1}{3}, \frac{1}{2}, \frac{5}{6}, 1\frac{2}{3}, \frac{1}{5}$$



$$1\frac{1}{5}, \frac{1}{3}, 1\frac{1}{2}, \frac{3}{4}, 1\frac{4}{5}$$



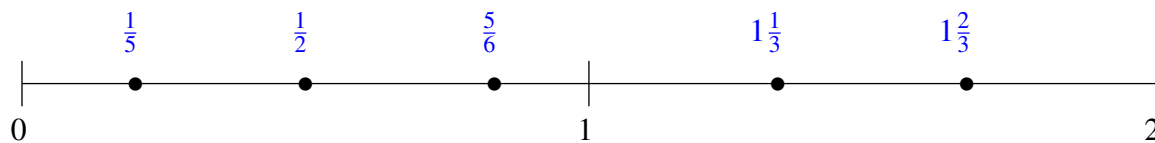
$$\frac{2}{5}, \frac{1}{12}, \frac{3}{4}, 1\frac{1}{5}, 1\frac{1}{2}$$



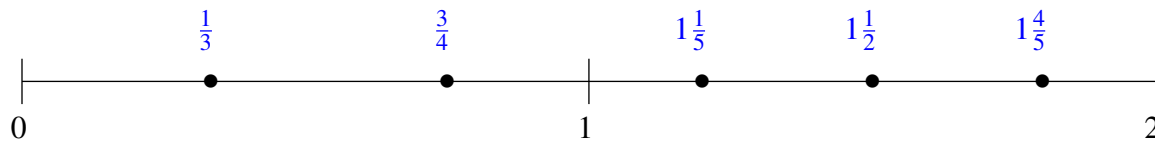
Classification de Fractions (G) Solutions

À l'aide des droites numériques, classifiez chaque série de fractions ci-dessous en ordre croissant.

$$1\frac{1}{3}, \frac{1}{2}, \frac{5}{6}, 1\frac{2}{3}, \frac{1}{5}$$



$$1\frac{1}{5}, \frac{1}{3}, 1\frac{1}{2}, \frac{3}{4}, 1\frac{4}{5}$$



$$\frac{2}{5}, \frac{1}{12}, \frac{3}{4}, 1\frac{1}{5}, 1\frac{1}{2}$$

