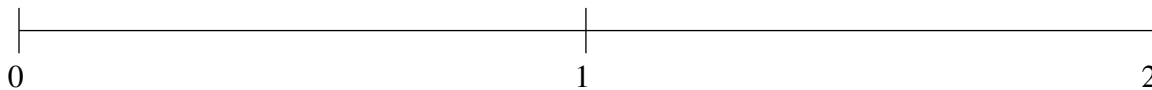


## Classification de Fractions (C)

À l'aide des droites numériques, classifiez chaque série de fractions ci-dessous en ordre croissant.

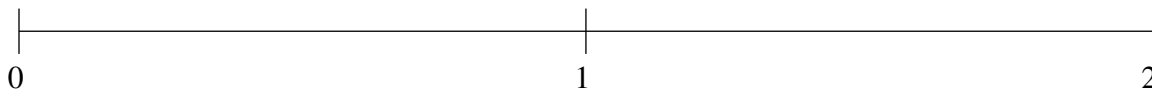
$$\frac{1}{2}, \frac{1}{5}, 1\frac{1}{2}, \frac{4}{5}, 1\frac{5}{6}$$



$$1\frac{4}{5}, 1\frac{1}{2}, \frac{1}{10}, 1\frac{1}{10}, \frac{2}{3}$$



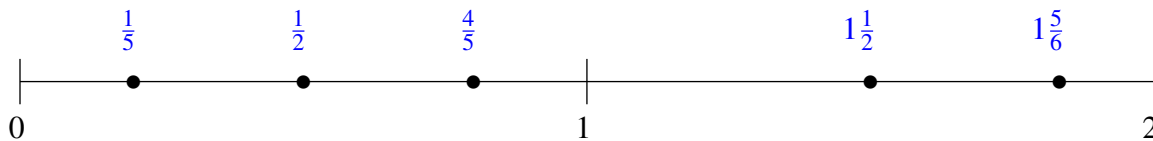
$$1\frac{1}{10}, 1\frac{4}{5}, \frac{1}{5}, 1\frac{1}{2}, \frac{1}{2}$$



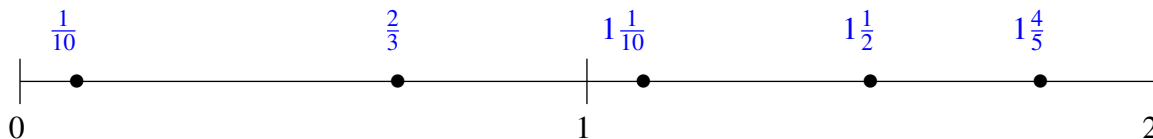
## Classification de Fractions (C) Solutions

À l'aide des droites numériques, classifiez chaque série de fractions ci-dessous en ordre croissant.

$$\frac{1}{2}, \frac{1}{5}, 1\frac{1}{2}, \frac{4}{5}, 1\frac{5}{6}$$



$$1\frac{4}{5}, 1\frac{1}{2}, \frac{1}{10}, 1\frac{1}{10}, \frac{2}{3}$$



$$1\frac{1}{10}, 1\frac{4}{5}, \frac{1}{5}, 1\frac{1}{2}, \frac{1}{2}$$

