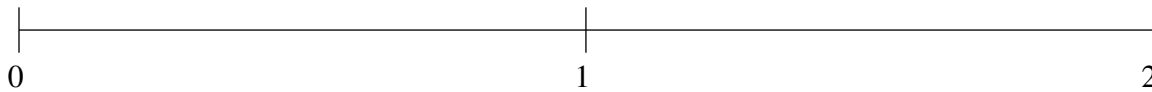


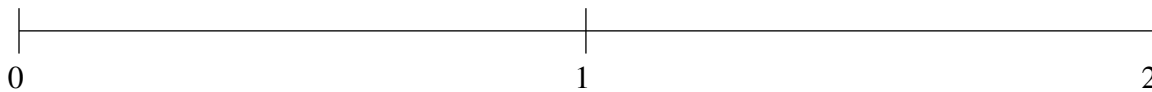
Classification de Fractions (G)

À l'aide des droites numériques, classifiez chaque série de fractions ci-dessous en ordre croissant.

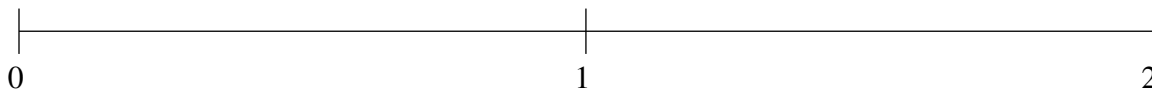
$$1\frac{2}{21}, \frac{3}{10}, 1\frac{10}{23}, \frac{27}{34}, 1\frac{9}{10}$$



$$1\frac{2}{5}, 1\frac{3}{4}, \frac{2}{37}, \frac{34}{37}, \frac{1}{2}$$



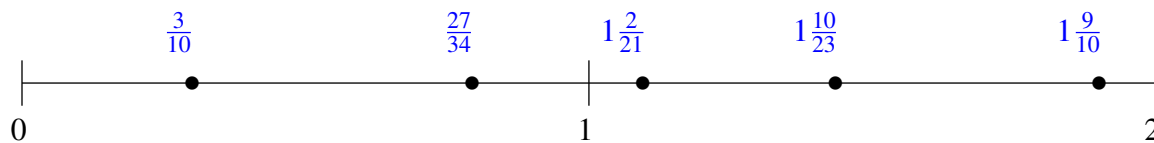
$$1\frac{39}{44}, \frac{1}{2}, 1\frac{15}{31}, 1\frac{1}{21}, \frac{1}{5}$$



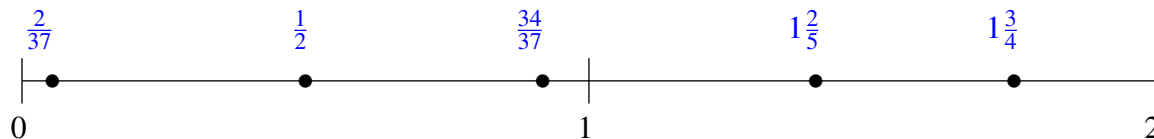
Classification de Fractions (G) Solutions

À l'aide des droites numériques, classifiez chaque série de fractions ci-dessous en ordre croissant.

$$1\frac{2}{21}, \frac{3}{10}, 1\frac{10}{23}, \frac{27}{34}, 1\frac{9}{10}$$



$$1\frac{2}{5}, 1\frac{3}{4}, \frac{2}{37}, \frac{34}{37}, \frac{1}{2}$$



$$1\frac{39}{44}, \frac{1}{2}, 1\frac{15}{31}, 1\frac{1}{21}, \frac{1}{5}$$

