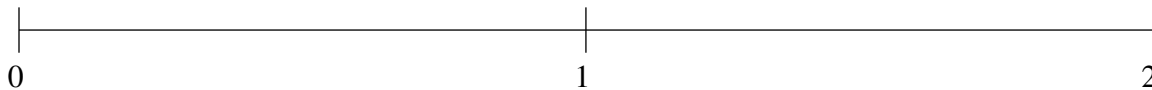


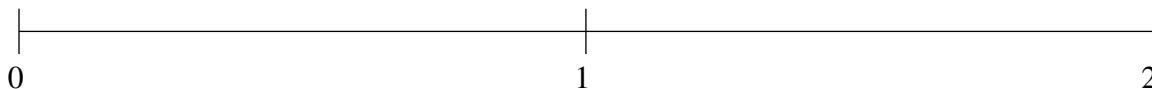
Classification de Fractions (F)

À l'aide des droites numériques, classifiez chaque série de fractions ci-dessous en ordre croissant.

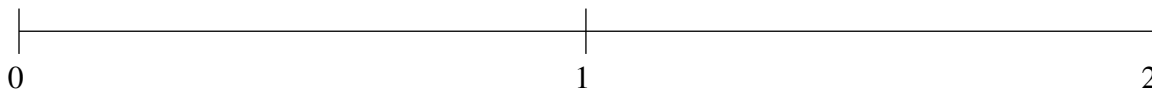
$$\frac{19}{23}, \frac{1}{2}, 1\frac{14}{33}, \frac{1}{11}, 1\frac{3}{4}$$



$$1\frac{1}{4}, 1\frac{56}{57}, 1\frac{2}{3}, \frac{4}{5}, \frac{1}{5}$$



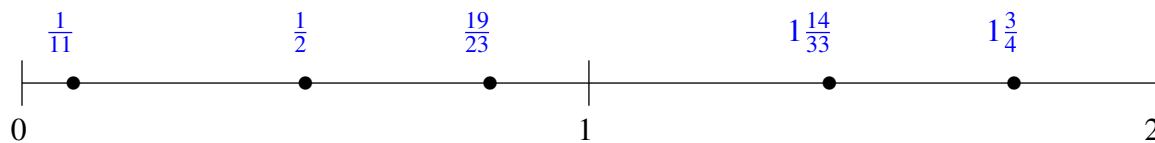
$$1\frac{1}{2}, 1\frac{4}{5}, 1\frac{1}{5}, \frac{7}{24}, \frac{47}{56}$$



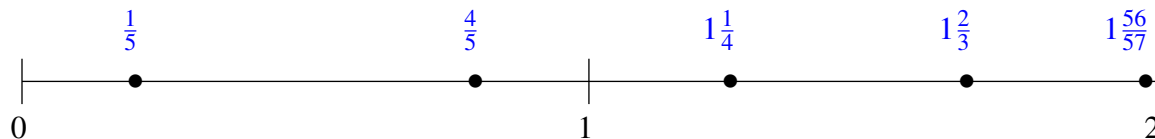
Classification de Fractions (F) Solutions

À l'aide des droites numériques, classifiez chaque série de fractions ci-dessous en ordre croissant.

$$\frac{19}{23}, \frac{1}{2}, 1\frac{14}{33}, \frac{1}{11}, 1\frac{3}{4}$$



$$1\frac{1}{4}, 1\frac{56}{57}, 1\frac{2}{3}, \frac{4}{5}, \frac{1}{5}$$



$$1\frac{1}{2}, 1\frac{4}{5}, 1\frac{1}{5}, \frac{7}{24}, \frac{47}{56}$$

