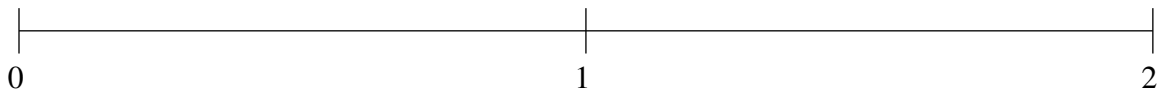


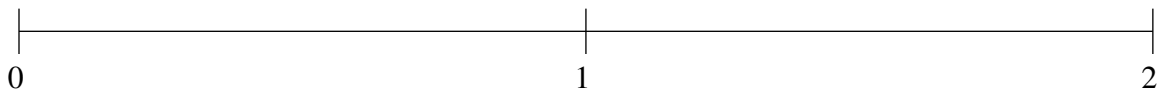
## Classification de Fractions (E)

À l'aide des droites numériques, classifiez chaque série de fractions ci-dessous en ordre croissant.

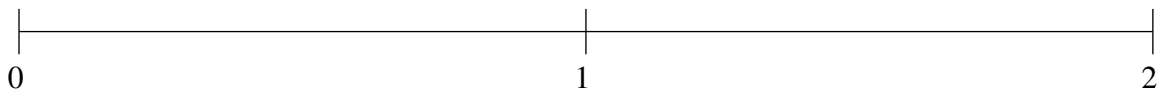
$$1\frac{2}{3}, 1\frac{1}{3}, \frac{5}{14}, \frac{7}{8}, 1\frac{38}{39}$$



$$\frac{2}{5}, 1\frac{7}{17}, 1\frac{4}{5}, \frac{42}{47}, \frac{2}{21}$$



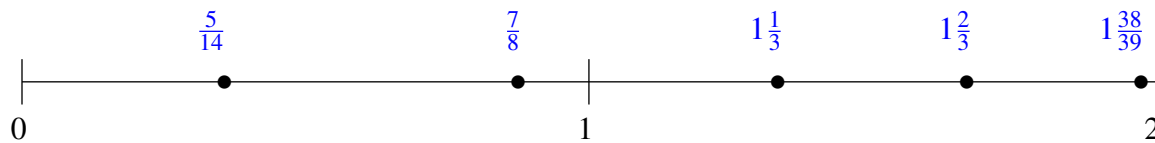
$$1\frac{32}{37}, \frac{1}{3}, 1\frac{5}{9}, 1\frac{10}{51}, \frac{9}{14}$$



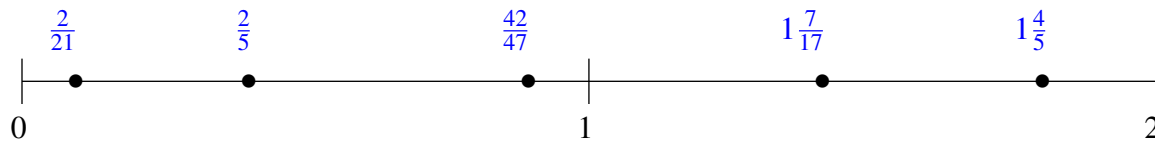
## Classification de Fractions (E) Solutions

À l'aide des droites numériques, classifiez chaque série de fractions ci-dessous en ordre croissant.

$$1\frac{2}{3}, 1\frac{1}{3}, \frac{5}{14}, \frac{7}{8}, 1\frac{38}{39}$$



$$\frac{2}{5}, 1\frac{7}{17}, 1\frac{4}{5}, \frac{42}{47}, \frac{2}{21}$$



$$1\frac{32}{37}, \frac{1}{3}, 1\frac{5}{9}, 1\frac{10}{51}, \frac{9}{14}$$

