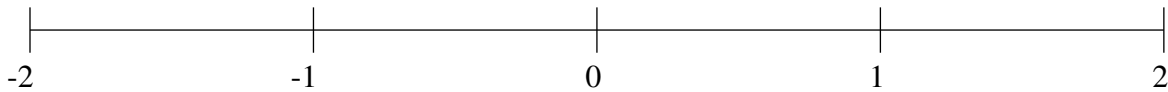


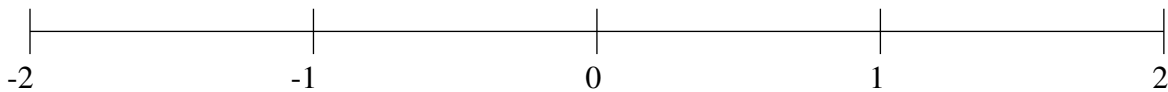
Classification de Fractions (A)

À l'aide des droites numériques, classifiez chaque série de fractions ci-dessous en ordre croissant.

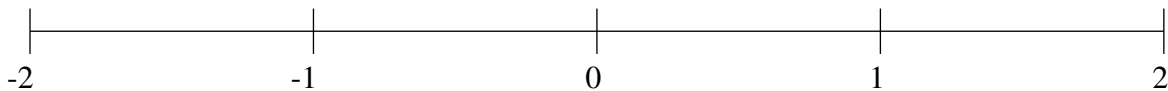
$$1\frac{1}{3}, -\frac{14}{17}, -1\frac{1}{5}, -\frac{1}{2}, \frac{1}{5}$$



$$\frac{1}{4}, \frac{7}{8}, -1\frac{1}{5}, -\frac{5}{17}, 1\frac{2}{3}$$



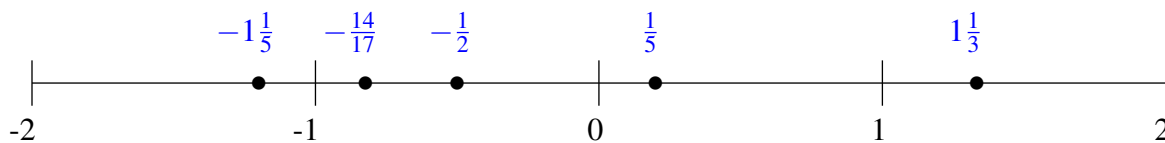
$$-\frac{9}{10}, \frac{9}{13}, 1\frac{2}{3}, -\frac{1}{3}, -1\frac{1}{3}$$



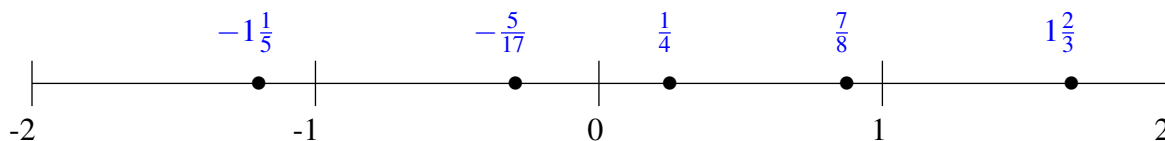
Classification de Fractions (A) Solutions

À l'aide des droites numériques, classifiez chaque série de fractions ci-dessous en ordre croissant.

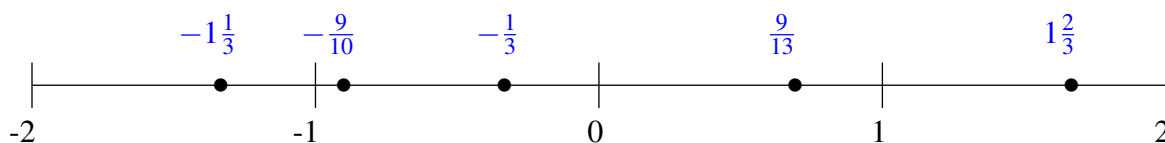
$$1\frac{1}{3}, -\frac{14}{17}, -1\frac{1}{5}, -\frac{1}{2}, \frac{1}{5}$$



$$\frac{1}{4}, \frac{7}{8}, -1\frac{1}{5}, -\frac{5}{17}, 1\frac{2}{3}$$



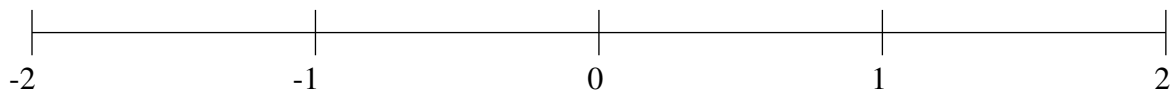
$$-\frac{9}{10}, \frac{9}{13}, 1\frac{2}{3}, -\frac{1}{3}, -1\frac{1}{3}$$



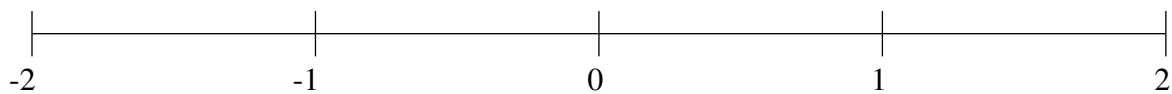
Classification de Fractions (B)

À l'aide des droites numériques, classifiez chaque série de fractions ci-dessous en ordre croissant.

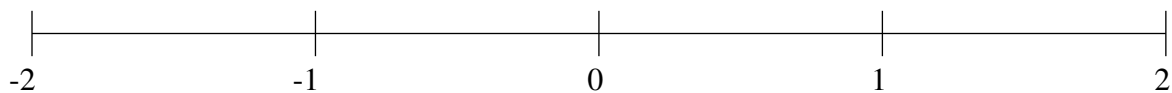
$$-1\frac{1}{8}, -\frac{1}{5}, \frac{11}{16}, -1\frac{15}{16}, 1\frac{3}{7}$$



$$1\frac{5}{7}, \frac{6}{7}, -\frac{2}{13}, \frac{2}{13}, -\frac{1}{2}$$



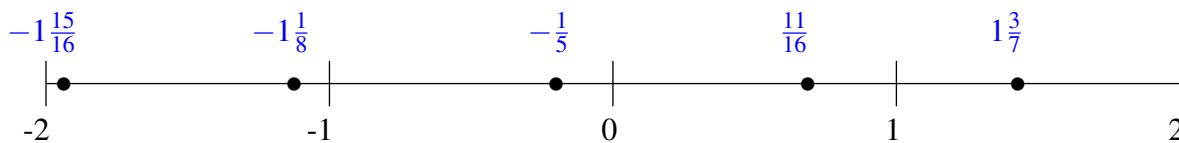
$$1\frac{1}{9}, -1\frac{3}{5}, 1\frac{1}{2}, \frac{1}{3}, -1\frac{1}{20}$$



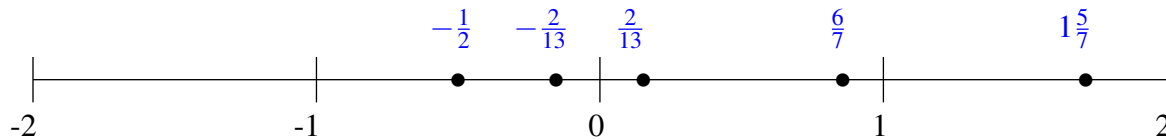
Classification de Fractions (B) Solutions

À l'aide des droites numériques, classifiez chaque série de fractions ci-dessous en ordre croissant.

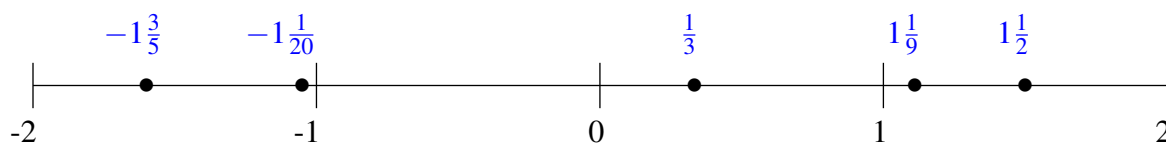
$$-1\frac{1}{8}, -\frac{1}{5}, \frac{11}{16}, -1\frac{15}{16}, 1\frac{3}{7}$$



$$1\frac{5}{7}, \frac{6}{7}, -\frac{2}{13}, \frac{2}{13}, -\frac{1}{2}$$



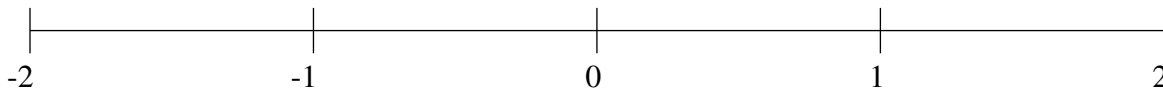
$$1\frac{1}{9}, -1\frac{3}{5}, 1\frac{1}{2}, \frac{1}{3}, -1\frac{1}{20}$$



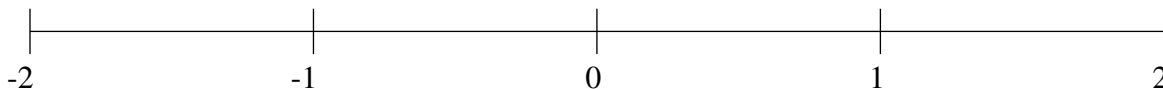
Classification de Fractions (C)

À l'aide des droites numériques, classifiez chaque série de fractions ci-dessous en ordre croissant.

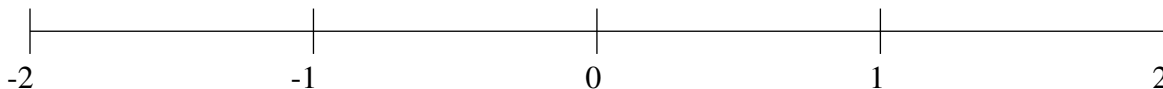
$$\frac{5}{8}, \frac{1}{17}, -\frac{2}{7}, -1\frac{2}{15}, -1\frac{7}{8}$$



$$1\frac{1}{6}, \frac{1}{2}, -\frac{2}{5}, 1\frac{7}{13}, 1\frac{11}{12}$$



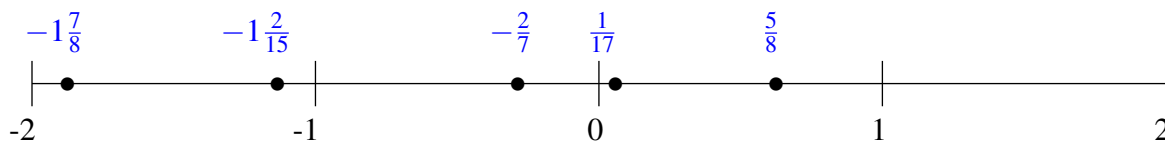
$$\frac{3}{4}, \frac{1}{4}, 1\frac{3}{4}, -\frac{4}{7}, -1\frac{2}{3}$$



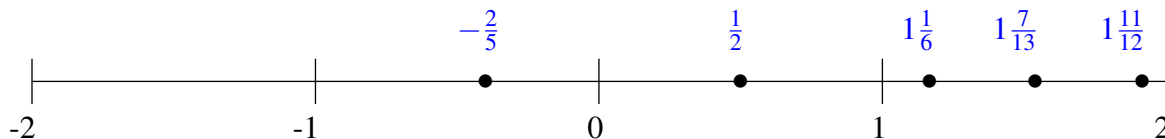
Classification de Fractions (C) Solutions

À l'aide des droites numériques, classifiez chaque série de fractions ci-dessous en ordre croissant.

$$\frac{5}{8}, \frac{1}{17}, -\frac{2}{7}, -1\frac{2}{15}, -1\frac{7}{8}$$



$$1\frac{1}{6}, \frac{1}{2}, -\frac{2}{5}, 1\frac{7}{13}, 1\frac{11}{12}$$



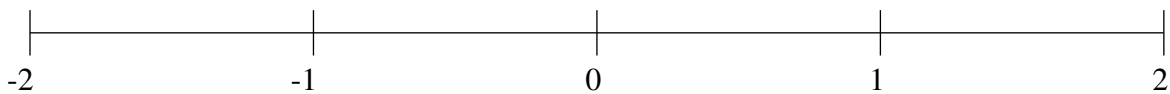
$$\frac{3}{4}, \frac{1}{4}, 1\frac{3}{4}, -\frac{4}{7}, -1\frac{2}{3}$$



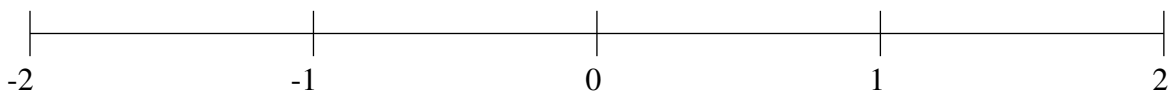
Classification de Fractions (D)

À l'aide des droites numériques, classifiez chaque série de fractions ci-dessous en ordre croissant.

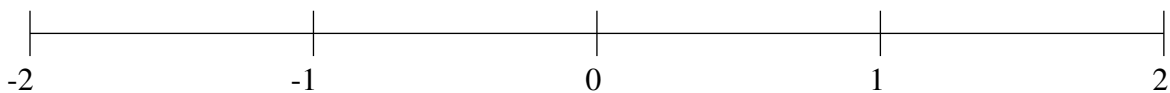
$$\frac{1}{5}, -1\frac{9}{10}, -1\frac{3}{23}, 1\frac{5}{9}, -\frac{2}{15}$$



$$1\frac{3}{5}, -1\frac{1}{5}, 1\frac{1}{4}, -\frac{2}{3}, \frac{1}{4}$$



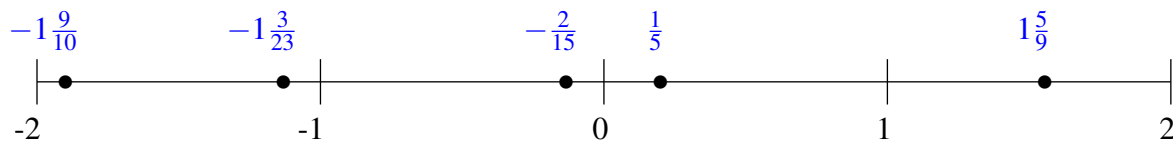
$$1\frac{3}{7}, \frac{2}{3}, -\frac{4}{9}, \frac{1}{3}, -1\frac{1}{2}$$



Classification de Fractions (D) Solutions

À l'aide des droites numériques, classifiez chaque série de fractions ci-dessous en ordre croissant.

$$\frac{1}{5}, -1\frac{9}{10}, -1\frac{3}{23}, 1\frac{5}{9}, -\frac{2}{15}$$



$$1\frac{3}{5}, -1\frac{1}{5}, 1\frac{1}{4}, -\frac{2}{3}, \frac{1}{4}$$



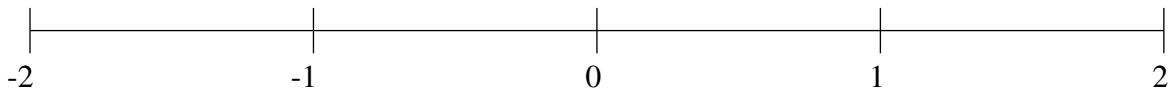
$$1\frac{3}{7}, \frac{2}{3}, -\frac{4}{9}, \frac{1}{3}, -1\frac{1}{2}$$



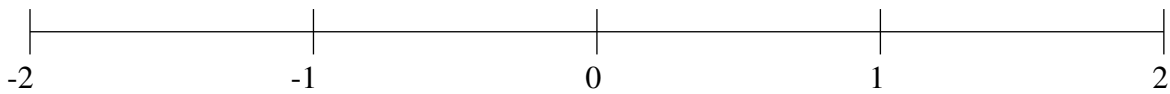
Classification de Fractions (E)

À l'aide des droites numériques, classifiez chaque série de fractions ci-dessous en ordre croissant.

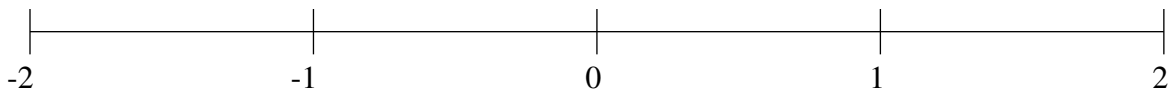
$$\frac{2}{5}, 1\frac{5}{12}, -1\frac{1}{2}, -1\frac{4}{5}, -\frac{7}{12}$$



$$1\frac{5}{6}, \frac{1}{7}, \frac{5}{6}, -1\frac{5}{9}, -1\frac{1}{7}$$



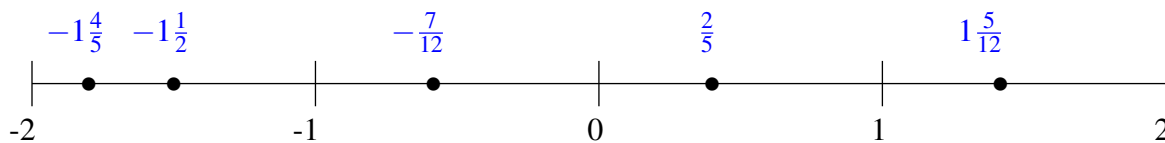
$$-1\frac{6}{7}, 1\frac{1}{2}, \frac{1}{3}, -1\frac{2}{5}, -\frac{1}{3}$$



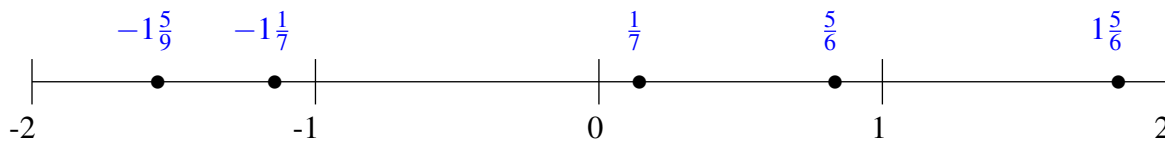
Classification de Fractions (E) Solutions

À l'aide des droites numériques, classifiez chaque série de fractions ci-dessous en ordre croissant.

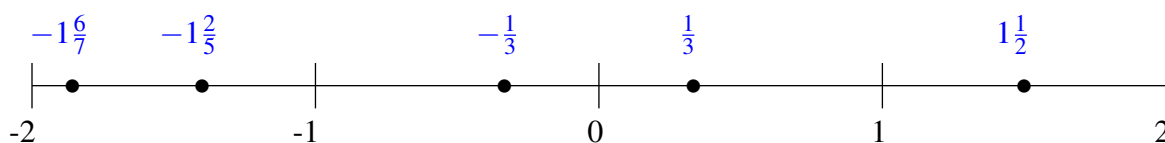
$$\frac{2}{5}, 1\frac{5}{12}, -1\frac{1}{2}, -1\frac{4}{5}, -\frac{7}{12}$$



$$1\frac{5}{6}, \frac{1}{7}, \frac{5}{6}, -1\frac{5}{9}, -1\frac{1}{7}$$



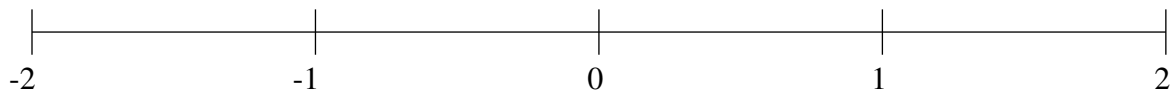
$$-1\frac{6}{7}, 1\frac{1}{2}, \frac{1}{3}, -1\frac{2}{5}, -\frac{1}{3}$$



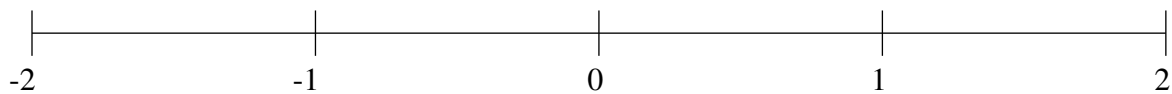
Classification de Fractions (F)

À l'aide des droites numériques, classifiez chaque série de fractions ci-dessous en ordre croissant.

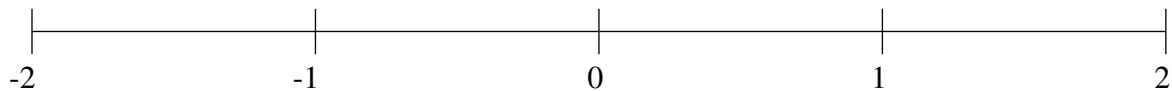
$$-\frac{1}{3}, \frac{1}{3}, \frac{20}{23}, -1\frac{11}{13}, -1\frac{1}{3}$$



$$-1\frac{3}{4}, -\frac{2}{3}, -1\frac{2}{13}, 1\frac{5}{8}, 1\frac{3}{10}$$



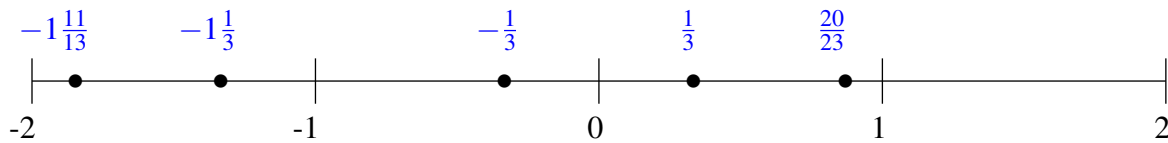
$$\frac{6}{19}, 1\frac{1}{11}, 1\frac{2}{3}, \frac{18}{23}, -\frac{1}{5}$$



Classification de Fractions (F) Solutions

À l'aide des droites numériques, classifiez chaque série de fractions ci-dessous en ordre croissant.

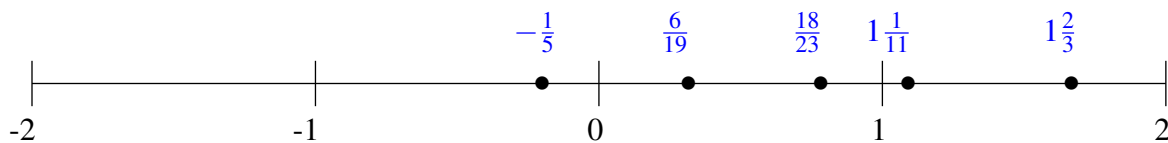
$$-\frac{1}{3}, \frac{1}{3}, \frac{20}{23}, -1\frac{11}{13}, -1\frac{1}{3}$$



$$-1\frac{3}{4}, -\frac{2}{3}, -1\frac{2}{13}, 1\frac{5}{8}, 1\frac{3}{10}$$



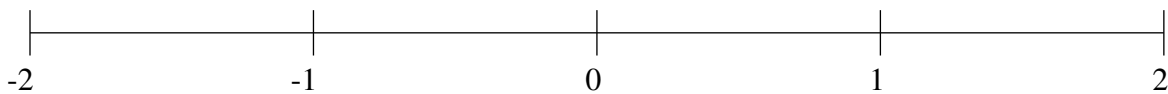
$$\frac{6}{19}, 1\frac{1}{11}, 1\frac{2}{3}, \frac{18}{23}, -\frac{1}{5}$$



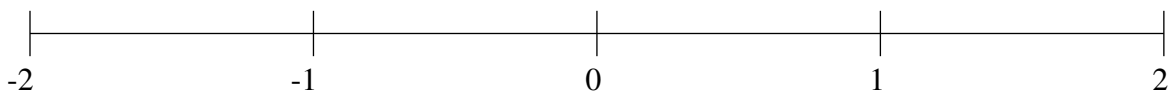
Classification de Fractions (G)

À l'aide des droites numériques, classifiez chaque série de fractions ci-dessous en ordre croissant.

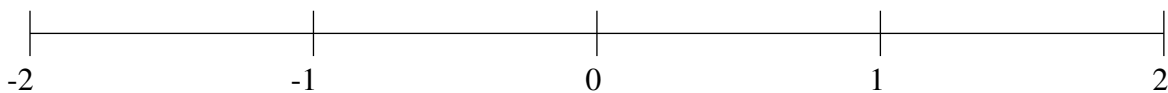
$$-1\frac{14}{15}, -\frac{5}{9}, 1\frac{3}{7}, \frac{1}{2}, -1\frac{3}{7}$$



$$-\frac{1}{2}, -\frac{1}{13}, 1\frac{1}{2}, -1\frac{7}{8}, \frac{1}{3}$$



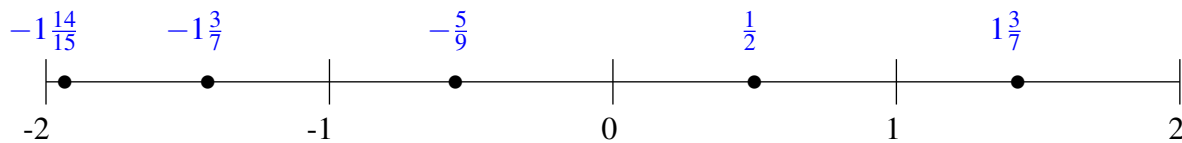
$$-1\frac{2}{9}, \frac{1}{10}, \frac{7}{11}, -\frac{18}{23}, 1\frac{1}{2}$$



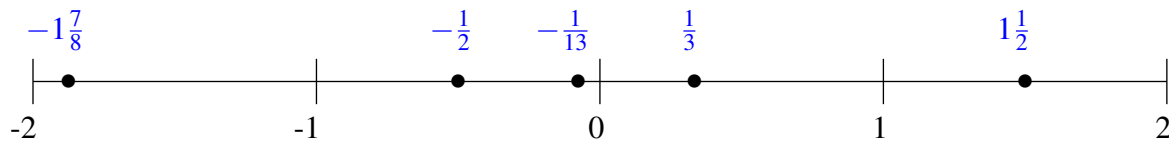
Classification de Fractions (G) Solutions

À l'aide des droites numériques, classifiez chaque série de fractions ci-dessous en ordre croissant.

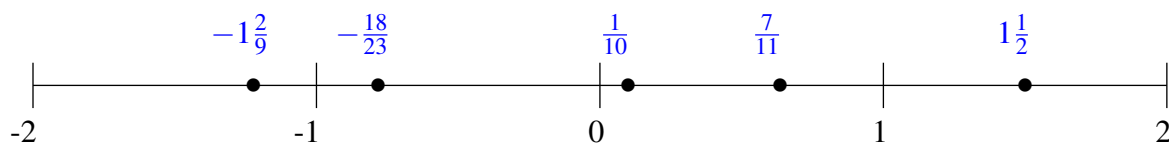
$$-1\frac{14}{15}, -\frac{5}{9}, 1\frac{3}{7}, \frac{1}{2}, -1\frac{3}{7}$$



$$-\frac{1}{2}, -\frac{1}{13}, 1\frac{1}{2}, -1\frac{7}{8}, \frac{1}{3}$$



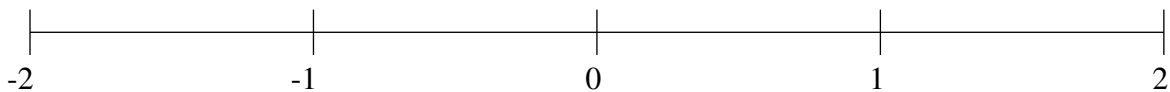
$$-1\frac{2}{9}, \frac{1}{10}, \frac{7}{11}, -\frac{18}{23}, 1\frac{1}{2}$$



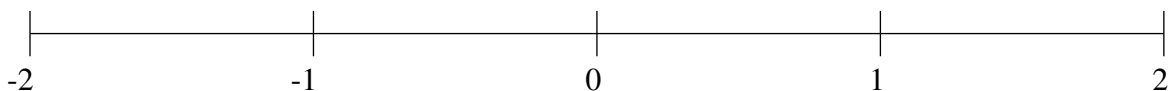
Classification de Fractions (H)

À l'aide des droites numériques, classifiez chaque série de fractions ci-dessous en ordre croissant.

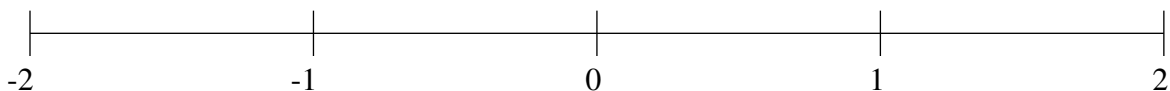
$$\frac{8}{9}, 1\frac{1}{3}, -1\frac{1}{10}, \frac{3}{8}, 1\frac{11}{12}$$



$$-\frac{1}{2}, \frac{1}{3}, -\frac{1}{8}, 1\frac{5}{14}, \frac{4}{5}$$



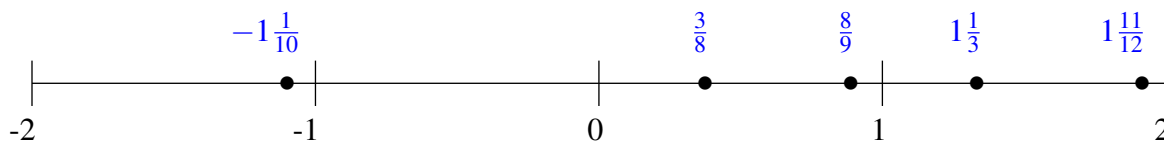
$$\frac{2}{3}, 1\frac{1}{3}, -\frac{1}{2}, -1\frac{3}{8}, \frac{1}{3}$$



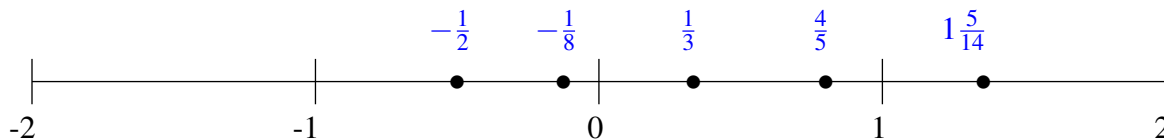
Classification de Fractions (H) Solutions

À l'aide des droites numériques, classifiez chaque série de fractions ci-dessous en ordre croissant.

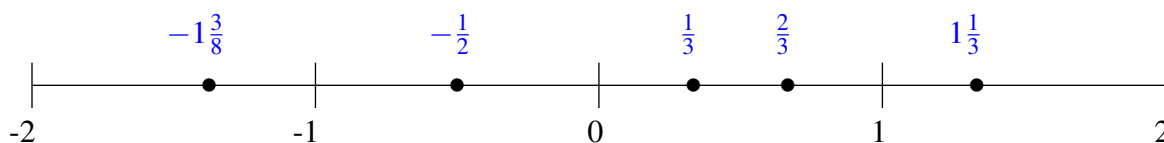
$$\frac{8}{9}, 1\frac{1}{3}, -1\frac{1}{10}, \frac{3}{8}, 1\frac{11}{12}$$



$$-\frac{1}{2}, \frac{1}{3}, -\frac{1}{8}, 1\frac{5}{14}, \frac{4}{5}$$



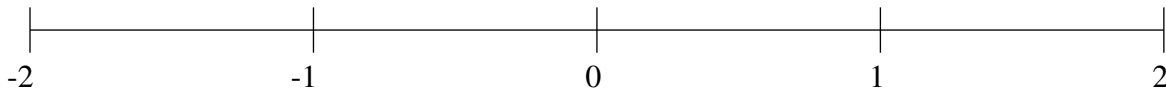
$$\frac{2}{3}, 1\frac{1}{3}, -\frac{1}{2}, -1\frac{3}{8}, \frac{1}{3}$$



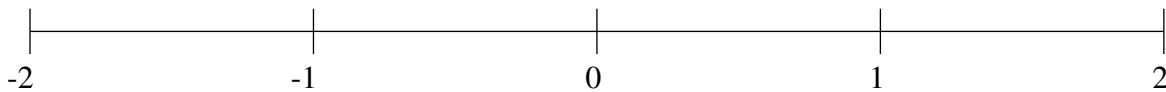
Classification de Fractions (I)

À l'aide des droites numériques, classifiez chaque série de fractions ci-dessous en ordre croissant.

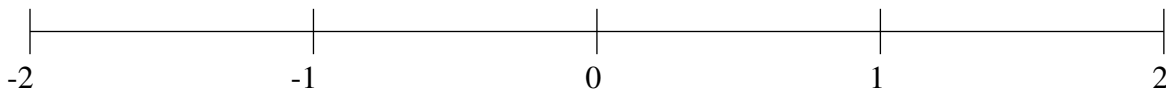
$$1\frac{4}{5}, -\frac{1}{6}, \frac{1}{3}, -1\frac{1}{7}, \frac{2}{3}$$



$$1\frac{1}{3}, -1\frac{3}{4}, 1\frac{6}{7}, \frac{7}{19}, -1\frac{7}{16}$$



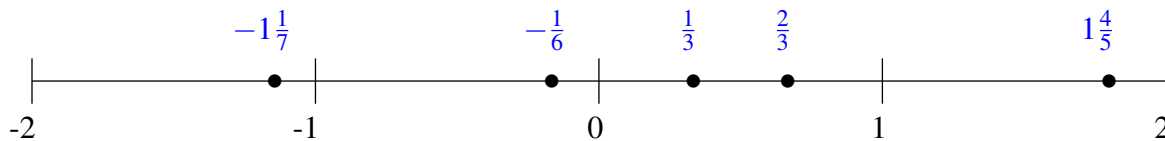
$$\frac{1}{5}, 1\frac{1}{4}, -\frac{5}{6}, -1\frac{19}{21}, -1\frac{1}{6}$$



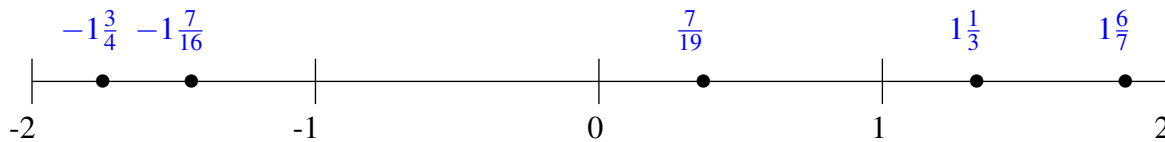
Classification de Fractions (I) Solutions

À l'aide des droites numériques, classifiez chaque série de fractions ci-dessous en ordre croissant.

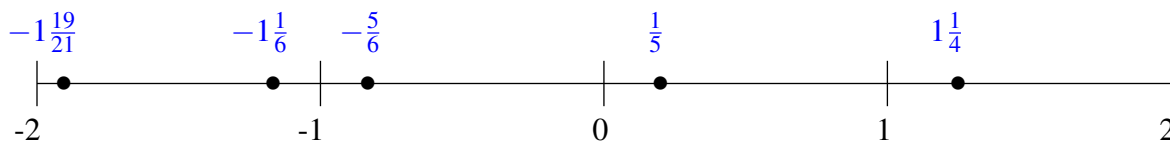
$$1\frac{4}{5}, -\frac{1}{6}, \frac{1}{3}, -1\frac{1}{7}, \frac{2}{3}$$



$$1\frac{1}{3}, -1\frac{3}{4}, 1\frac{6}{7}, \frac{7}{19}, -1\frac{7}{16}$$



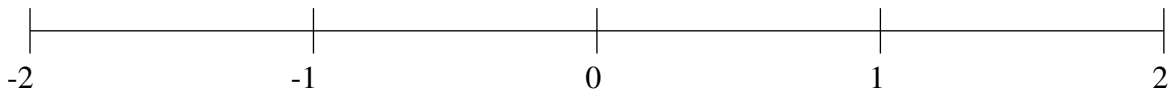
$$\frac{1}{5}, 1\frac{1}{4}, -\frac{5}{6}, -1\frac{19}{21}, -1\frac{1}{6}$$



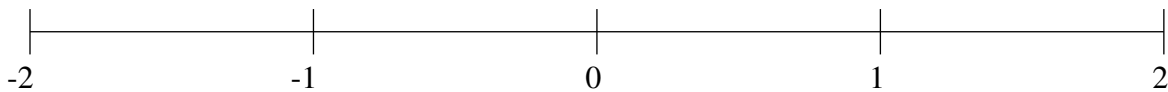
Classification de Fractions (J)

À l'aide des droites numériques, classifiez chaque série de fractions ci-dessous en ordre croissant.

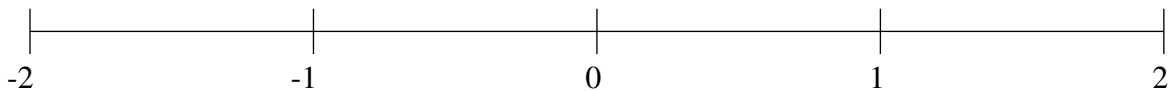
$$\frac{16}{19}, 1\frac{2}{9}, -\frac{1}{4}, \frac{1}{2}, -1\frac{3}{5}$$



$$-1\frac{1}{2}, -1\frac{17}{18}, -\frac{4}{15}, -\frac{7}{9}, \frac{7}{15}$$



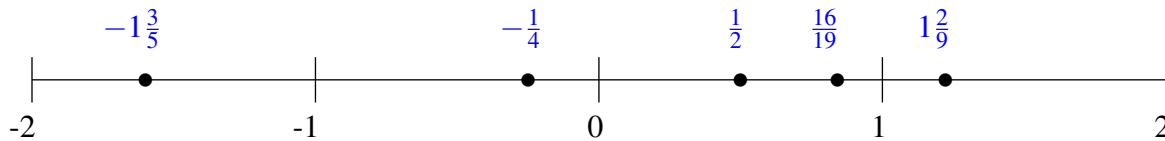
$$1\frac{1}{6}, 1\frac{9}{10}, -1\frac{9}{10}, 1\frac{1}{2}, \frac{1}{2}$$



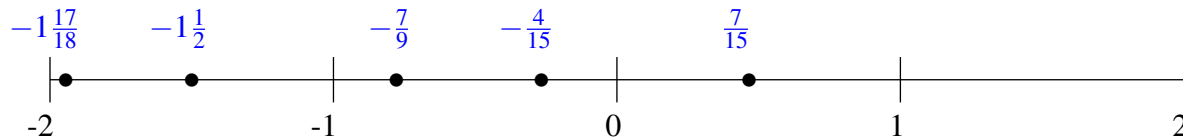
Classification de Fractions (J) Solutions

À l'aide des droites numériques, classifiez chaque série de fractions ci-dessous en ordre croissant.

$$\frac{16}{19}, 1\frac{2}{9}, -\frac{1}{4}, \frac{1}{2}, -1\frac{3}{5}$$



$$-1\frac{1}{2}, -1\frac{17}{18}, -\frac{4}{15}, -\frac{7}{9}, \frac{7}{15}$$



$$1\frac{1}{6}, 1\frac{9}{10}, -1\frac{9}{10}, 1\frac{1}{2}, \frac{1}{2}$$

