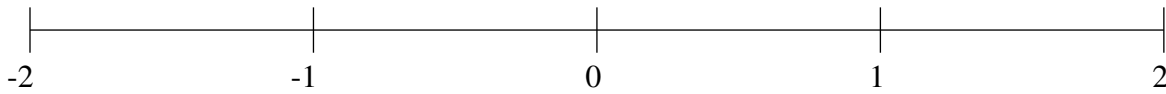


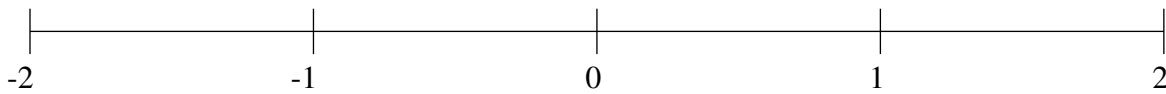
Classification de Fractions (I)

À l'aide des droites numériques, classifiez chaque série de fractions ci-dessous en ordre croissant.

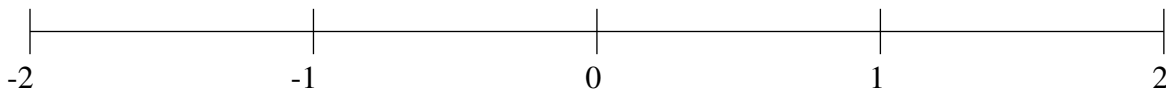
$$1\frac{4}{5}, -\frac{1}{6}, \frac{1}{3}, -1\frac{1}{7}, \frac{2}{3}$$



$$1\frac{1}{3}, -1\frac{3}{4}, 1\frac{6}{7}, \frac{7}{19}, -1\frac{7}{16}$$



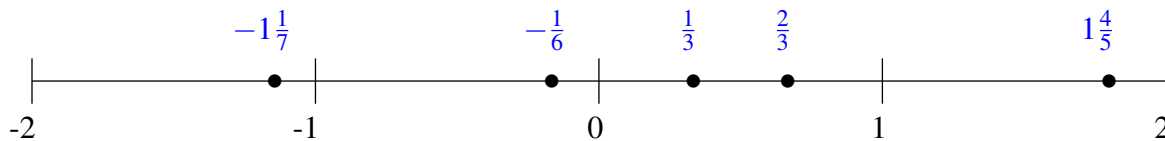
$$\frac{1}{5}, 1\frac{1}{4}, -\frac{5}{6}, -1\frac{19}{21}, -1\frac{1}{6}$$



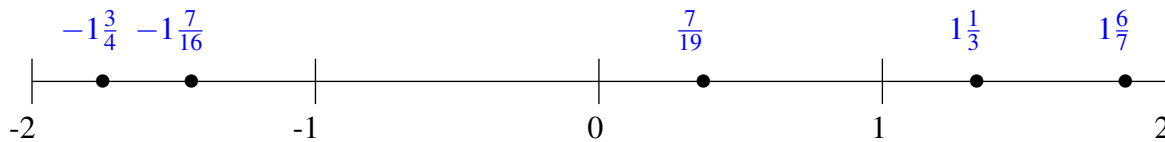
Classification de Fractions (I) Solutions

À l'aide des droites numériques, classifiez chaque série de fractions ci-dessous en ordre croissant.

$$1\frac{4}{5}, -\frac{1}{6}, \frac{1}{3}, -1\frac{1}{7}, \frac{2}{3}$$



$$1\frac{1}{3}, -1\frac{3}{4}, 1\frac{6}{7}, \frac{7}{19}, -1\frac{7}{16}$$



$$\frac{1}{5}, 1\frac{1}{4}, -\frac{5}{6}, -1\frac{19}{21}, -1\frac{1}{6}$$

