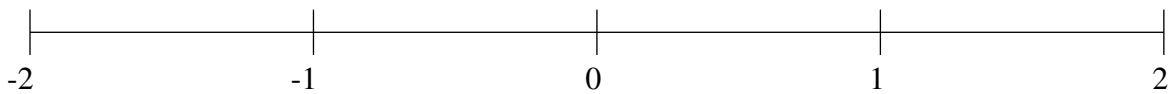


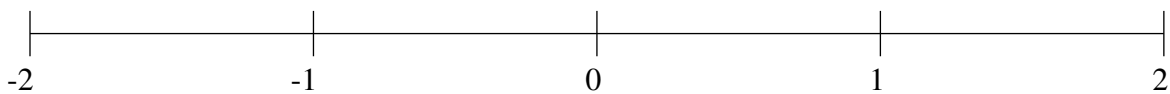
Classification de Fractions (H)

À l'aide des droites numériques, classifiez chaque série de fractions ci-dessous en ordre croissant.

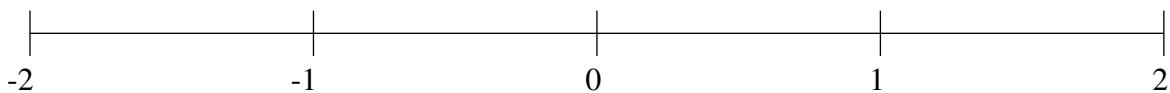
$$\frac{8}{9}, 1\frac{1}{3}, -1\frac{1}{10}, \frac{3}{8}, 1\frac{11}{12}$$



$$-\frac{1}{2}, \frac{1}{3}, -\frac{1}{8}, 1\frac{5}{14}, \frac{4}{5}$$



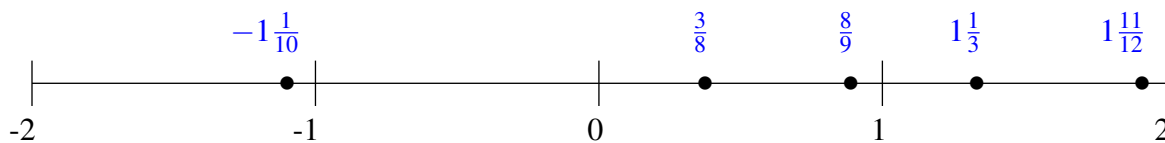
$$\frac{2}{3}, 1\frac{1}{3}, -\frac{1}{2}, -1\frac{3}{8}, \frac{1}{3}$$



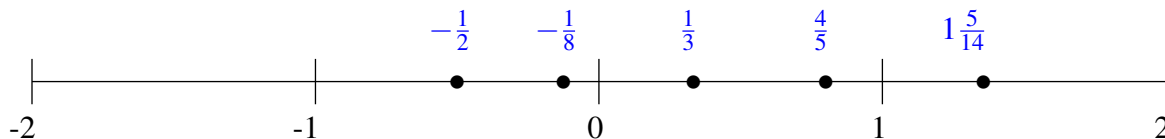
Classification de Fractions (H) Solutions

À l'aide des droites numériques, classifiez chaque série de fractions ci-dessous en ordre croissant.

$$\frac{8}{9}, 1\frac{1}{3}, -1\frac{1}{10}, \frac{3}{8}, 1\frac{11}{12}$$



$$-\frac{1}{2}, \frac{1}{3}, -\frac{1}{8}, 1\frac{5}{14}, \frac{4}{5}$$



$$\frac{2}{3}, 1\frac{1}{3}, -\frac{1}{2}, -1\frac{3}{8}, \frac{1}{3}$$

