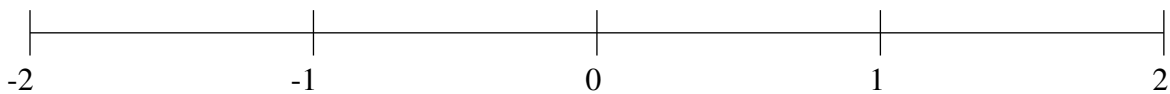


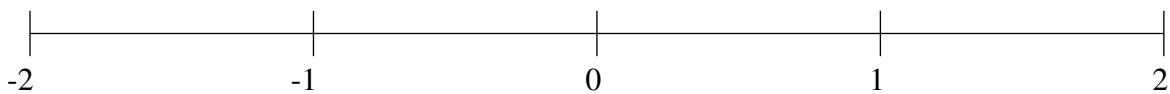
Classification de Fractions (G)

À l'aide des droites numériques, classifiez chaque série de fractions ci-dessous en ordre croissant.

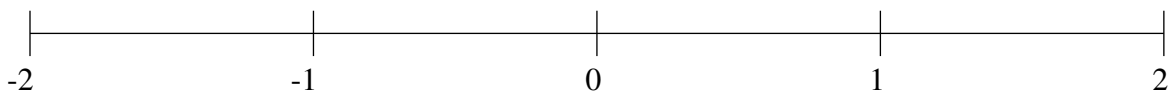
$$-1\frac{14}{15}, -\frac{5}{9}, 1\frac{3}{7}, \frac{1}{2}, -1\frac{3}{7}$$



$$-\frac{1}{2}, -\frac{1}{13}, 1\frac{1}{2}, -1\frac{7}{8}, \frac{1}{3}$$



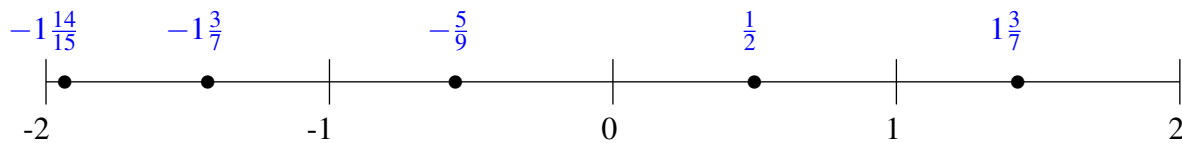
$$-1\frac{2}{9}, \frac{1}{10}, \frac{7}{11}, -\frac{18}{23}, 1\frac{1}{2}$$



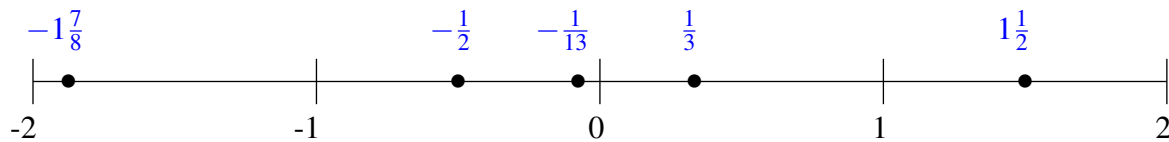
Classification de Fractions (G) Solutions

À l'aide des droites numériques, classifiez chaque série de fractions ci-dessous en ordre croissant.

$$-1\frac{14}{15}, -\frac{5}{9}, 1\frac{3}{7}, \frac{1}{2}, -1\frac{3}{7}$$



$$-\frac{1}{2}, -\frac{1}{13}, 1\frac{1}{2}, -1\frac{7}{8}, \frac{1}{3}$$



$$-1\frac{2}{9}, \frac{1}{10}, \frac{7}{11}, -\frac{18}{23}, 1\frac{1}{2}$$

