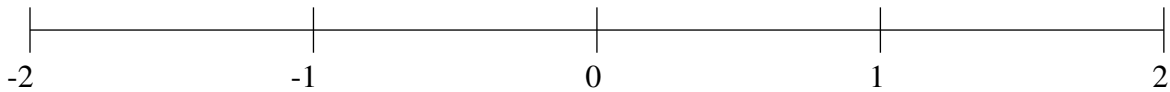


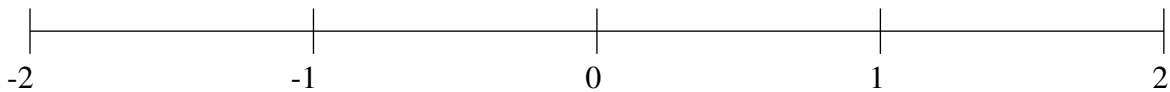
Classification de Fractions (F)

À l'aide des droites numériques, classifiez chaque série de fractions ci-dessous en ordre croissant.

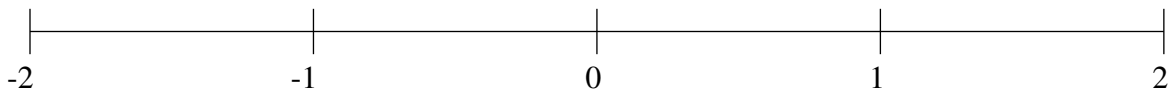
$$-\frac{1}{3}, \frac{1}{3}, \frac{20}{23}, -1\frac{11}{13}, -1\frac{1}{3}$$



$$-1\frac{3}{4}, -\frac{2}{3}, -1\frac{2}{13}, 1\frac{5}{8}, 1\frac{3}{10}$$



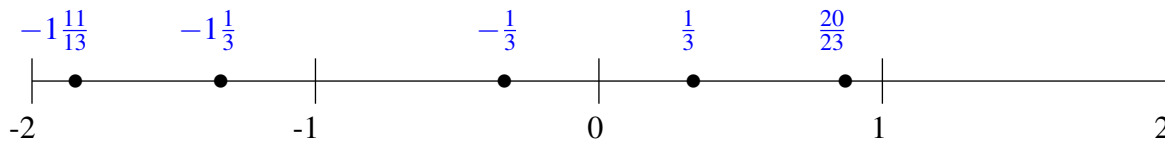
$$\frac{6}{19}, 1\frac{1}{11}, 1\frac{2}{3}, \frac{18}{23}, -\frac{1}{5}$$



Classification de Fractions (F) Solutions

À l'aide des droites numériques, classifiez chaque série de fractions ci-dessous en ordre croissant.

$$-\frac{1}{3}, \frac{1}{3}, \frac{20}{23}, -1\frac{11}{13}, -1\frac{1}{3}$$



$$-1\frac{3}{4}, -\frac{2}{3}, -1\frac{2}{13}, 1\frac{5}{8}, 1\frac{3}{10}$$



$$\frac{6}{19}, 1\frac{1}{11}, 1\frac{2}{3}, \frac{18}{23}, -\frac{1}{5}$$

