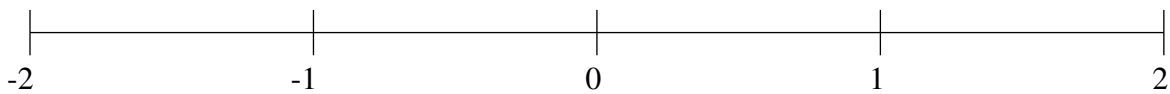


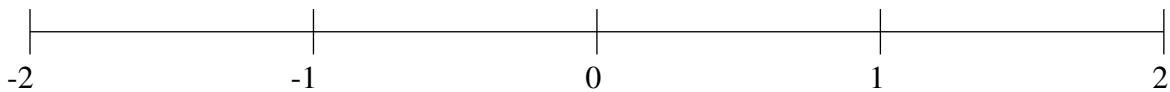
## Classification de Fractions (E)

À l'aide des droites numériques, classifiez chaque série de fractions ci-dessous en ordre croissant.

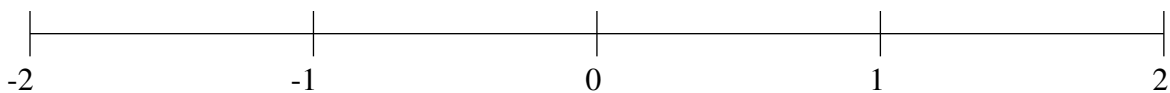
$$\frac{2}{5}, 1\frac{5}{12}, -1\frac{1}{2}, -1\frac{4}{5}, -\frac{7}{12}$$



$$1\frac{5}{6}, \frac{1}{7}, \frac{5}{6}, -1\frac{5}{9}, -1\frac{1}{7}$$



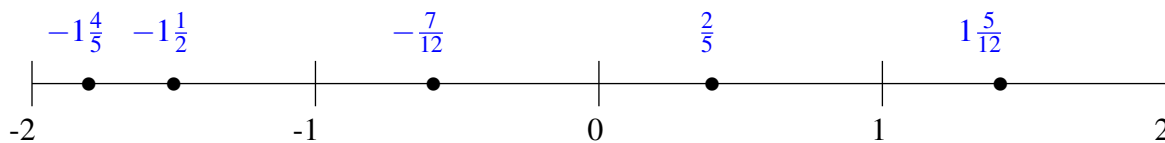
$$-1\frac{6}{7}, 1\frac{1}{2}, \frac{1}{3}, -1\frac{2}{5}, -\frac{1}{3}$$



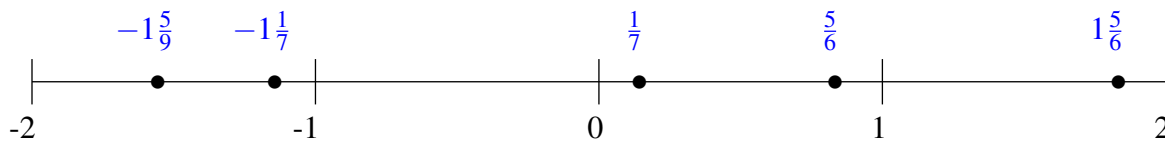
## Classification de Fractions (E) Solutions

À l'aide des droites numériques, classifiez chaque série de fractions ci-dessous en ordre croissant.

$$\frac{2}{5}, 1\frac{5}{12}, -1\frac{1}{2}, -1\frac{4}{5}, -\frac{7}{12}$$



$$1\frac{5}{6}, \frac{1}{7}, \frac{5}{6}, -1\frac{5}{9}, -1\frac{1}{7}$$



$$-1\frac{6}{7}, 1\frac{1}{2}, \frac{1}{3}, -1\frac{2}{5}, -\frac{1}{3}$$

