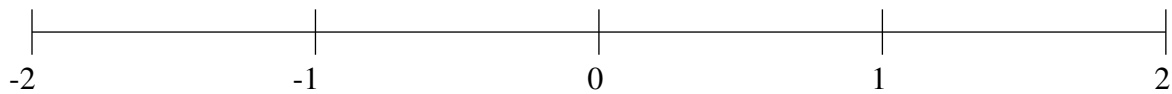


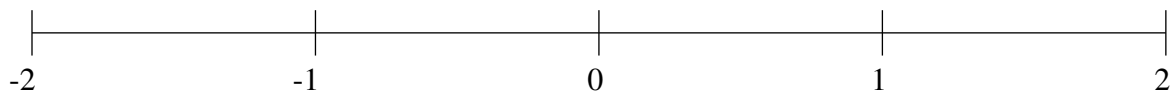
Classification de Fractions (G)

À l'aide des droites numériques, classifiez chaque série de fractions ci-dessous en ordre croissant.

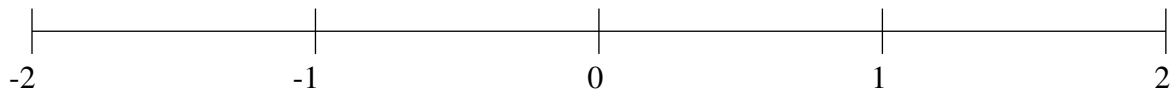
$$-\frac{3}{4}, 1\frac{1}{2}, \frac{1}{3}, -1\frac{1}{2}, \frac{2}{3}$$



$$\frac{1}{4}, 1\frac{2}{3}, \frac{2}{3}, 1\frac{1}{3}, -\frac{1}{4}$$



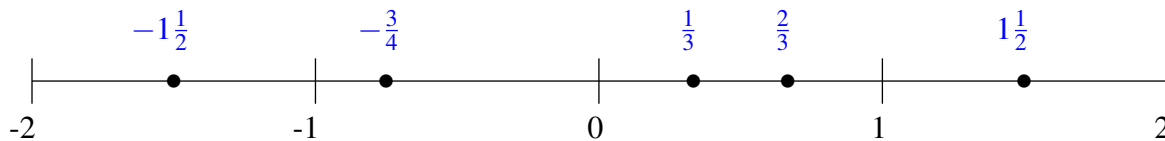
$$1\frac{1}{4}, 1\frac{2}{3}, \frac{1}{4}, \frac{2}{3}, -1\frac{5}{12}$$



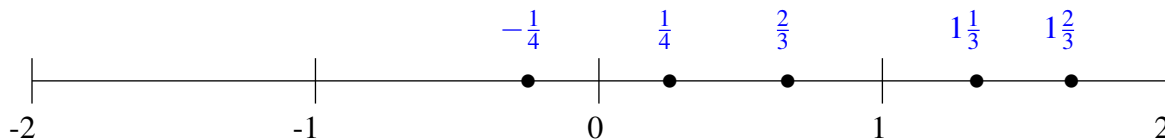
Classification de Fractions (G) Solutions

À l'aide des droites numériques, classifiez chaque série de fractions ci-dessous en ordre croissant.

$$-\frac{3}{4}, 1\frac{1}{2}, \frac{1}{3}, -1\frac{1}{2}, \frac{2}{3}$$



$$\frac{1}{4}, 1\frac{2}{3}, \frac{2}{3}, 1\frac{1}{3}, -\frac{1}{4}$$



$$1\frac{1}{4}, 1\frac{2}{3}, \frac{1}{4}, \frac{2}{3}, -1\frac{5}{12}$$

