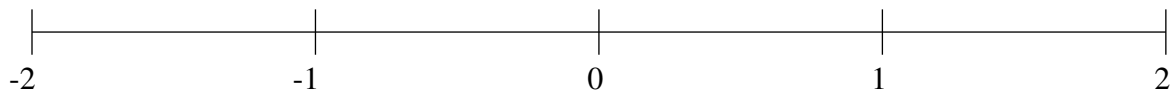


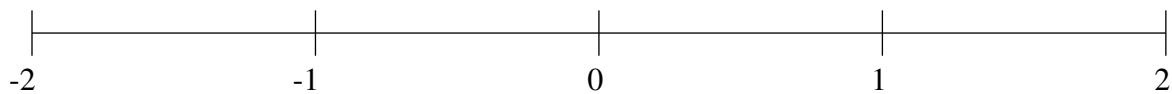
## Classification de Fractions (B)

À l'aide des droites numériques, classifiez chaque série de fractions ci-dessous en ordre croissant.

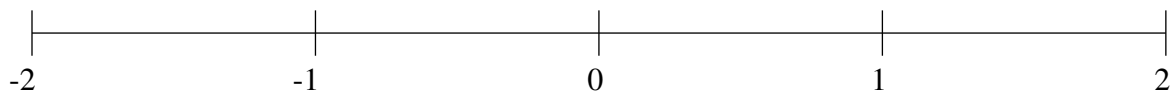
$$-1\frac{1}{2}, 1\frac{2}{3}, \frac{2}{3}, -\frac{2}{3}, \frac{1}{6}$$



$$-\frac{2}{3}, 1\frac{1}{6}, 1\frac{2}{3}, -\frac{1}{3}, \frac{1}{2}$$



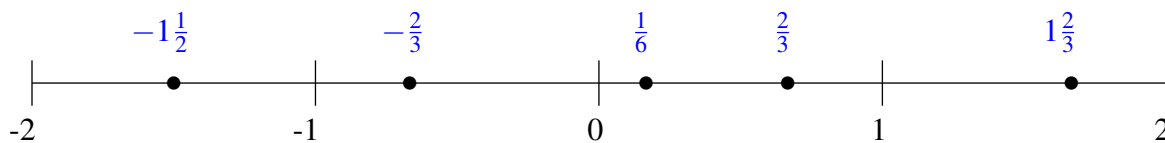
$$-1\frac{1}{3}, \frac{1}{4}, 1\frac{1}{3}, -\frac{3}{8}, \frac{2}{3}$$



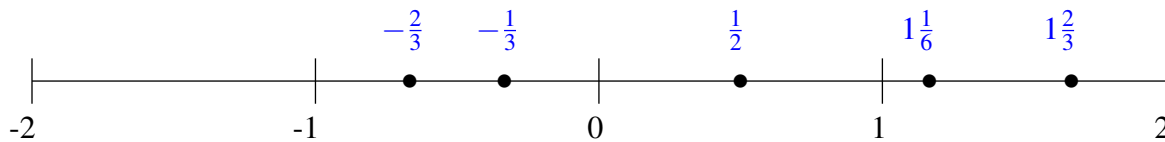
## Classification de Fractions (B) Solutions

À l'aide des droites numériques, classifiez chaque série de fractions ci-dessous en ordre croissant.

$$-1\frac{1}{2}, 1\frac{2}{3}, \frac{2}{3}, -\frac{2}{3}, \frac{1}{6}$$



$$-\frac{2}{3}, 1\frac{1}{6}, 1\frac{2}{3}, -\frac{1}{3}, \frac{1}{2}$$



$$-1\frac{1}{3}, \frac{1}{4}, 1\frac{1}{3}, -\frac{3}{8}, \frac{2}{3}$$

