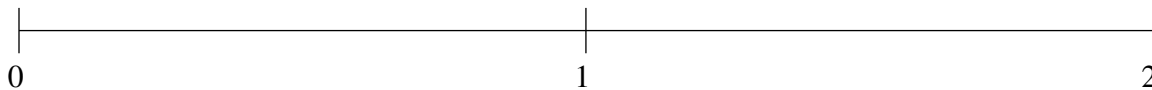


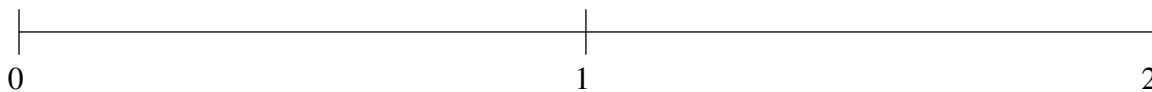
Classification de Fractions (G)

À l'aide des droites numériques, classifiez chaque série de fractions ci-dessous en ordre croissant.

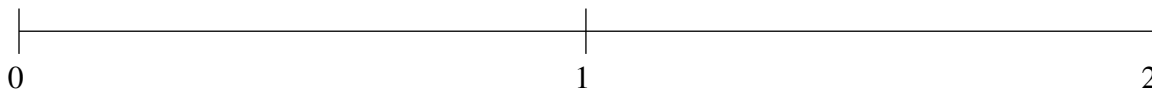
$$\frac{1}{3}, 1\frac{5}{6}, 1\frac{1}{2}, 1\frac{1}{4}, \frac{5}{6}$$



$$1\frac{2}{3}, \frac{5}{12}, \frac{1}{6}, 1\frac{1}{3}, \frac{3}{4}$$



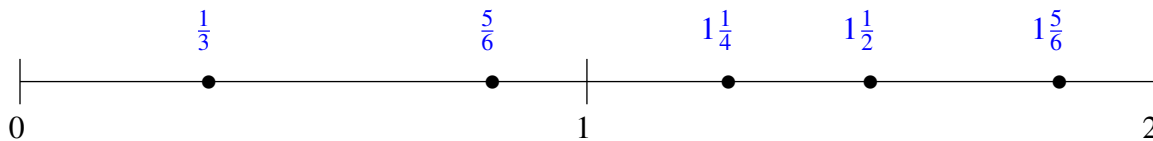
$$1\frac{1}{2}, \frac{3}{4}, 1\frac{3}{4}, 1\frac{1}{4}, \frac{1}{2}$$



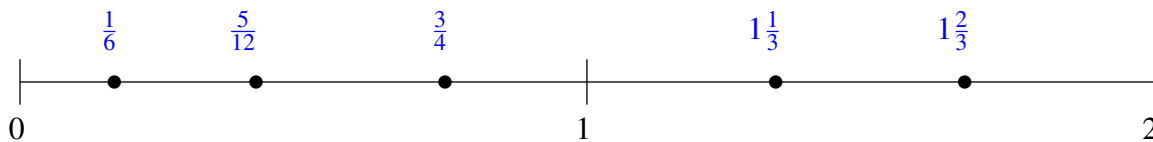
Classification de Fractions (G) Solutions

À l'aide des droites numériques, classifiez chaque série de fractions ci-dessous en ordre croissant.

$$\frac{1}{3}, 1\frac{5}{6}, 1\frac{1}{2}, 1\frac{1}{4}, \frac{5}{6}$$



$$1\frac{2}{3}, \frac{5}{12}, \frac{1}{6}, 1\frac{1}{3}, \frac{3}{4}$$



$$1\frac{1}{2}, \frac{3}{4}, 1\frac{3}{4}, 1\frac{1}{4}, \frac{1}{2}$$

