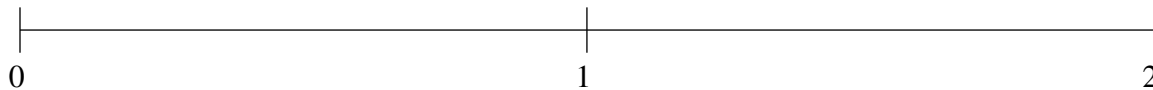


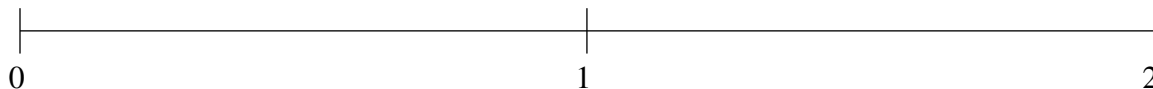
## Classification de Fractions (D)

À l'aide des droites numériques, classifiez chaque série de fractions ci-dessous en ordre croissant.

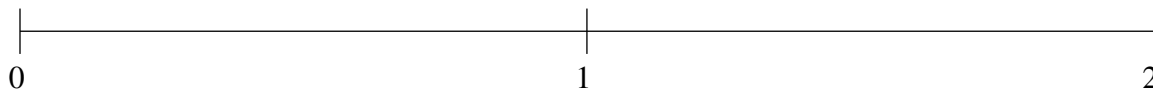
$$\frac{3}{4}, \frac{1}{6}, \frac{1}{2}, 1\frac{3}{4}, 1\frac{1}{2}$$



$$\frac{3}{8}, 1\frac{3}{4}, 1\frac{1}{4}, \frac{2}{3}, 1\frac{1}{2}$$



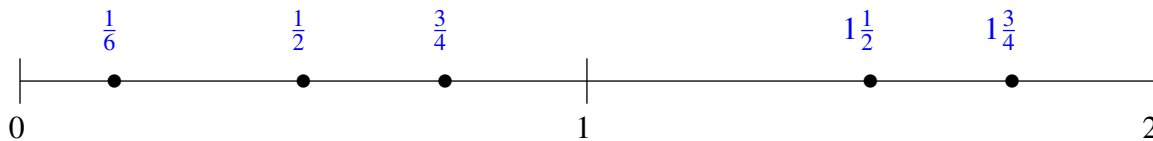
$$1\frac{1}{2}, \frac{2}{3}, 1\frac{1}{4}, 1\frac{5}{6}, \frac{1}{3}$$



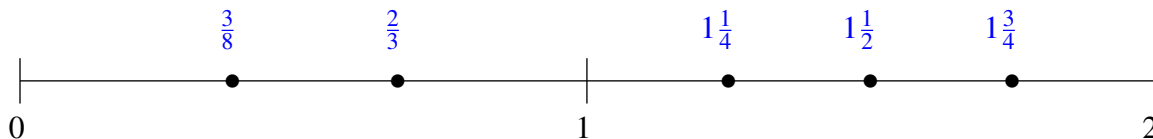
## Classification de Fractions (D) Solutions

À l'aide des droites numériques, classifiez chaque série de fractions ci-dessous en ordre croissant.

$$\frac{3}{4}, \frac{1}{6}, \frac{1}{2}, 1\frac{3}{4}, 1\frac{1}{2}$$



$$\frac{3}{8}, 1\frac{3}{4}, 1\frac{1}{4}, \frac{2}{3}, 1\frac{1}{2}$$



$$1\frac{1}{2}, \frac{2}{3}, 1\frac{1}{4}, 1\frac{5}{6}, \frac{1}{3}$$

