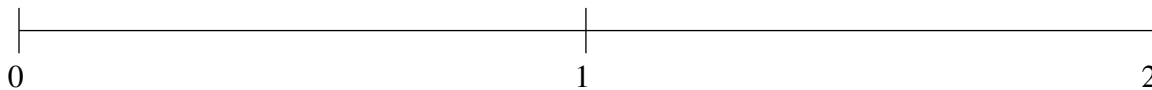


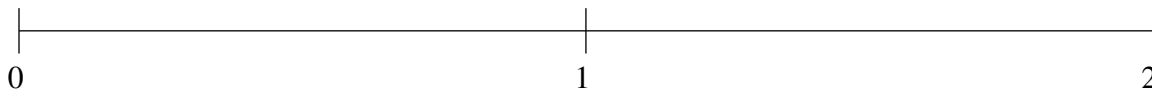
Classification de Fractions (C)

À l'aide des droites numériques, classifiez chaque série de fractions ci-dessous en ordre croissant.

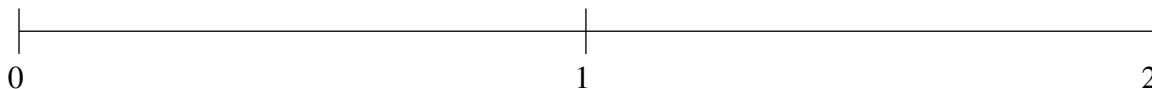
$$\frac{1}{3}, \frac{7}{8}, \frac{5}{8}, 1\frac{3}{4}, 1\frac{1}{2}$$



$$\frac{11}{12}, 1\frac{1}{2}, 1\frac{3}{4}, \frac{1}{2}, \frac{1}{4}$$



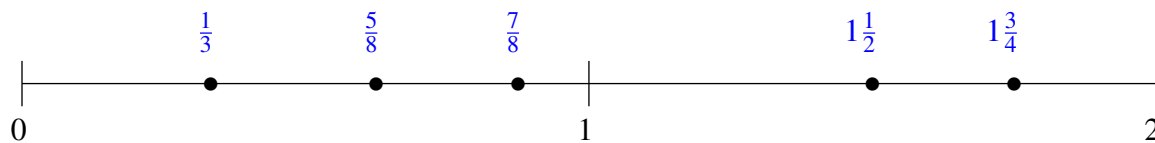
$$\frac{2}{3}, \frac{1}{12}, 1\frac{5}{12}, 1\frac{2}{3}, \frac{1}{3}$$



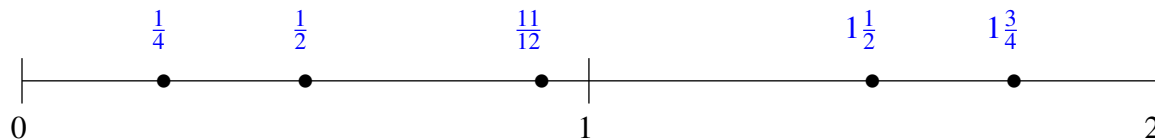
Classification de Fractions (C) Solutions

À l'aide des droites numériques, classifiez chaque série de fractions ci-dessous en ordre croissant.

$$\frac{1}{3}, \frac{7}{8}, \frac{5}{8}, 1\frac{3}{4}, 1\frac{1}{2}$$



$$\frac{11}{12}, 1\frac{1}{2}, 1\frac{3}{4}, \frac{1}{2}, \frac{1}{4}$$



$$\frac{2}{3}, \frac{1}{12}, 1\frac{5}{12}, 1\frac{2}{3}, \frac{1}{3}$$

