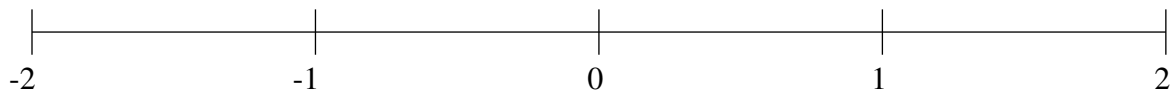


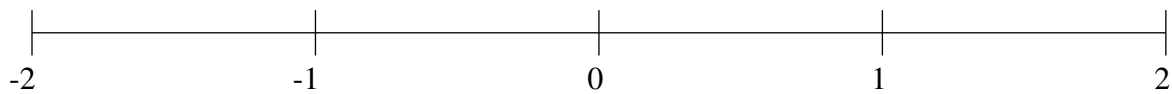
## Classification de Fractions (J)

À l'aide des droites numériques, classifiez chaque série de fractions ci-dessous en ordre croissant.

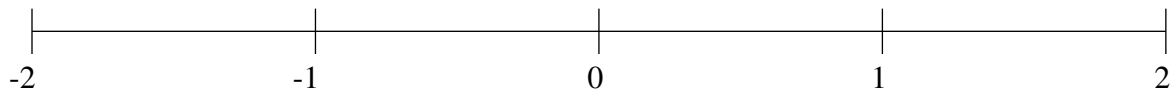
$$-\frac{1}{3}, -\frac{2}{3}, 1\frac{1}{2}, 1\frac{1}{5}, \frac{1}{4}$$



$$1\frac{7}{8}, -\frac{1}{2}, \frac{3}{4}, -1\frac{3}{8}, -1\frac{3}{4}$$



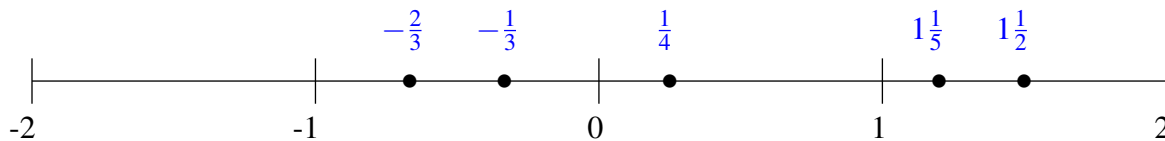
$$-1\frac{2}{7}, 1\frac{1}{9}, -1\frac{5}{6}, 1\frac{1}{2}, 1\frac{6}{7}$$



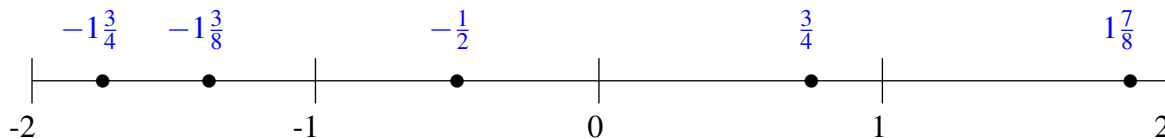
## Classification de Fractions (J) Solutions

À l'aide des droites numériques, classifiez chaque série de fractions ci-dessous en ordre croissant.

$$-\frac{1}{3}, -\frac{2}{3}, 1\frac{1}{2}, 1\frac{1}{5}, \frac{1}{4}$$



$$1\frac{7}{8}, -\frac{1}{2}, \frac{3}{4}, -1\frac{3}{8}, -1\frac{3}{4}$$



$$-1\frac{2}{7}, 1\frac{1}{9}, -1\frac{5}{6}, 1\frac{1}{2}, 1\frac{6}{7}$$

