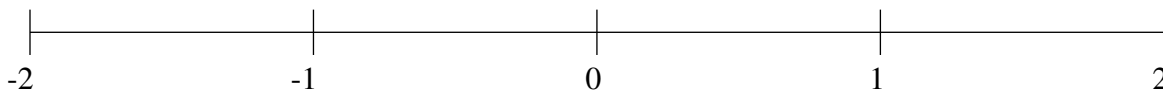


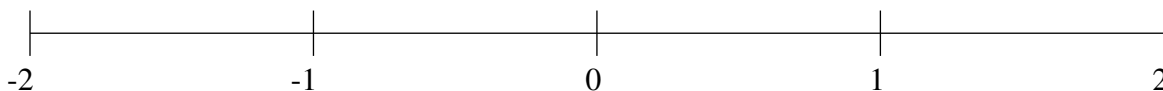
Classification de Fractions (F)

À l'aide des droites numériques, classifiez chaque série de fractions ci-dessous en ordre croissant.

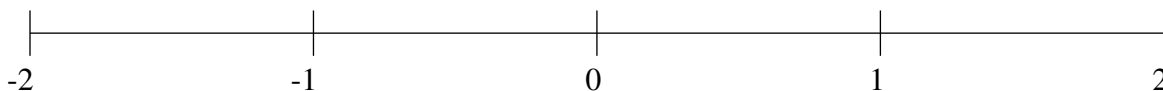
$$\frac{2}{3}, 1\frac{1}{6}, -1\frac{3}{4}, 1\frac{7}{9}, -\frac{1}{2}$$



$$-1\frac{1}{4}, 1\frac{2}{3}, 1\frac{1}{3}, \frac{3}{4}, -1\frac{2}{3}$$



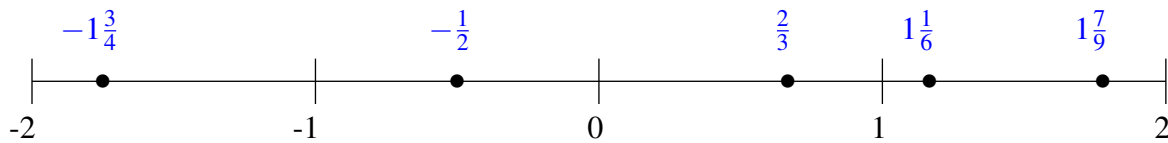
$$\frac{1}{2}, -\frac{3}{4}, -\frac{2}{5}, 1\frac{3}{4}, -1\frac{1}{2}$$



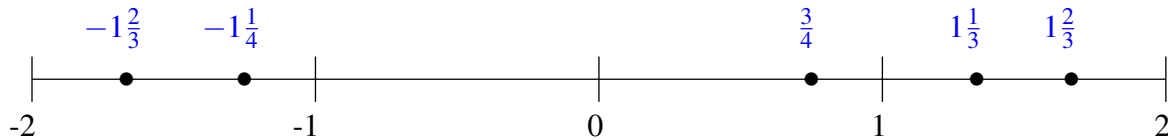
Classification de Fractions (F) Solutions

À l'aide des droites numériques, classifiez chaque série de fractions ci-dessous en ordre croissant.

$$\frac{2}{3}, 1\frac{1}{6}, -1\frac{3}{4}, 1\frac{7}{9}, -\frac{1}{2}$$



$$-1\frac{1}{4}, 1\frac{2}{3}, 1\frac{1}{3}, \frac{3}{4}, -1\frac{2}{3}$$



$$\frac{1}{2}, -\frac{3}{4}, -\frac{2}{5}, 1\frac{3}{4}, -1\frac{1}{2}$$

