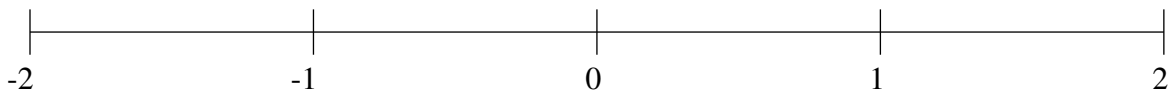


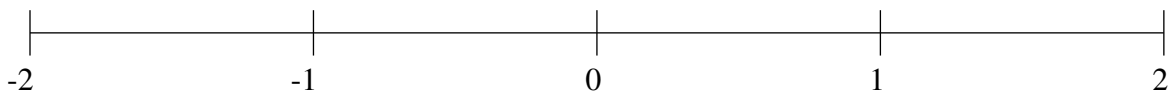
Classification de Fractions (E)

À l'aide des droites numériques, classifiez chaque série de fractions ci-dessous en ordre croissant.

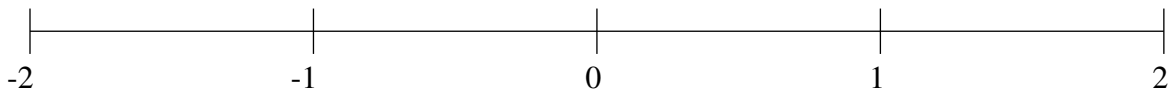
$$-1\frac{1}{8}, \frac{2}{3}, -\frac{2}{3}, \frac{1}{8}, 1\frac{1}{6}$$



$$-1\frac{1}{3}, -\frac{3}{4}, 1\frac{3}{4}, \frac{4}{7}, 1\frac{2}{5}$$



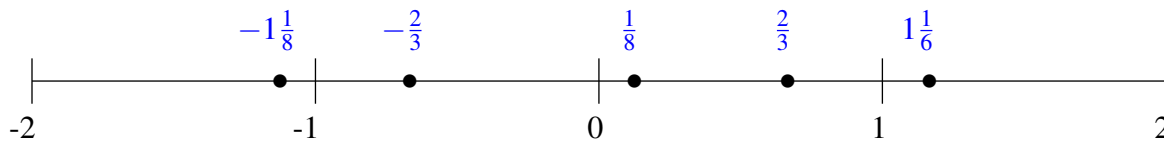
$$-\frac{2}{5}, -1\frac{1}{2}, \frac{1}{10}, -\frac{5}{7}, 1\frac{1}{3}$$



Classification de Fractions (E) Solutions

À l'aide des droites numériques, classifiez chaque série de fractions ci-dessous en ordre croissant.

$$-1\frac{1}{8}, \frac{2}{3}, -\frac{2}{3}, \frac{1}{8}, 1\frac{1}{6}$$



$$-1\frac{1}{3}, -\frac{3}{4}, 1\frac{3}{4}, \frac{4}{7}, 1\frac{2}{5}$$



$$-\frac{2}{5}, -1\frac{1}{2}, \frac{1}{10}, -\frac{5}{7}, 1\frac{1}{3}$$

