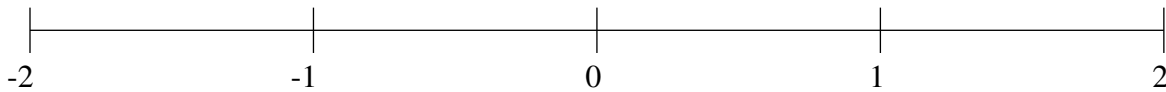


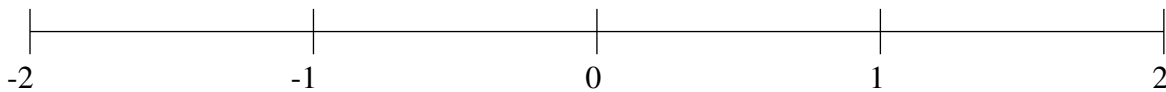
Classification de Fractions (D)

À l'aide des droites numériques, classifiez chaque série de fractions ci-dessous en ordre croissant.

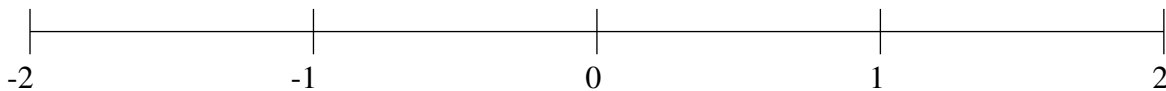
$$-\frac{1}{4}, \frac{1}{2}, \frac{1}{9}, \frac{1}{2}, -1\frac{1}{3}$$



$$1\frac{5}{7}, -1\frac{8}{9}, -1\frac{1}{3}, -\frac{3}{5}, 1\frac{1}{3}$$



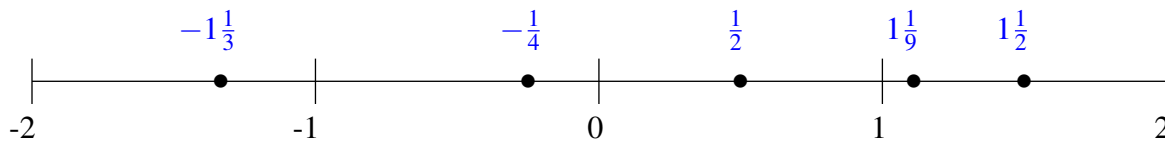
$$-\frac{1}{3}, 1\frac{2}{7}, -\frac{5}{6}, \frac{1}{6}, \frac{2}{3}$$



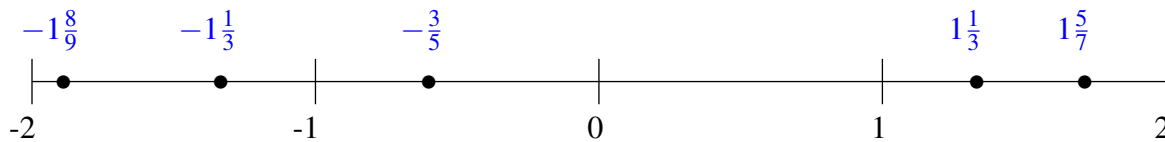
Classification de Fractions (D) Solutions

À l'aide des droites numériques, classifiez chaque série de fractions ci-dessous en ordre croissant.

$$-\frac{1}{4}, 1\frac{1}{2}, 1\frac{1}{9}, \frac{1}{2}, -1\frac{1}{3}$$



$$1\frac{5}{7}, -1\frac{8}{9}, -1\frac{1}{3}, -\frac{3}{5}, 1\frac{1}{3}$$



$$-\frac{1}{3}, 1\frac{2}{7}, -\frac{5}{6}, \frac{1}{6}, \frac{2}{3}$$

