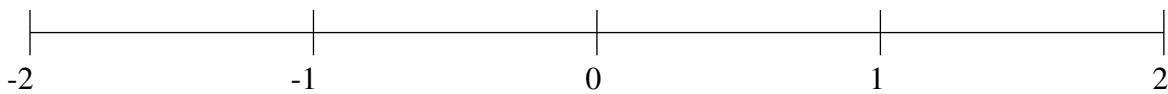


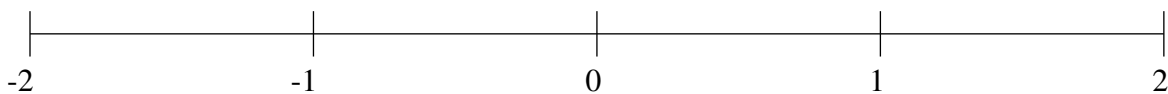
Classification de Fractions (C)

À l'aide des droites numériques, classifiez chaque série de fractions ci-dessous en ordre croissant.

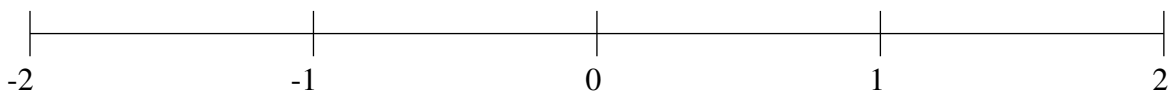
$$-\frac{5}{6}, -\frac{1}{5}, 1\frac{1}{3}, -1\frac{3}{8}, \frac{1}{5}$$



$$-\frac{1}{4}, 1\frac{1}{3}, \frac{5}{9}, 1\frac{6}{7}, -\frac{5}{6}$$



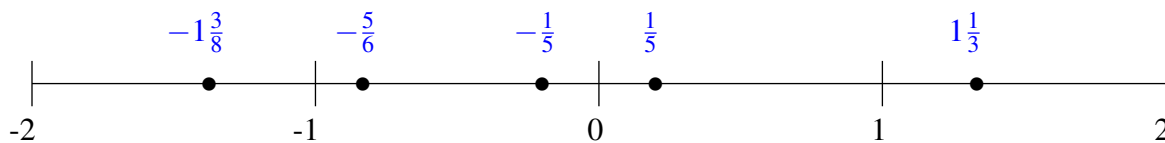
$$1\frac{4}{7}, -1\frac{2}{9}, -\frac{3}{4}, \frac{3}{5}, -1\frac{4}{7}$$



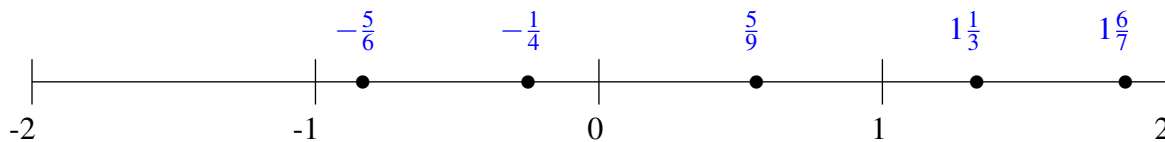
Classification de Fractions (C) Solutions

À l'aide des droites numériques, classifiez chaque série de fractions ci-dessous en ordre croissant.

$$-\frac{5}{6}, -\frac{1}{5}, 1\frac{1}{3}, -1\frac{3}{8}, \frac{1}{5}$$



$$-\frac{1}{4}, 1\frac{1}{3}, \frac{5}{9}, 1\frac{6}{7}, -\frac{5}{6}$$



$$1\frac{4}{7}, -1\frac{2}{9}, -\frac{3}{4}, \frac{3}{5}, -1\frac{4}{7}$$

