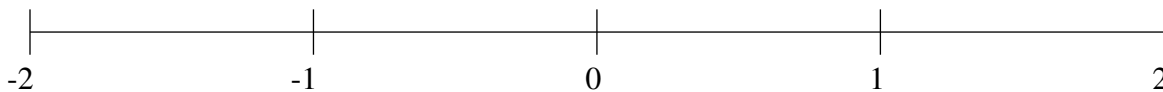


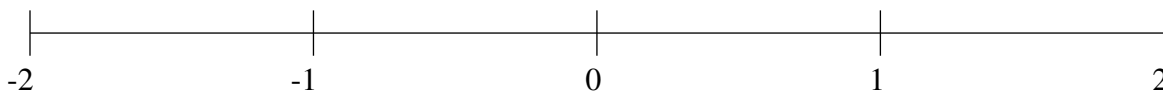
Classification de Fractions (A)

À l'aide des droites numériques, classifiez chaque série de fractions ci-dessous en ordre croissant.

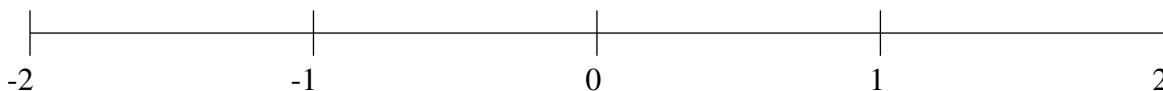
$$\frac{1}{2}, -\frac{1}{5}, 1\frac{4}{5}, -1\frac{1}{5}, \frac{4}{5}$$



$$1\frac{1}{2}, -1\frac{1}{2}, -1\frac{4}{5}, -1\frac{1}{10}, -\frac{2}{5}$$



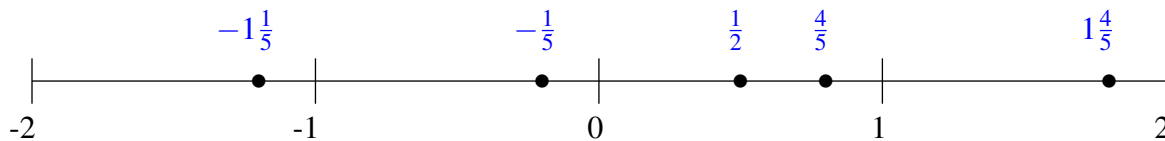
$$1\frac{2}{5}, -\frac{3}{5}, \frac{1}{2}, 1\frac{4}{5}, -1\frac{2}{5}$$



Classification de Fractions (A) Solutions

À l'aide des droites numériques, classifiez chaque série de fractions ci-dessous en ordre croissant.

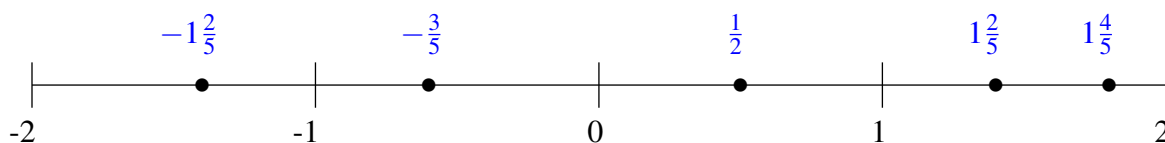
$$\frac{1}{2}, -\frac{1}{5}, 1\frac{4}{5}, -1\frac{1}{5}, \frac{4}{5}$$



$$1\frac{1}{2}, -1\frac{1}{2}, -1\frac{4}{5}, -1\frac{1}{10}, -\frac{2}{5}$$



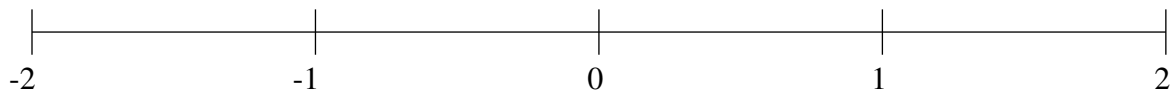
$$1\frac{2}{5}, -\frac{3}{5}, \frac{1}{2}, 1\frac{4}{5}, -1\frac{2}{5}$$



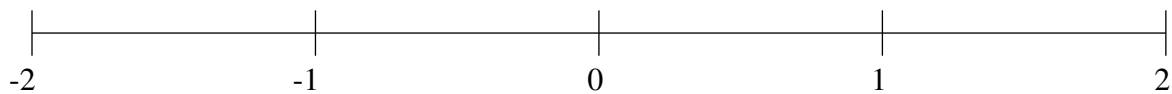
Classification de Fractions (B)

À l'aide des droites numériques, classifiez chaque série de fractions ci-dessous en ordre croissant.

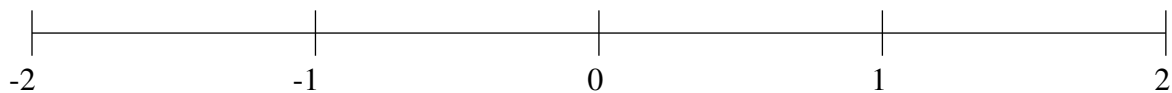
$$-\frac{4}{5}, -1\frac{4}{5}, 1\frac{1}{5}, -\frac{1}{5}, -1\frac{1}{2}$$



$$-1\frac{1}{2}, -\frac{1}{2}, 1\frac{2}{5}, \frac{3}{5}, \frac{9}{10}$$



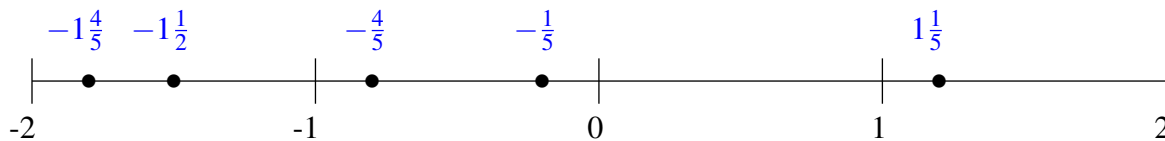
$$-\frac{3}{5}, \frac{1}{2}, 1\frac{1}{5}, 1\frac{3}{5}, \frac{1}{5}$$



Classification de Fractions (B) Solutions

À l'aide des droites numériques, classifiez chaque série de fractions ci-dessous en ordre croissant.

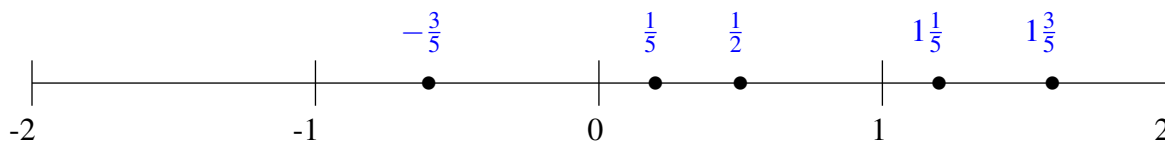
$$-\frac{4}{5}, -1\frac{4}{5}, 1\frac{1}{5}, -\frac{1}{5}, -1\frac{1}{2}$$



$$-1\frac{1}{2}, -\frac{1}{2}, 1\frac{2}{5}, \frac{3}{5}, \frac{9}{10}$$



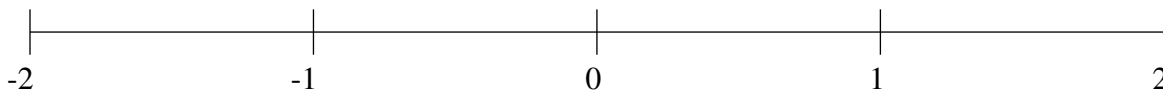
$$-\frac{3}{5}, \frac{1}{2}, 1\frac{1}{5}, 1\frac{3}{5}, \frac{1}{5}$$



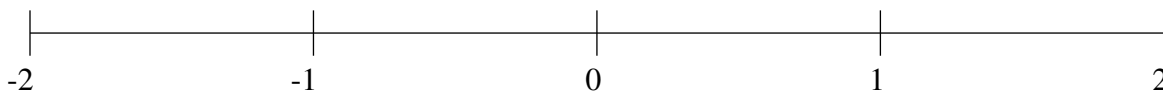
Classification de Fractions (C)

À l'aide des droites numériques, classifiez chaque série de fractions ci-dessous en ordre croissant.

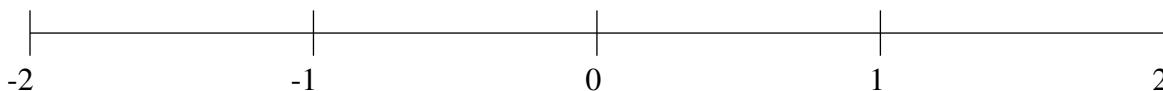
$$-\frac{1}{5}, \frac{2}{5}, 1\frac{2}{5}, -\frac{3}{5}, 1\frac{1}{10}$$



$$-1\frac{1}{5}, \frac{1}{5}, \frac{3}{5}, 1\frac{4}{5}, 1\frac{2}{5}$$



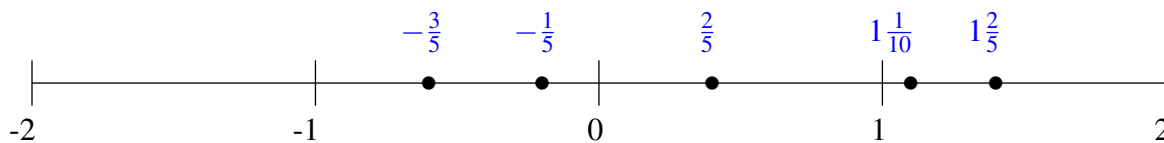
$$-\frac{1}{2}, 1\frac{2}{5}, \frac{1}{5}, -\frac{1}{5}, -1\frac{1}{2}$$



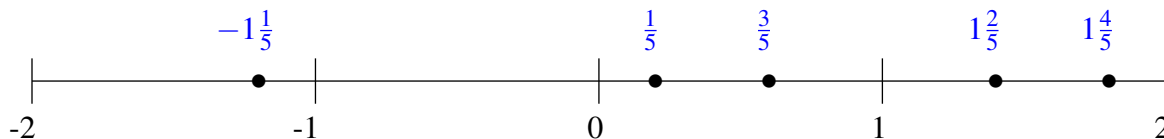
Classification de Fractions (C) Solutions

À l'aide des droites numériques, classifiez chaque série de fractions ci-dessous en ordre croissant.

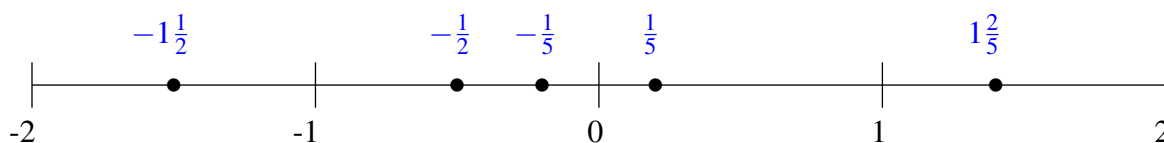
$$-\frac{1}{5}, \frac{2}{5}, 1\frac{2}{5}, -\frac{3}{5}, 1\frac{1}{10}$$



$$-1\frac{1}{5}, \frac{1}{5}, \frac{3}{5}, 1\frac{4}{5}, 1\frac{2}{5}$$



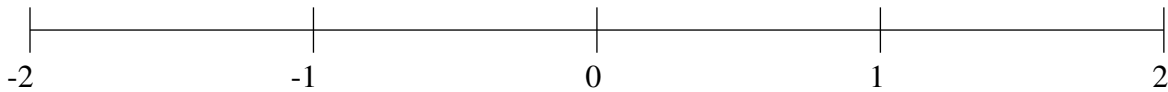
$$-\frac{1}{2}, 1\frac{2}{5}, \frac{1}{5}, -\frac{1}{5}, -1\frac{1}{2}$$



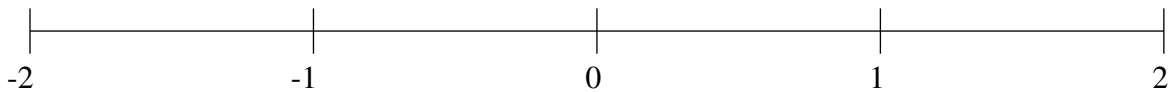
Classification de Fractions (D)

À l'aide des droites numériques, classifiez chaque série de fractions ci-dessous en ordre croissant.

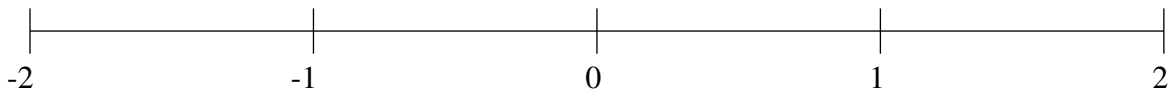
$$\frac{2}{5}, -1\frac{1}{2}, 1\frac{4}{5}, 1\frac{2}{5}, -\frac{1}{2}$$



$$-1\frac{1}{2}, -1\frac{4}{5}, -\frac{2}{5}, \frac{1}{2}, 1\frac{2}{5}$$



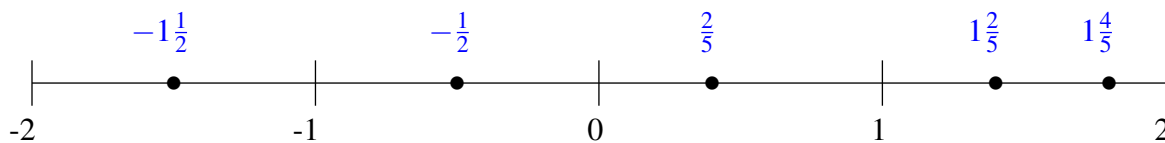
$$-1\frac{2}{5}, \frac{1}{2}, -1\frac{9}{10}, 1\frac{1}{2}, -\frac{2}{5}$$



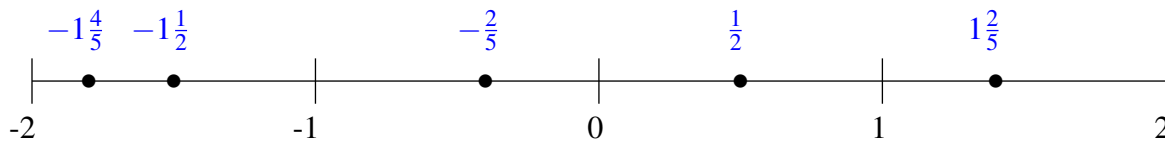
Classification de Fractions (D) Solutions

À l'aide des droites numériques, classifiez chaque série de fractions ci-dessous en ordre croissant.

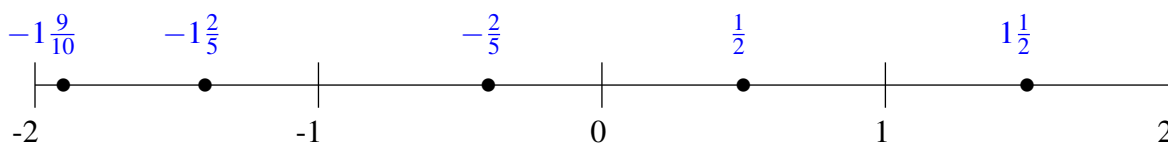
$$\frac{2}{5}, -1\frac{1}{2}, 1\frac{4}{5}, 1\frac{2}{5}, -\frac{1}{2}$$



$$-1\frac{1}{2}, -1\frac{4}{5}, -\frac{2}{5}, \frac{1}{2}, 1\frac{2}{5}$$



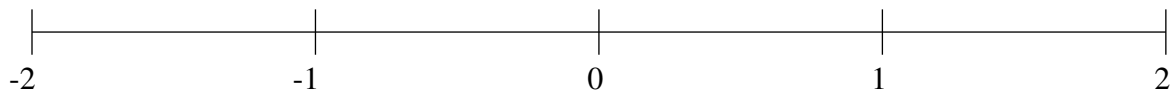
$$-1\frac{2}{5}, \frac{1}{2}, -1\frac{9}{10}, 1\frac{1}{2}, -\frac{2}{5}$$



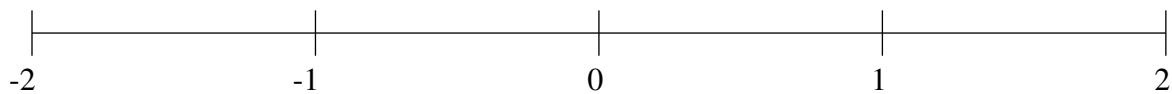
Classification de Fractions (E)

À l'aide des droites numériques, classifiez chaque série de fractions ci-dessous en ordre croissant.

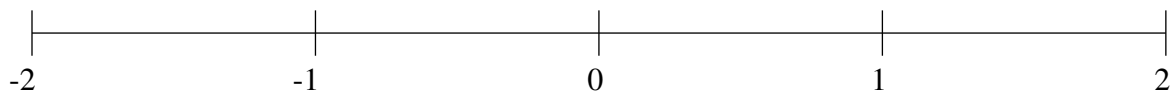
$$-1\frac{1}{5}, 1\frac{4}{5}, -\frac{1}{2}, 1\frac{1}{5}, \frac{4}{5}$$



$$-1\frac{4}{5}, -1\frac{1}{2}, -\frac{2}{5}, \frac{1}{2}, -1\frac{1}{5}$$



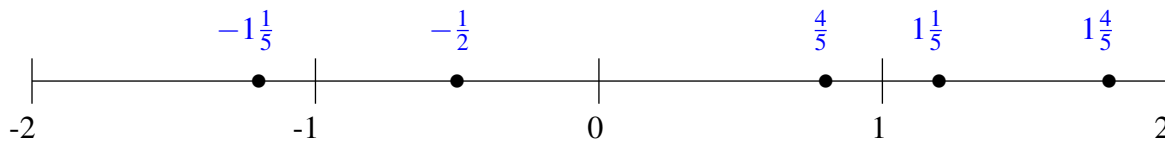
$$-\frac{1}{2}, \frac{1}{5}, -1\frac{3}{5}, \frac{1}{2}, 1\frac{4}{5}$$



Classification de Fractions (E) Solutions

À l'aide des droites numériques, classifiez chaque série de fractions ci-dessous en ordre croissant.

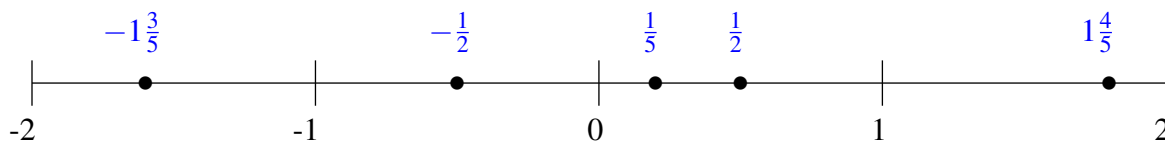
$$-1\frac{1}{5}, 1\frac{4}{5}, -\frac{1}{2}, 1\frac{1}{5}, \frac{4}{5}$$



$$-1\frac{4}{5}, -1\frac{1}{2}, -\frac{2}{5}, \frac{1}{2}, -1\frac{1}{5}$$



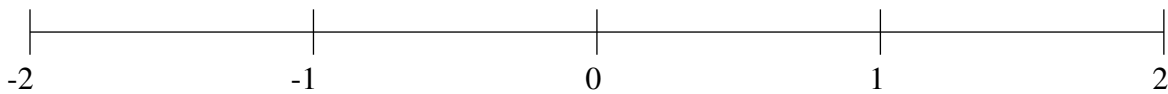
$$-\frac{1}{2}, \frac{1}{5}, -1\frac{3}{5}, \frac{1}{2}, 1\frac{4}{5}$$



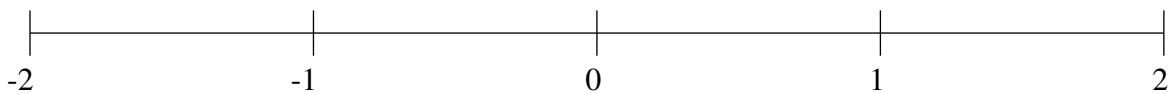
Classification de Fractions (F)

À l'aide des droites numériques, classifiez chaque série de fractions ci-dessous en ordre croissant.

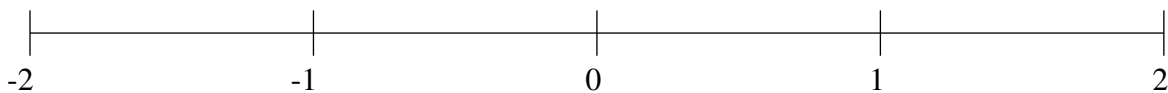
$$\frac{1}{5}, 1\frac{1}{5}, -\frac{1}{2}, 1\frac{1}{2}, \frac{1}{2}$$



$$\frac{1}{2}, 1\frac{1}{2}, -1\frac{2}{5}, \frac{4}{5}, \frac{1}{5}$$



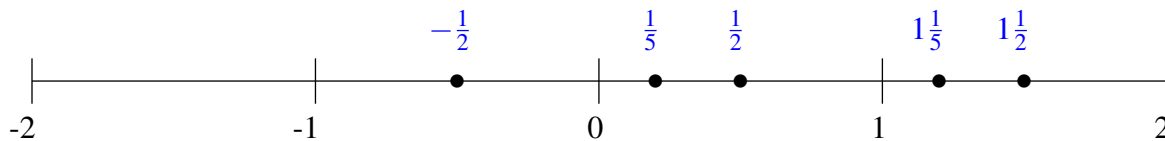
$$\frac{4}{5}, -1\frac{1}{2}, 1\frac{1}{5}, -\frac{7}{10}, \frac{2}{5}$$



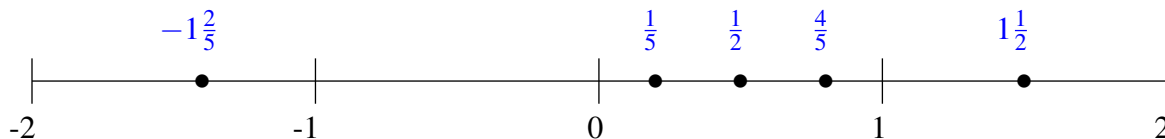
Classification de Fractions (F) Solutions

À l'aide des droites numériques, classifiez chaque série de fractions ci-dessous en ordre croissant.

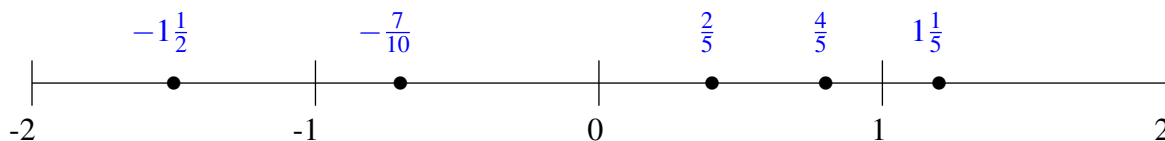
$$\frac{1}{5}, 1\frac{1}{5}, -\frac{1}{2}, 1\frac{1}{2}, \frac{1}{2}$$



$$\frac{1}{2}, 1\frac{1}{2}, -1\frac{2}{5}, \frac{4}{5}, \frac{1}{5}$$



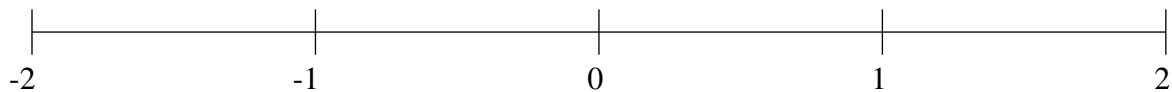
$$\frac{4}{5}, -1\frac{1}{2}, 1\frac{1}{5}, -\frac{7}{10}, \frac{2}{5}$$



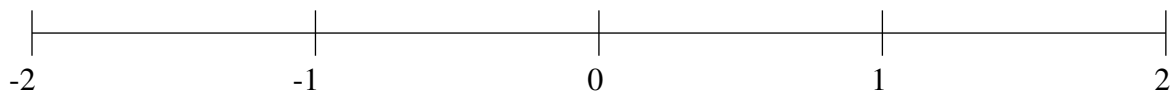
Classification de Fractions (G)

À l'aide des droites numériques, classifiez chaque série de fractions ci-dessous en ordre croissant.

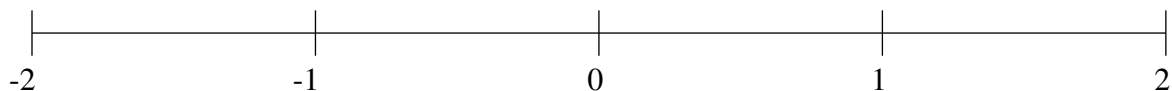
$$-\frac{1}{2}, -1\frac{1}{2}, -\frac{1}{5}, \frac{4}{5}, \frac{1}{2}$$



$$-1\frac{1}{5}, 1\frac{1}{2}, \frac{1}{10}, 1\frac{4}{5}, \frac{2}{5}$$



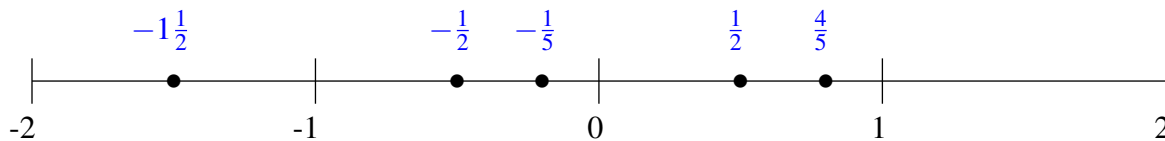
$$1\frac{1}{2}, \frac{4}{5}, -1\frac{1}{2}, -1\frac{4}{5}, \frac{1}{5}$$



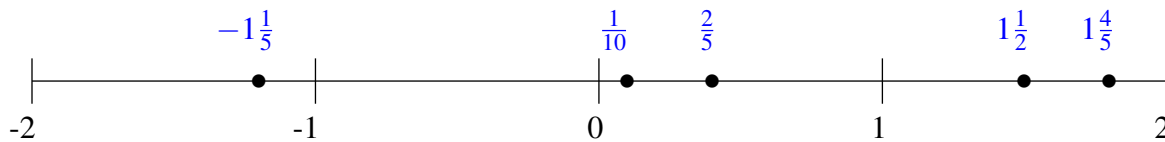
Classification de Fractions (G) Solutions

À l'aide des droites numériques, classifiez chaque série de fractions ci-dessous en ordre croissant.

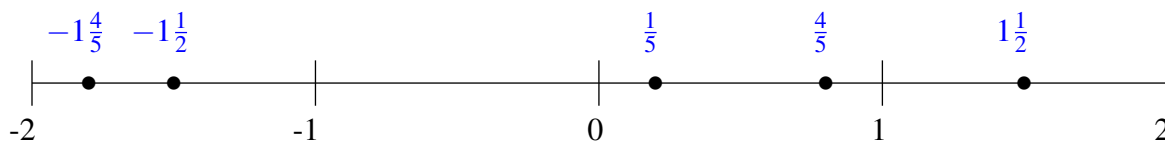
$$-\frac{1}{2}, -1\frac{1}{2}, -\frac{1}{5}, \frac{4}{5}, \frac{1}{2}$$



$$-1\frac{1}{5}, 1\frac{1}{2}, \frac{1}{10}, 1\frac{4}{5}, \frac{2}{5}$$



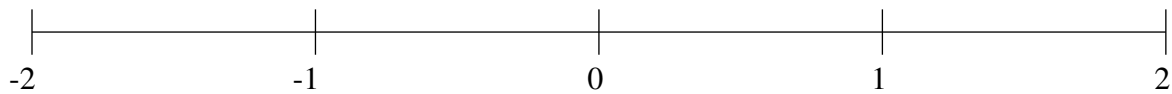
$$1\frac{1}{2}, \frac{4}{5}, -1\frac{1}{2}, -1\frac{4}{5}, \frac{1}{5}$$



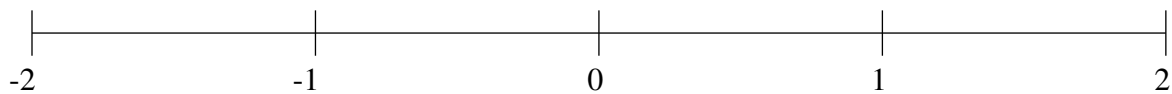
Classification de Fractions (H)

À l'aide des droites numériques, classifiez chaque série de fractions ci-dessous en ordre croissant.

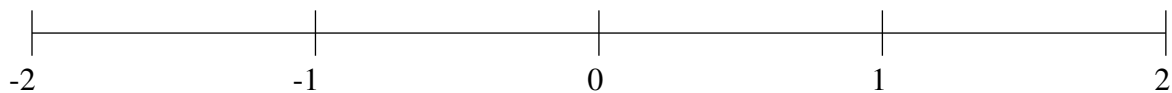
$$-1\frac{1}{2}, \frac{1}{2}, 1\frac{1}{2}, -1\frac{1}{5}, 1\frac{4}{5}$$



$$1\frac{1}{2}, -\frac{1}{2}, -1\frac{1}{2}, -\frac{4}{5}, \frac{1}{2}$$



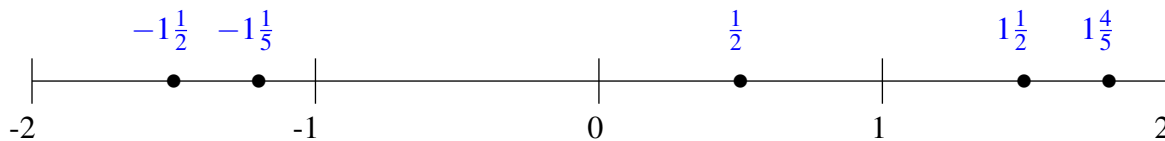
$$\frac{4}{5}, 1\frac{1}{2}, 1\frac{4}{5}, -\frac{1}{2}, -1\frac{3}{5}$$



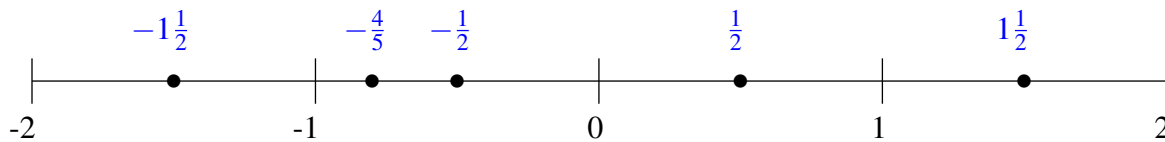
Classification de Fractions (H) Solutions

À l'aide des droites numériques, classifiez chaque série de fractions ci-dessous en ordre croissant.

$$-1\frac{1}{2}, \frac{1}{2}, 1\frac{1}{2}, -1\frac{1}{5}, 1\frac{4}{5}$$



$$1\frac{1}{2}, -\frac{1}{2}, -1\frac{1}{2}, -\frac{4}{5}, \frac{1}{2}$$



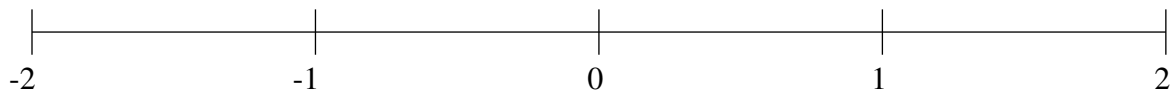
$$\frac{4}{5}, 1\frac{1}{2}, 1\frac{4}{5}, -\frac{1}{2}, -1\frac{3}{5}$$



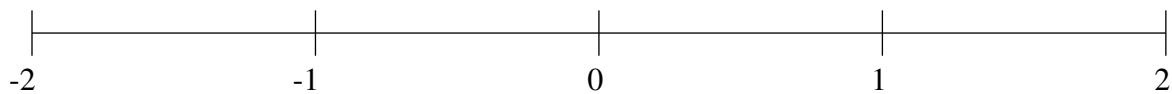
Classification de Fractions (I)

À l'aide des droites numériques, classifiez chaque série de fractions ci-dessous en ordre croissant.

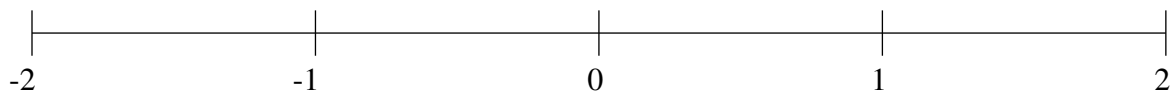
$$-\frac{3}{5}, -\frac{1}{5}, -1\frac{2}{5}, \frac{1}{2}, \frac{4}{5}$$



$$-\frac{2}{5}, \frac{4}{5}, -1\frac{1}{2}, -1\frac{1}{5}, \frac{1}{5}$$



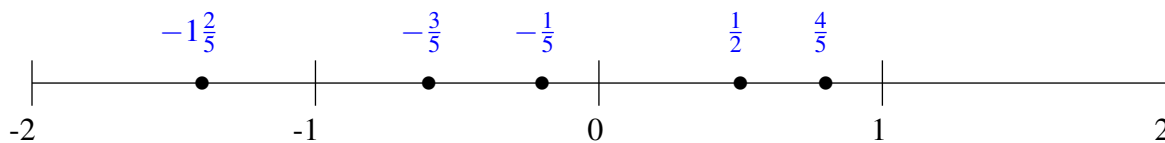
$$-1\frac{1}{2}, -\frac{1}{5}, 1\frac{1}{2}, -\frac{1}{2}, -1\frac{1}{5}$$



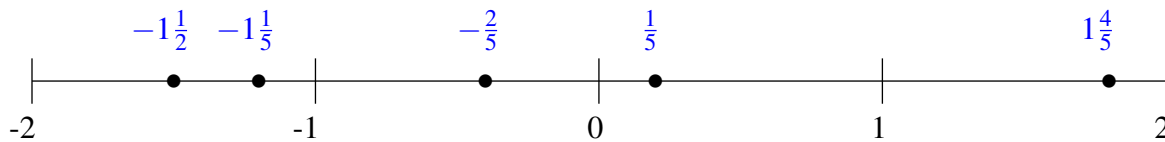
Classification de Fractions (I) Solutions

À l'aide des droites numériques, classifiez chaque série de fractions ci-dessous en ordre croissant.

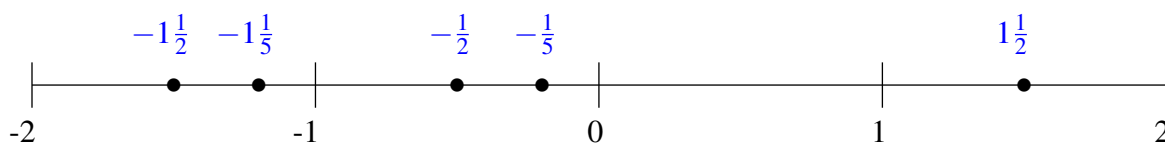
$$-\frac{3}{5}, -\frac{1}{5}, -1\frac{2}{5}, \frac{1}{2}, \frac{4}{5}$$



$$-\frac{2}{5}, 1\frac{4}{5}, -1\frac{1}{2}, -1\frac{1}{5}, \frac{1}{5}$$



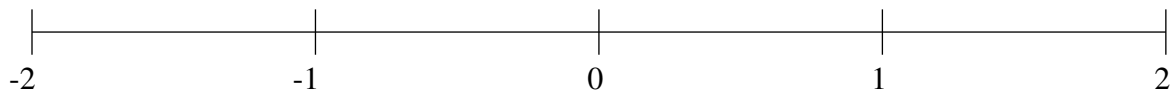
$$-1\frac{1}{2}, -\frac{1}{5}, 1\frac{1}{2}, -\frac{1}{2}, -1\frac{1}{5}$$



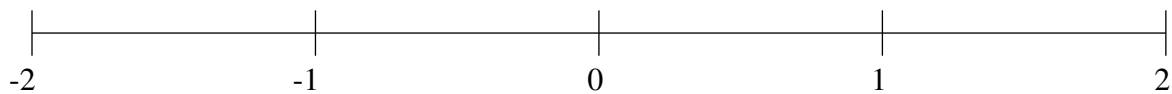
Classification de Fractions (J)

À l'aide des droites numériques, classifiez chaque série de fractions ci-dessous en ordre croissant.

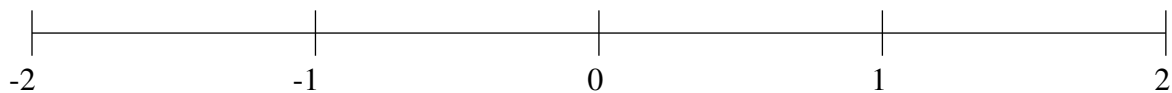
$$-1\frac{4}{5}, 1\frac{1}{5}, \frac{1}{2}, \frac{4}{5}, -\frac{3}{5}$$



$$-\frac{1}{5}, 1\frac{1}{5}, \frac{1}{2}, \frac{1}{5}, 1\frac{4}{5}$$



$$-\frac{1}{5}, 1\frac{1}{2}, \frac{3}{5}, 1\frac{9}{10}, -\frac{1}{2}$$



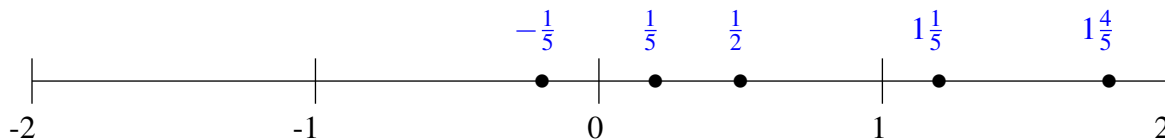
Classification de Fractions (J) Solutions

À l'aide des droites numériques, classifiez chaque série de fractions ci-dessous en ordre croissant.

$$-1\frac{4}{5}, 1\frac{1}{5}, \frac{1}{2}, \frac{4}{5}, -\frac{3}{5}$$



$$-\frac{1}{5}, 1\frac{1}{5}, \frac{1}{2}, \frac{1}{5}, 1\frac{4}{5}$$



$$-\frac{1}{5}, 1\frac{1}{2}, \frac{3}{5}, 1\frac{9}{10}, -\frac{1}{2}$$

