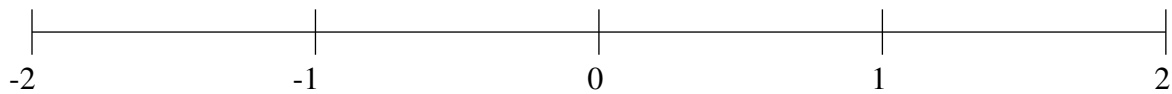


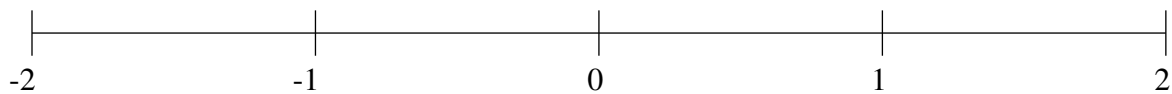
Classification de Fractions (I)

À l'aide des droites numériques, classifiez chaque série de fractions ci-dessous en ordre croissant.

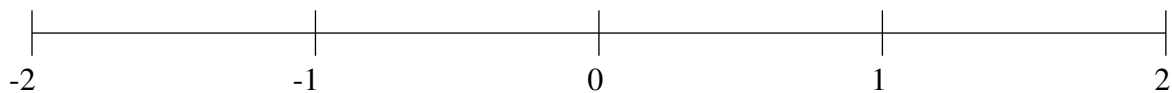
$$-\frac{3}{5}, -\frac{1}{5}, -1\frac{2}{5}, \frac{1}{2}, \frac{4}{5}$$



$$-\frac{2}{5}, 1\frac{4}{5}, -1\frac{1}{2}, -1\frac{1}{5}, \frac{1}{5}$$



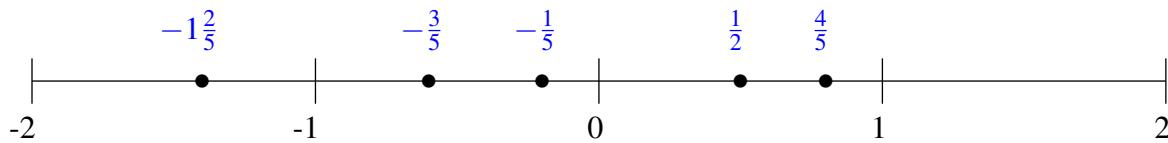
$$-1\frac{1}{2}, -\frac{1}{5}, 1\frac{1}{2}, -\frac{1}{2}, -1\frac{1}{5}$$



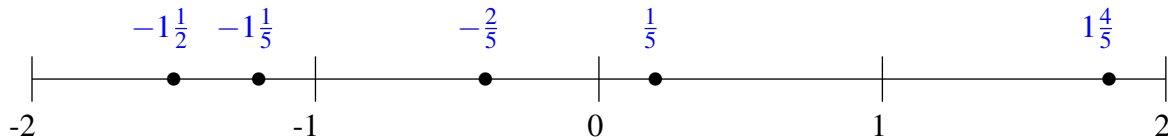
Classification de Fractions (I) Solutions

À l'aide des droites numériques, classifiez chaque série de fractions ci-dessous en ordre croissant.

$$-\frac{3}{5}, -\frac{1}{5}, -1\frac{2}{5}, \frac{1}{2}, \frac{4}{5}$$



$$-\frac{2}{5}, 1\frac{4}{5}, -1\frac{1}{2}, -1\frac{1}{5}, \frac{1}{5}$$



$$-1\frac{1}{2}, -\frac{1}{5}, 1\frac{1}{2}, -\frac{1}{2}, -1\frac{1}{5}$$

