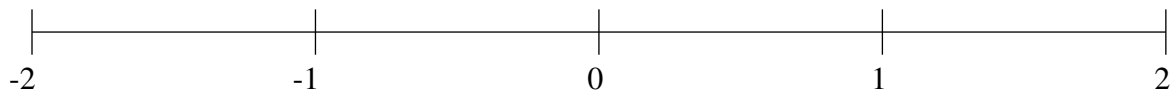


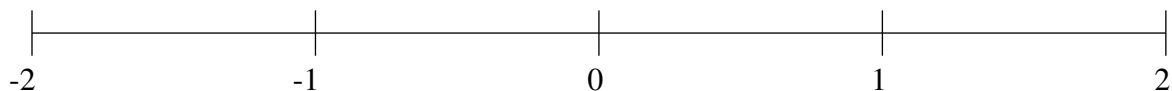
Classification de Fractions (G)

À l'aide des droites numériques, classifiez chaque série de fractions ci-dessous en ordre croissant.

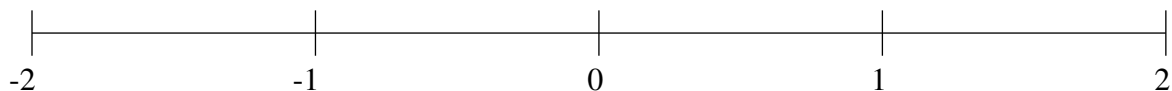
$$-\frac{1}{2}, -1\frac{1}{2}, -\frac{1}{5}, \frac{4}{5}, \frac{1}{2}$$



$$-1\frac{1}{5}, 1\frac{1}{2}, \frac{1}{10}, 1\frac{4}{5}, \frac{2}{5}$$



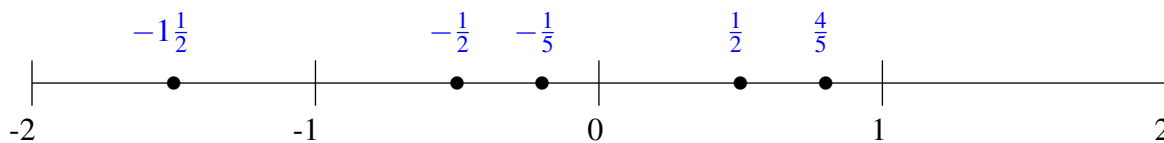
$$1\frac{1}{2}, \frac{4}{5}, -1\frac{1}{2}, -1\frac{4}{5}, \frac{1}{5}$$



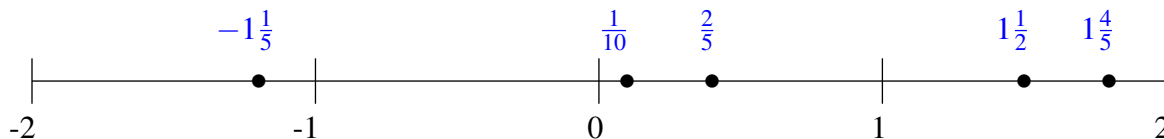
Classification de Fractions (G) Solutions

À l'aide des droites numériques, classifiez chaque série de fractions ci-dessous en ordre croissant.

$$-\frac{1}{2}, -1\frac{1}{2}, -\frac{1}{5}, \frac{4}{5}, \frac{1}{2}$$



$$-1\frac{1}{5}, 1\frac{1}{2}, \frac{1}{10}, 1\frac{4}{5}, \frac{2}{5}$$



$$1\frac{1}{2}, \frac{4}{5}, -1\frac{1}{2}, -1\frac{4}{5}, \frac{1}{5}$$

