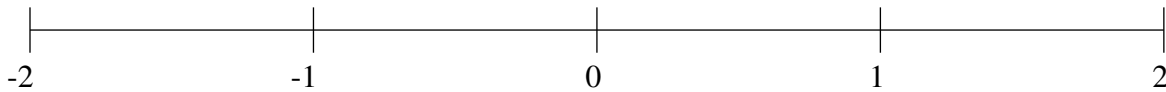


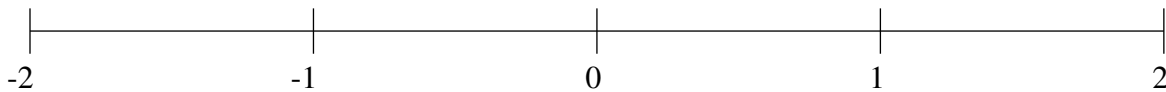
Classification de Fractions (E)

À l'aide des droites numériques, classifiez chaque série de fractions ci-dessous en ordre croissant.

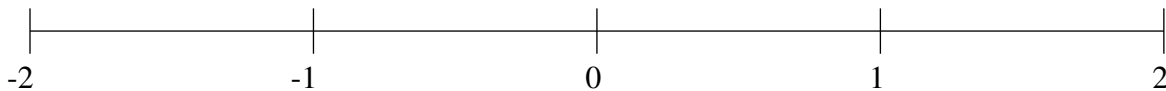
$$-1\frac{1}{5}, 1\frac{4}{5}, -\frac{1}{2}, 1\frac{1}{5}, \frac{4}{5}$$



$$-1\frac{4}{5}, -1\frac{1}{2}, -\frac{2}{5}, \frac{1}{2}, -1\frac{1}{5}$$



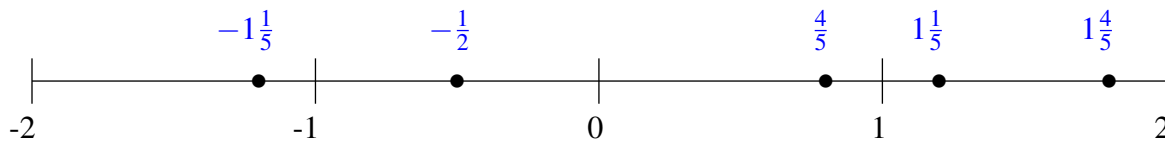
$$-\frac{1}{2}, \frac{1}{5}, -1\frac{3}{5}, \frac{1}{2}, 1\frac{4}{5}$$



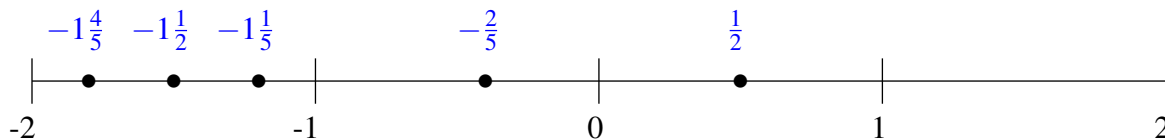
Classification de Fractions (E) Solutions

À l'aide des droites numériques, classifiez chaque série de fractions ci-dessous en ordre croissant.

$$-1\frac{1}{5}, 1\frac{4}{5}, -\frac{1}{2}, 1\frac{1}{5}, \frac{4}{5}$$



$$-1\frac{4}{5}, -1\frac{1}{2}, -\frac{2}{5}, \frac{1}{2}, -1\frac{1}{5}$$



$$-\frac{1}{2}, \frac{1}{5}, -1\frac{3}{5}, \frac{1}{2}, 1\frac{4}{5}$$

