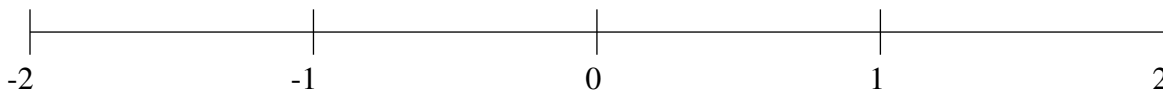


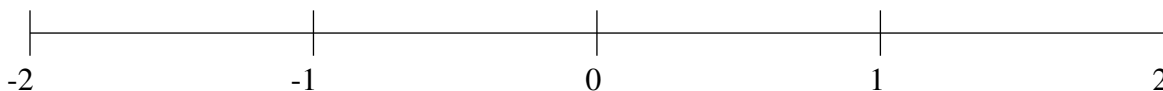
## Classification de Fractions (C)

À l'aide des droites numériques, classifiez chaque série de fractions ci-dessous en ordre croissant.

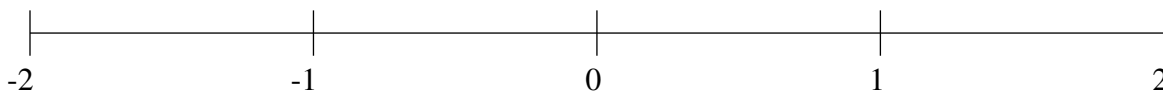
$$-\frac{1}{5}, \frac{2}{5}, 1\frac{2}{5}, -\frac{3}{5}, 1\frac{1}{10}$$



$$-1\frac{1}{5}, \frac{1}{5}, \frac{3}{5}, 1\frac{4}{5}, 1\frac{2}{5}$$



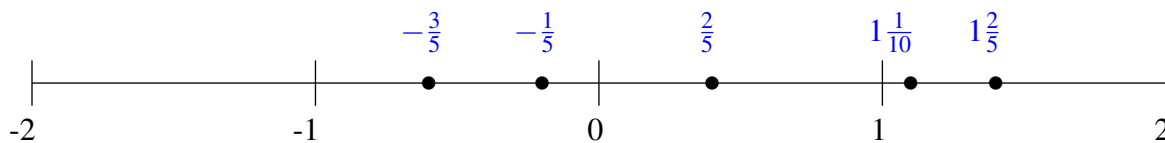
$$-\frac{1}{2}, 1\frac{2}{5}, \frac{1}{5}, -\frac{1}{5}, -1\frac{1}{2}$$



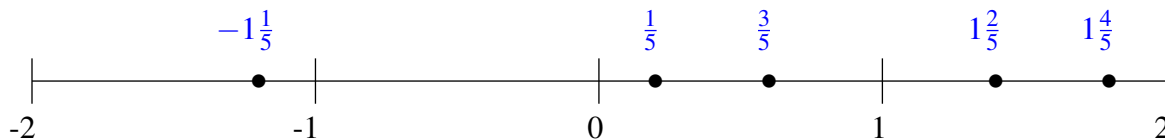
## Classification de Fractions (C) Solutions

À l'aide des droites numériques, classifiez chaque série de fractions ci-dessous en ordre croissant.

$$-\frac{1}{5}, \frac{2}{5}, 1\frac{2}{5}, -\frac{3}{5}, 1\frac{1}{10}$$



$$-1\frac{1}{5}, \frac{1}{5}, \frac{3}{5}, 1\frac{4}{5}, 1\frac{2}{5}$$



$$-\frac{1}{2}, 1\frac{2}{5}, \frac{1}{5}, -\frac{1}{5}, -1\frac{1}{2}$$

