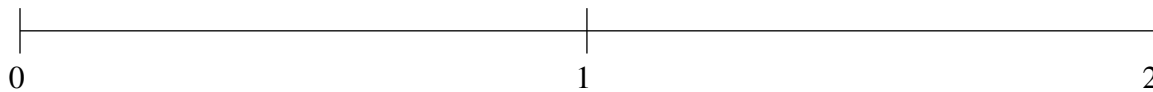


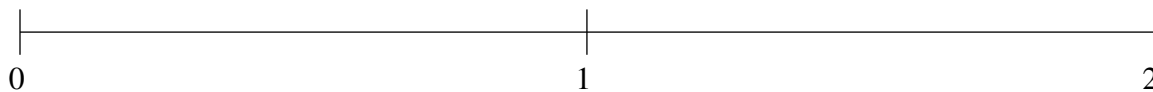
Classification de Fractions (I)

À l'aide des droites numériques, classifiez chaque série de fractions ci-dessous en ordre croissant.

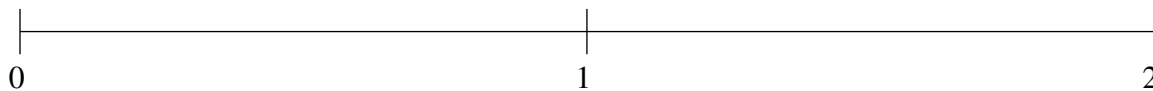
$$1\frac{3}{5}, \frac{6}{7}, 1\frac{1}{5}, \frac{1}{2}, \frac{1}{9}$$



$$1\frac{3}{5}, \frac{5}{6}, \frac{1}{8}, \frac{4}{9}, 1\frac{1}{4}$$



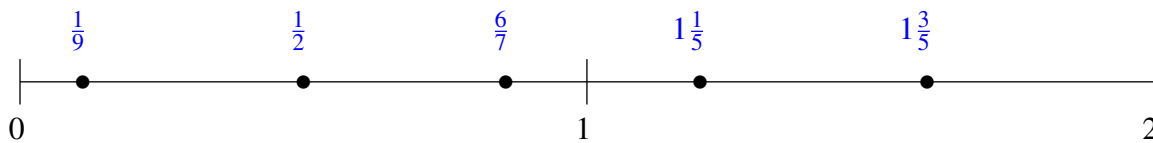
$$1\frac{1}{2}, \frac{1}{3}, 1\frac{1}{6}, \frac{2}{3}, 1\frac{4}{5}$$



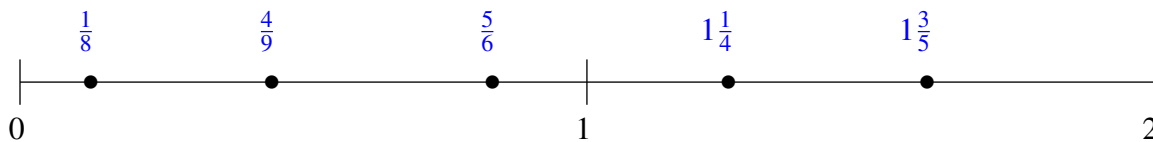
Classification de Fractions (I) Solutions

À l'aide des droites numériques, classifiez chaque série de fractions ci-dessous en ordre croissant.

$$1\frac{3}{5}, \frac{6}{7}, 1\frac{1}{5}, \frac{1}{2}, \frac{1}{9}$$



$$1\frac{3}{5}, \frac{5}{6}, \frac{1}{8}, \frac{4}{9}, 1\frac{1}{4}$$



$$1\frac{1}{2}, \frac{1}{3}, 1\frac{1}{6}, \frac{2}{3}, 1\frac{4}{5}$$

