


Modèles de Cinquièmes (C)

Instructions: Inscrivez le numérateur correspondant.




$$\frac{4}{5}$$




$$\frac{\quad}{5}$$




$$\frac{\quad}{5}$$




$$\frac{\quad}{5}$$



$$\frac{\quad}{5}$$



$$\frac{\quad}{5}$$



$$\frac{\quad}{5}$$



$$\frac{\quad}{5}$$



$$\frac{\quad}{5}$$