


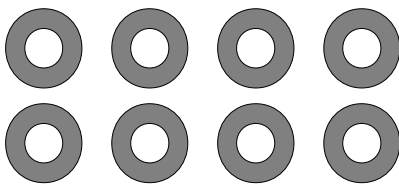
Fraction d'un Groupe (E)



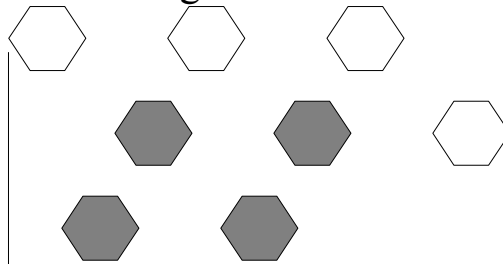
Dans ce groupe,
il y a six carrés.
Deux carrés sont
coloriés.

$\frac{2}{6}$ carrés coloriés
 $\frac{2}{6}$ carrés en groupe


Pour chaque groupe, dites combien de formes/figures sont coloriées.



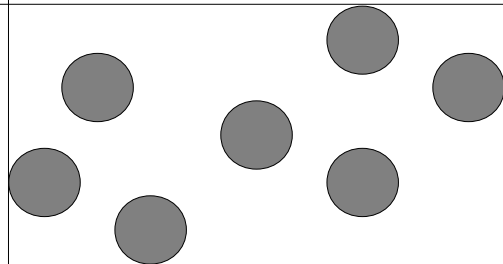
—



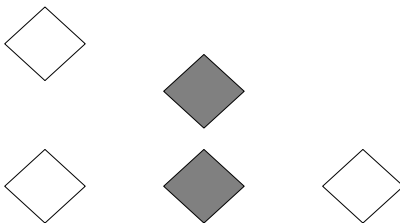
—



—




—



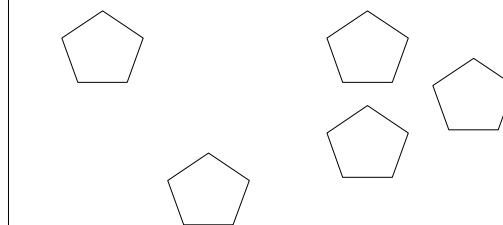
—



—



—



—

Thomas abîma son crayon et coloria aucune de six croix. Quelle est la fraction qu'il devait écrire? _____