


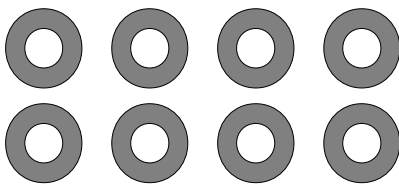
Fraction d'un Groupe (E)



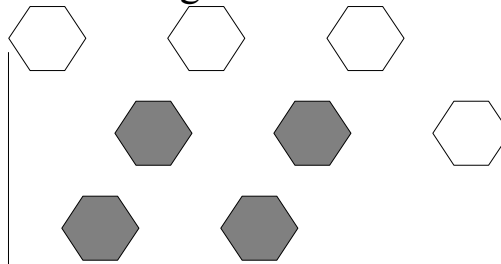
Dans ce groupe,
il y a six carrés.
Deux carrés sont
coloriés.

$\frac{2}{6}$ carrés coloriés
 $\frac{2}{6}$ carrés en groupe


Pour chaque groupe, dites combien de formes/figures sont coloriées.



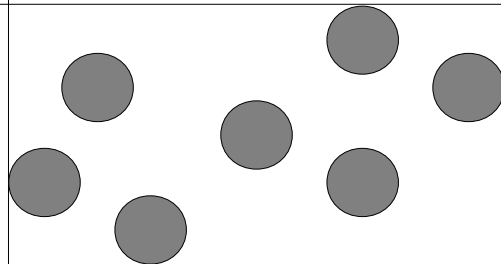
—



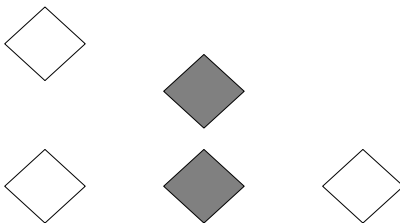
—



—




—



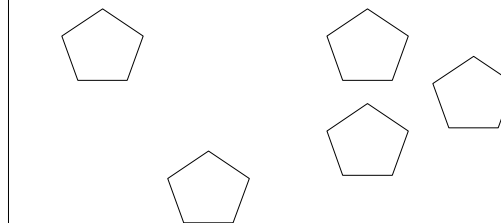
—



—



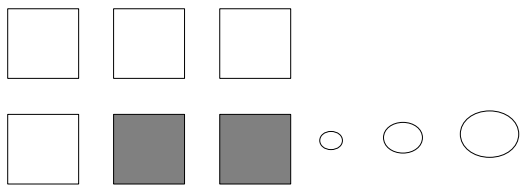
—



—

Thomas abîma son crayon et coloria aucune de six croix. Quelle est la fraction qu'il devait écrire? —

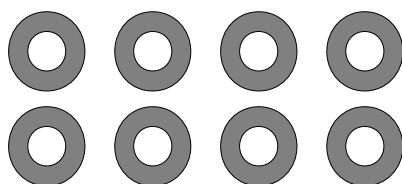
Fraction d'un Groupe (E) Réponses



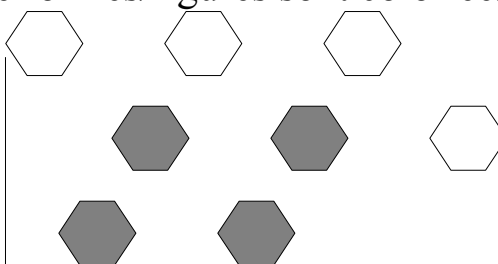
Dans ce groupe,
il y a six carrés.
Deux carrés sont
coloriés.

$\frac{2}{6}$ carrés coloriés
 $\frac{2}{6}$ carrés en groupe


Pour chaque groupe, dites combien de formes/figures sont coloriées.



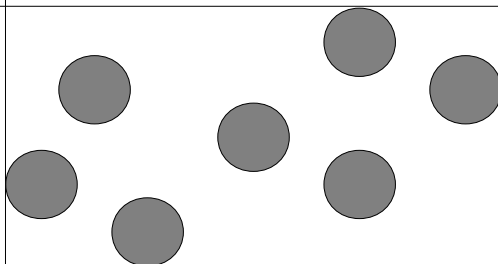
$\frac{8}{8}$



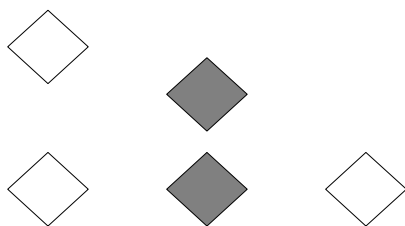
$\frac{4}{8}$



$\frac{1}{4}$




$\frac{7}{7}$



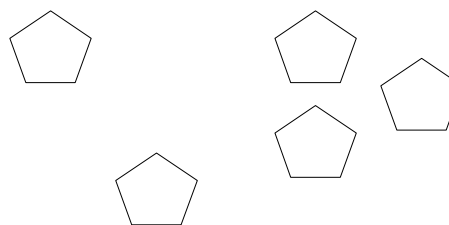
$\frac{2}{5}$



$\frac{4}{5}$



$\frac{6}{9}$



$\frac{0}{5}$

Thomas abîma son crayon et coloria aucune de six croix. Quelle est la fraction qu'il devait écrire?

$\frac{0}{6}$