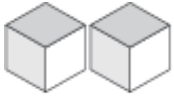
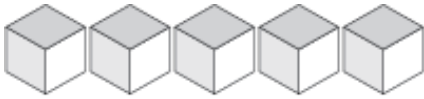


# Représentation de Nombres (E)

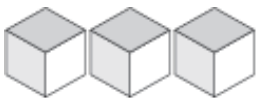
Quel chiffre est représenté par chaque groupe de blocs d'unité?



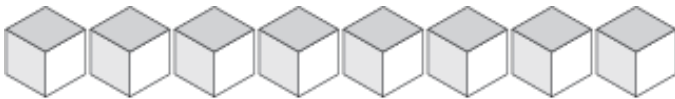
\_\_\_\_\_



\_\_\_\_\_



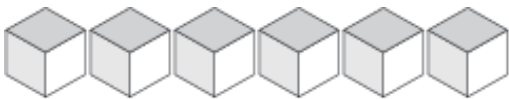
\_\_\_\_\_



\_\_\_\_\_



\_\_\_\_\_



\_\_\_\_\_



\_\_\_\_\_



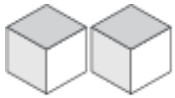
\_\_\_\_\_



\_\_\_\_\_

# Représentation de Nombres (E) Solutions

Quel chiffre est représenté par chaque groupe de blocs d'unité?



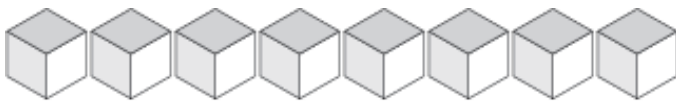
2



5



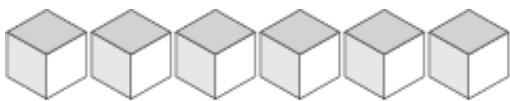
3



8



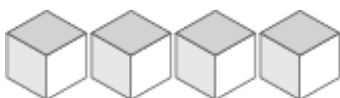
1



6



7



4



9