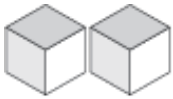
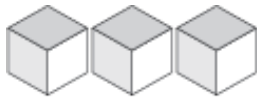


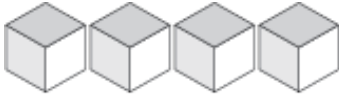
Représentation de Nombres (A)

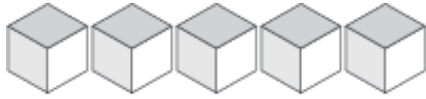
Quel chiffre est représenté par chaque groupe de blocs d'unité?

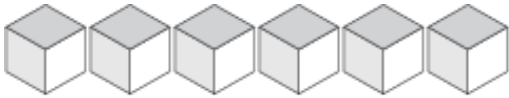




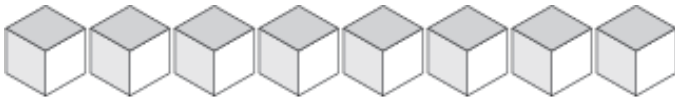


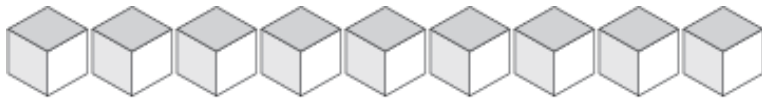










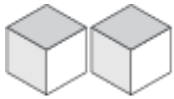


Représentation de Nombres (A) Solutions

Quel chiffre est représenté par chaque groupe de blocs d'unité?



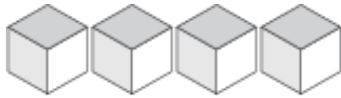
1



2



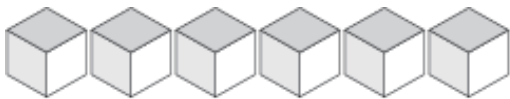
3



4



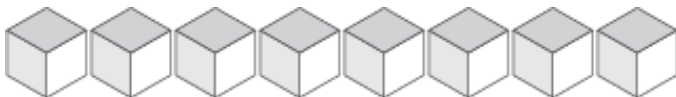
5



6



7



8



9