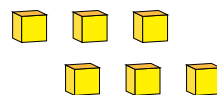
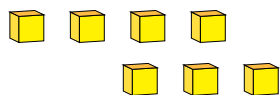
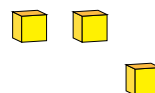
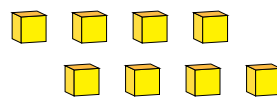
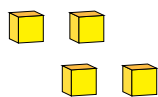


Représentation de Nombres (I)

Quel chiffre est représenté par chaque groupe de blocs d'unité?



1

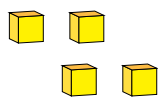


Représentation de Nombres (I) Réponses

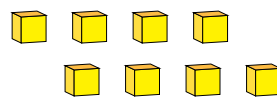
Quel chiffre est représenté par chaque groupe de blocs d'unité?



1



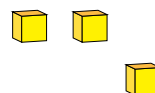
4



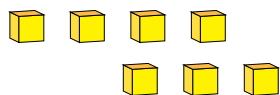
8



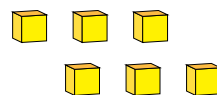
1



3



7



6