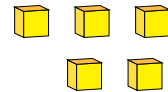
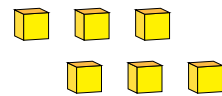
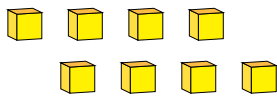
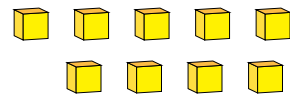
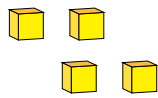


# Représentation de Nombres (E)

Quel chiffre est représenté par chaque groupe de blocs d'unité?



1

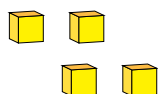


# Représentation de Nombres (E) Réponses

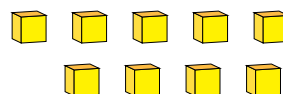
Quel chiffre est représenté par chaque groupe de blocs d'unité?



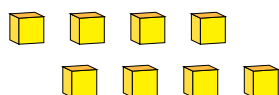
1



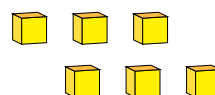
4



9



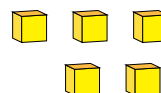
8



6



1



5