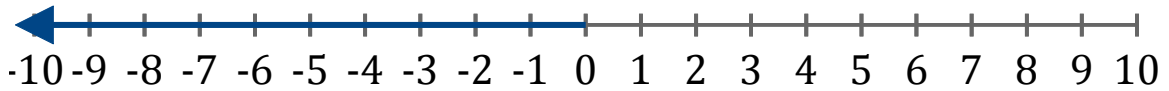


Systeme d'Inequations (I)

Trouvez les solutions des systemes d'inequations suivantes.

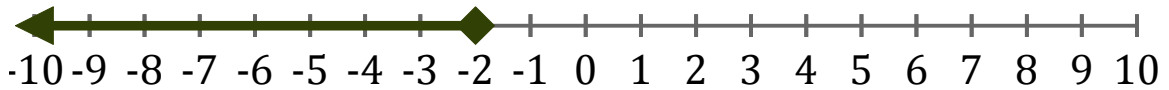
1. _____



2. _____



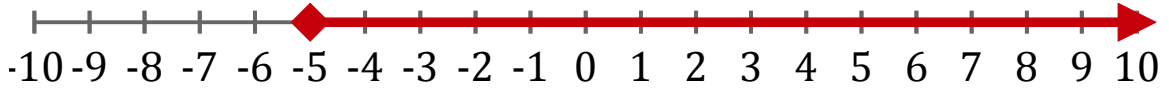
3. _____



4. _____



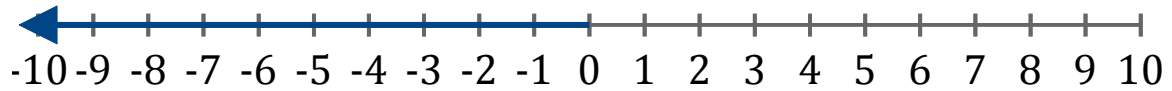
5. _____



Systeme d'Inéquations (I) Réponses

Trouvez les solutions des systèmes d'inéquations suivantes.

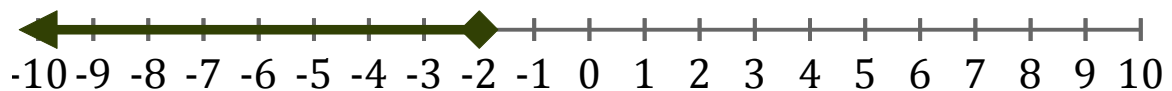
1. $x < 0$



2. $x > -3$



3. $x \leq -2$



4. $x \leq 5$



5. $x \geq -5$

