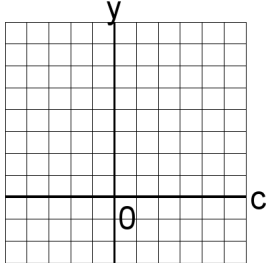


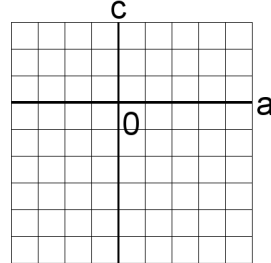
# Systèmes Linéaires et Graphiques (D)

Trouvez la solution de chaque système d'équations à l'aide du graphique.

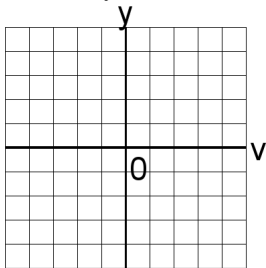
1.  $3c - y = -8$   
 $3c = -9$



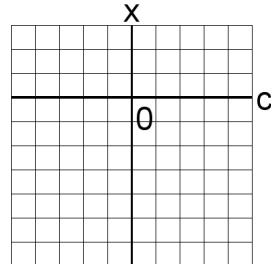
4.  $6a - 3c = 18$   
 $-a - c = 0$



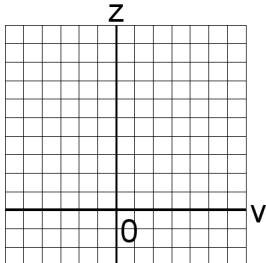
2.  $4v = -12$   
 $-3v - y = 5$



5.  $-2c + 4x = -28$   
 $-4c - 2x = -6$



3.  $6v - 3z = -30$   
 $2z = 8$



6.  $5b - y = 2$   
 $-5b - y = -8$

